



UNIVERSITY OF CAMBRIDGE INTERNATIONAL EXAMINATIONS  
International General Certificate of Secondary Education

**DESIGN AND TECHNOLOGY**

**0445/01**

Paper 1 Design

**May/June 2008**

**1 hour 15 minutes**

Candidates answer on the pre-printed A3 Answer Sheets.

Additional Materials:      Standard drawing equipment  
   A3 pre-printed Answer Sheets (2)

**To be taken together with the optional paper for which you have been entered in one session of 2 hours and 15 minutes.**

**READ THESE INSTRUCTIONS FIRST**

Write your Centre number, candidate number and name in the spaces on **both** printed Answer Sheets.  
Write in dark blue or black pen.  
You may use a soft pencil for any diagrams, graphs or rough working.  
Do not use staples, paper clips, highlighters, glue or correction fluid.

Answer **one** question.  
Write/draw your answers in the spaces provided on the Answer Sheets.  
You may use a calculator.

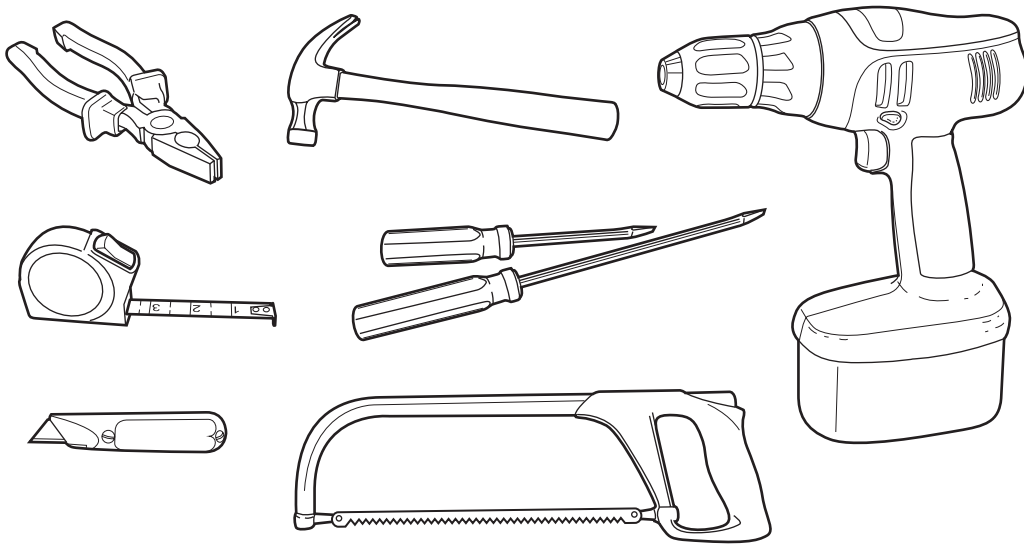
At the end of the examination, fasten all your work securely together.  
The number of marks is given in brackets [ ] at the end of each question or part question.

This document consists of 4 printed A4 pages.



Answer **one** question only on the A3 pre-printed answer sheets provided.

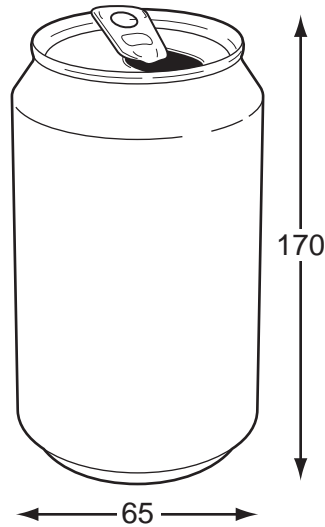
- 1 Many people do simple repair work in the home for which a small range of tools is required.



A device to store and carry the tools shown above would be very helpful.

- (a) List **four** additional points about the function of such a device that you consider to be important. [4]
- (b) Draw **two** ways in which handles could be included on carrying devices. [4]
- (c) Develop and sketch ideas for the storage and carrying device. [12]
- (d) Evaluate your ideas and justify why you have chosen **one** idea to develop more fully. [8]
- (e) Draw, using a method of your own choice, a full solution to your problem. Include construction details and major dimensions. [12]
- (f) Suggest suitable materials for your solution and give reasons for your choice. [4]
- (g) Outline a method used to manufacture **one** part of your solution in the school workshop. [6]


- 2 Students are being encouraged to recycle drinks cans whenever possible.



You have been asked to design a lightweight folding collection unit, to be distributed to all schools, that would encourage students to recycle their cans.

- (a) List **four** additional points about the function of such a unit that you consider to be important. [4]
- (b) Use sketches and notes to show **two** methods by which flexible joints can be used on card products. [4]
- (c) Develop and sketch ideas for the recycling unit. [12]
- (d) Evaluate your ideas and justify why you have chosen **one** idea to develop more fully. [8]
- (e) Draw, using a method of your own choice, a full solution to your problem. Include construction details and major dimensions. [12]
- (f) Suggest suitable materials for your solution and give reasons for your choice. [4]
- (g) Outline the method of producing a prototype of the recycling unit in the school graphics studio. [6]

- 3 It is often difficult to find somewhere to hang out washing when camping.



Design a portable free-standing clothes-drying device that could be used when camping.

- (a) List **four** additional points about the function of such a drying device that you consider to be important. [4]
- (b) Draw any **two** temporary joining methods for wood, plastic or metal. [4]
- (c) Develop and sketch ideas for the drying device. [12]
- (d) Evaluate your ideas and justify why you have chosen **one** idea to develop more fully. [8]
- (e) Draw, using a method of your own choice, a full solution to your problem. Include construction details and major dimensions. [12]
- (f) Suggest suitable materials for your solution and give reasons for your choice. [4]
- (g) Outline a method used to manufacture **one** part of your solution in the school workshop. [6]

Permission to reproduce items where third-party owned material protected by copyright is included has been sought and cleared where possible. Every reasonable effort has been made by the publisher (UCLES) to trace copyright holders, but if any items requiring clearance have unwittingly been included the publisher will be pleased to make amends at the earliest possible opportunity.

University of Cambridge International Examinations is part of the Cambridge Assessment Group. Cambridge Assessment is the brand name of University of Cambridge Local Examinations Syndicate (UCLES), which is itself a department of the University of Cambridge.