



UNIVERSITY OF CAMBRIDGE INTERNATIONAL EXAMINATIONS
General Certificate of Education Advanced Subsidiary Level and Advanced Level

GEOGRAPHY

9696/03

Paper 3 Advanced Human Options

May/June 2009

INSERT

1 hour 30 minutes

READ THESE INSTRUCTIONS FIRST

This Insert contains all the Figures and the Table referred to in the questions.

This document consists of **4** printed pages.



Fig. 1 for Question 2

The factors of production

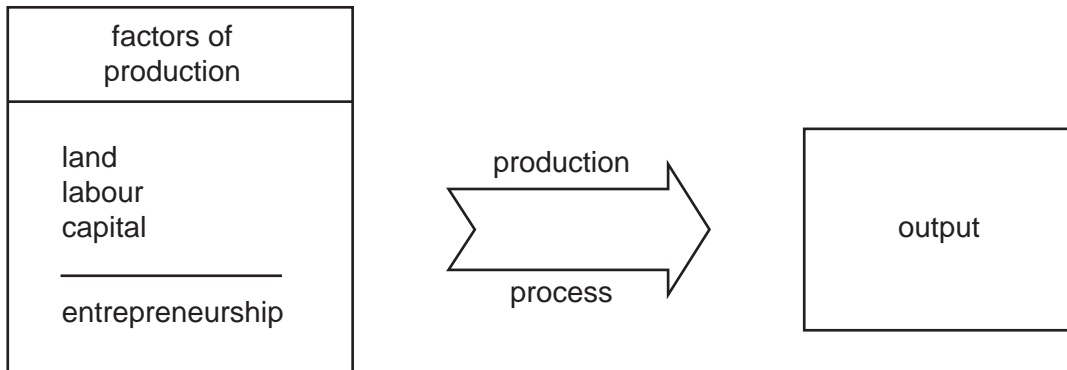


Fig. 2 for Question 3

Energy consumption from different sources for world regions, 2006

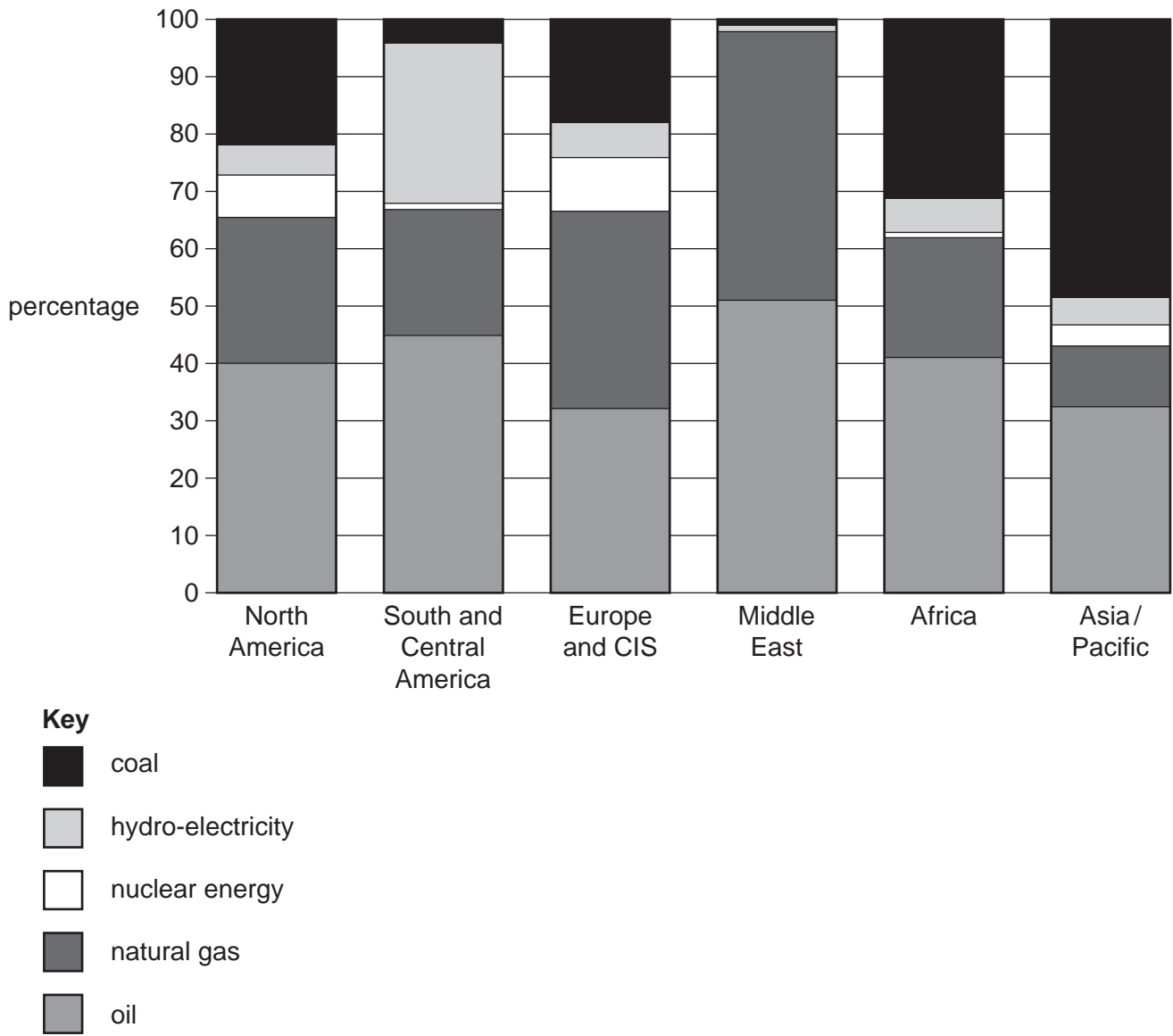


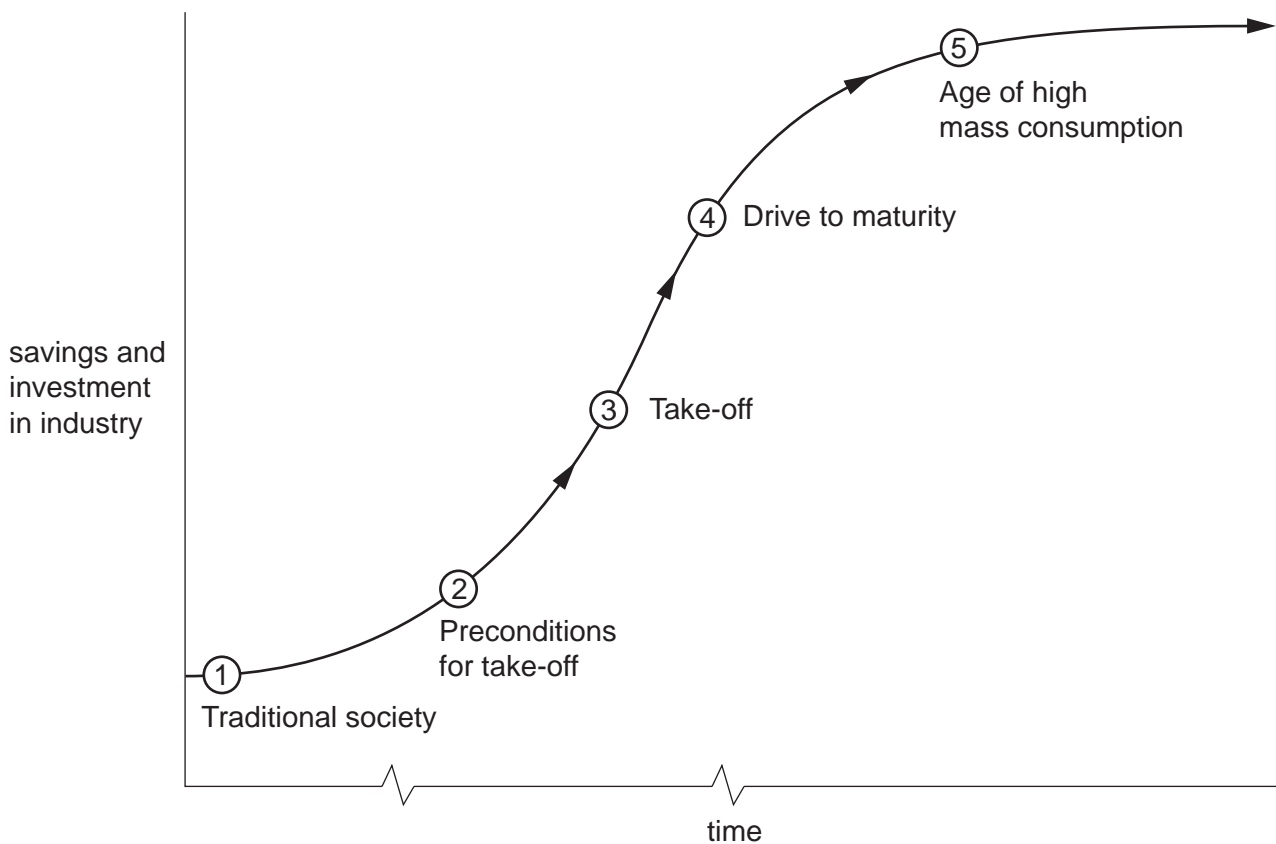
Table 1 for Question 6

International tourist arrivals

world region	international tourist arrivals (millions)			
	actual		forecast	
	1995	2000	2010	2020
Europe	335	390	527	717
East Asia / Pacific	80	116	231	438
Americas	110	134	195	284
Africa	20	27	46	75
Middle East	14	19	37	69
South Asia	4	6	11	19
<i>total</i>	<i>563</i>	<i>692</i>	<i>1047</i>	<i>1602</i>

Fig. 3 for Question 7

Rostow's model of economic growth



Permission to reproduce items where third-party owned material protected by copyright is included has been sought and cleared where possible. Every reasonable effort has been made by the publisher (UCLES) to trace copyright holders, but if any items requiring clearance have unwittingly been included, the publisher will be pleased to make amends at the earliest possible opportunity.

University of Cambridge International Examinations is part of the Cambridge Assessment Group. Cambridge Assessment is the brand name of University of Cambridge Local Examinations Syndicate (UCLES), which is itself a department of the University of Cambridge.