
GEOGRAPHY

9696/31

Paper 3 Advanced Human Options

May/June 2014

INSERT

1 hour 30 minutes

READ THESE INSTRUCTIONS FIRST

This Insert contains all the Figures and Photographs referred to in the questions.



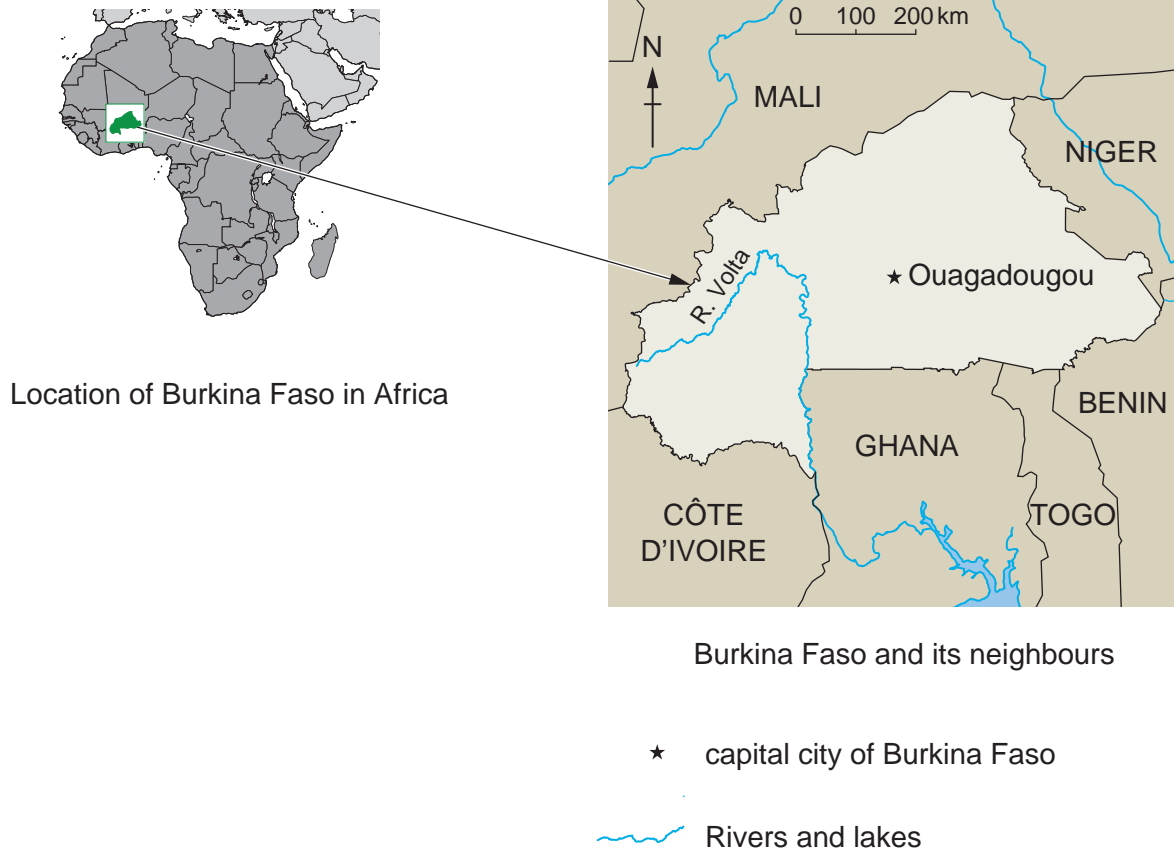
This document consists of **5** printed pages and **3** blank pages.

Fig. 1 for Question 1

Extract from a report on Burkina Faso in 2012

‘Drought and Food Shortages threaten the People of Northern Burkina Faso.’

Humanitarian organisations express great concern for the people of Burkina Faso, a country in the Sahel region of West Africa. Most farmers in this country are subsistence farmers and the majority of households in the north are pastoralists. These people regularly face food shortages; usually at the end of the dry season in May or June. This year, shortages are so severe that families are competing with their animals for food from the wild, such as from thorny bushes.



Photographs A and B for Question 4

Photograph A An area on the edge of a town in South America

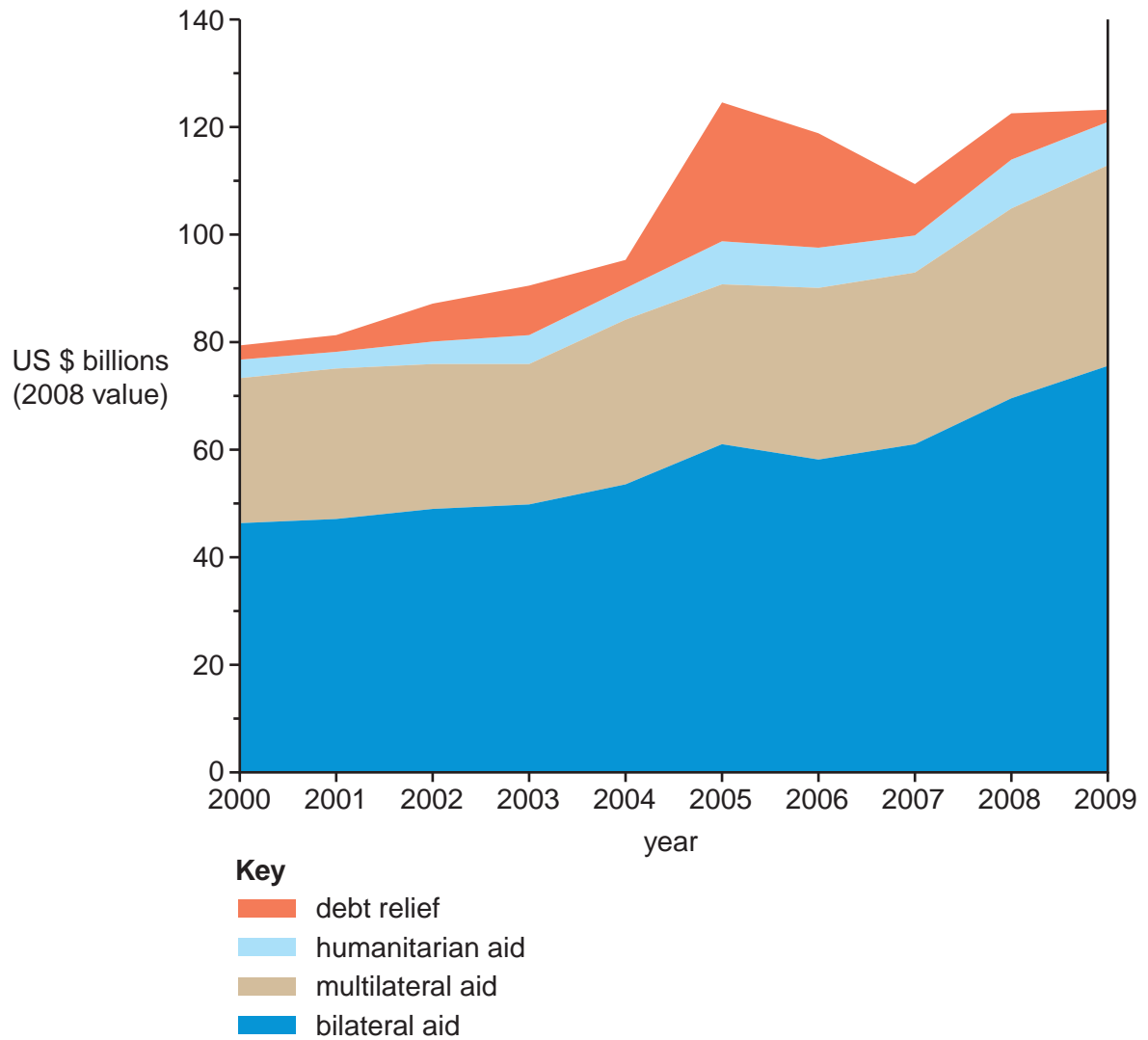


Photograph B A rural area in northern Australia



Fig. 2 for Question 5

Government aid from MEDCs, 2000–2009



Figs 3A and 3B for Question 8

Fig. 3A

Human development index in Argentina in 1990



Key

personal wellbeing

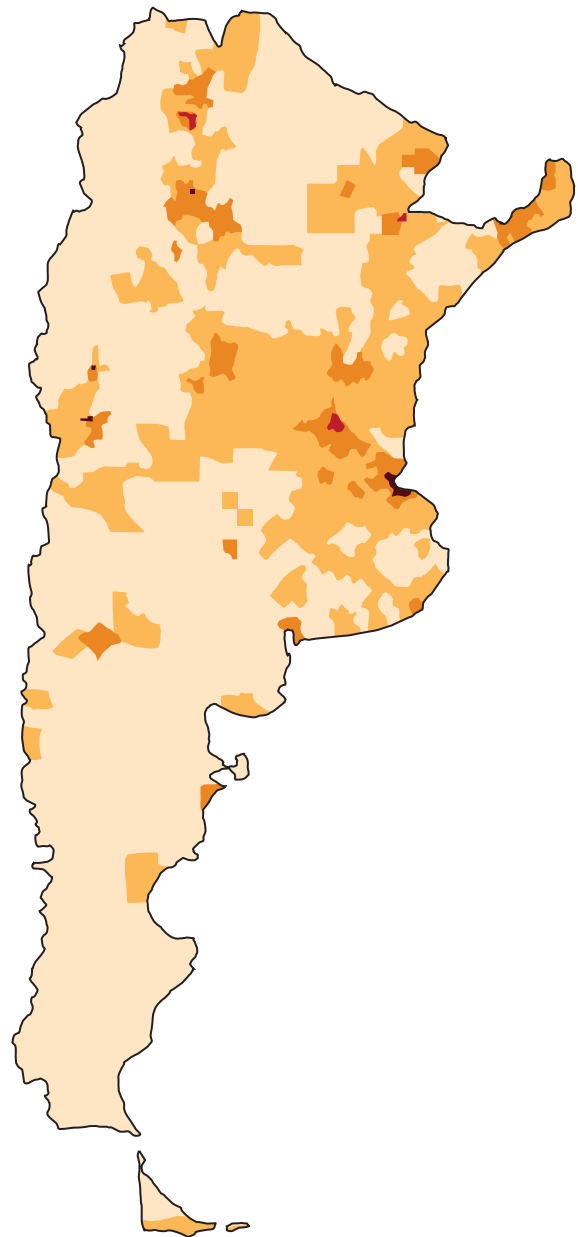
- very high HDI 0.900 or over
- high HDI 0.800–0.899
- medium HDI 0.700–0.799

Santa Cruz province name

— 30° line of latitude

Fig. 3B

Population density in Argentina 1990



Key

persons per square km

- > 1000
- 250–1000
- 25–249
- 5–24
- < 4

BLANK PAGE

Copyright Acknowledgements:

- Question 1 Fig. 1 © *The World Factbook*; Central Intelligence Agency; <https://www.cia.gov/library/publications/the-world-factbook/geos/uv.html>;
August 2012.
- Question 4 Photograph A © www.ecocitylab.org/laboquilla.html
- Question 4 Photograph B © Bulk Solids Handling; www.bulk-solids-handling.com/management/projects_contract/articles/347007.
- Question 5 Fig. 2 © United Nations; http://www.un.org/millenniumgoals/pdf/MDG_Report2010_En_r15_-low_res_20100615_-.pdf; August 2011.
- Question 8 Figs 3A & 3B © Socioeconomic Data & Applications Center; <http://sedac.ciesin.columbia.edu/gpw/country.jsp?iso=ARG>.

Permission to reproduce items where third-party owned material protected by copyright is included has been sought and cleared where possible. Every reasonable effort has been made by the publisher (UCLES) to trace copyright holders, but if any items requiring clearance have unwittingly been included, the publisher will be pleased to make amends at the earliest possible opportunity.

Cambridge International Examinations is part of the Cambridge Assessment Group. Cambridge Assessment is the brand name of University of Cambridge Local Examinations Syndicate (UCLES), which is itself a department of the University of Cambridge.