
GEOGRAPHY

9696/11

Paper 1 Core Geography

May/June 2015

INSERT

3 hours

READ THESE INSTRUCTIONS FIRST

This Insert contains all the Figures, Photographs and the Table referred to in the questions.



This document consists of 7 printed pages and 1 blank page.

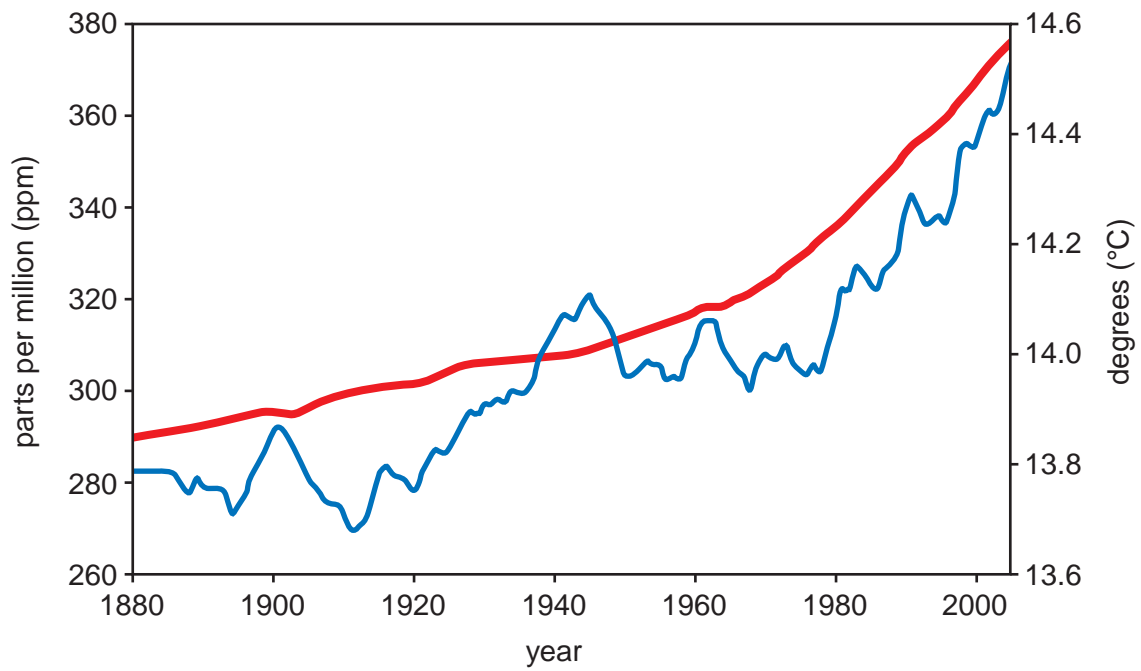
Photograph A for Question 1

A river channel



Fig. 1 for Question 2

The concentration of carbon dioxide (CO₂) and the average annual surface temperature of the Earth, 1880–2005

**Key**

- CO₂ concentration
- average surface temperature

Fig. 2 for Question 3

Some types of mass movement

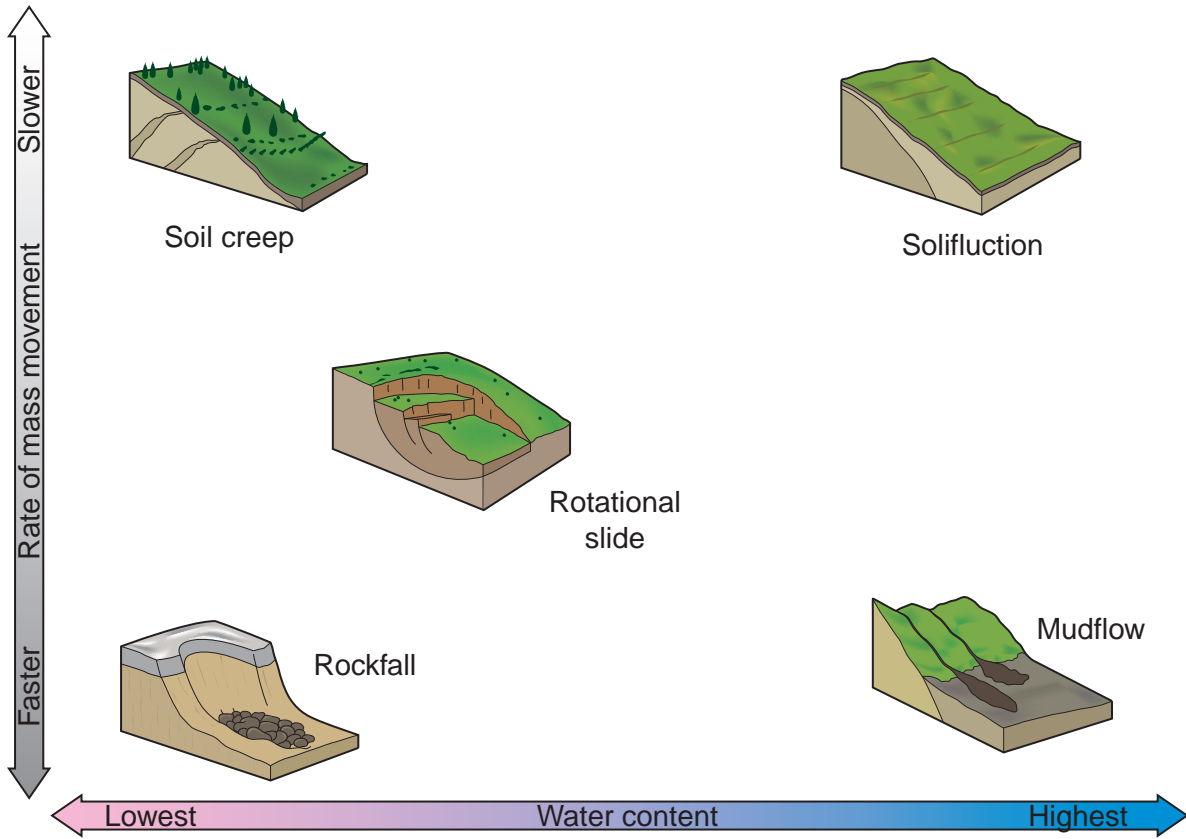
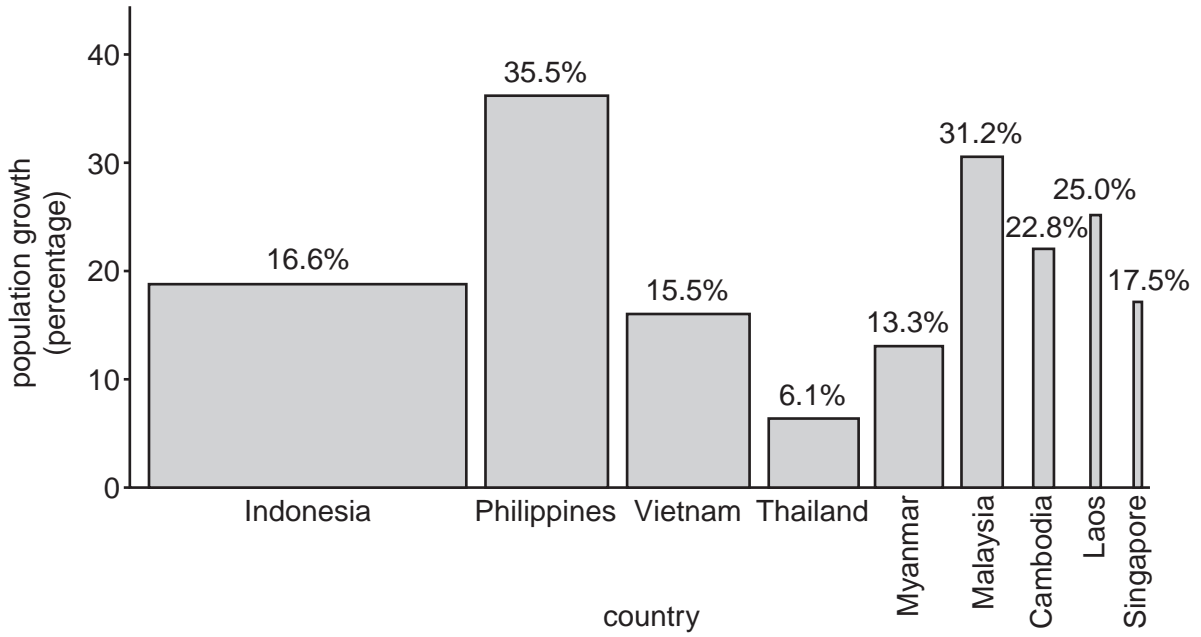


Fig. 3 for Question 4

Projected population growth for countries in South-east Asia, 2010–30



The width of each bar shows the size of the total population of the country named.
The height of the bar shows the projected percentage rate of population growth.
The area of the bar shows the projected increase in total population.

Table 1 for Question 5

Immigration to Germany from selected countries of the European Union (EU) in 2011–12

source country	increase in immigration between 2010–11 and 2011–12	
	percentage	total number of migrants*
Bulgaria	+14	7 000
Greece	+43	10 000
Hungary	+31	13 000
Italy	+40	12 000
Poland	+8	13 000
Portugal	+43	4 000
Romania	+23	21 000
Slovenia	+62	2 000
Spain	+45	9 000

* to the nearest thousand

Photograph B for Question 6

Part of a shanty town (squatter settlement) in a city in Africa, 2011



BLANK PAGE

Permission to reproduce items where third-party owned material protected by copyright is included has been sought and cleared where possible. Every reasonable effort has been made by the publisher (UCLES) to trace copyright holders, but if any items requiring clearance have unwittingly been included, the publisher will be pleased to make amends at the earliest possible opportunity.

To avoid the issue of disclosure of answer-related information to candidates, all copyright acknowledgements are reproduced online in the Cambridge International Examinations Copyright Acknowledgements Booklet. This is produced for each series of examinations and is freely available to download at www.cie.org.uk after the live examination series.

Cambridge International Examinations is part of the Cambridge Assessment Group. Cambridge Assessment is the brand name of University of Cambridge Local Examinations Syndicate (UCLES), which is itself a department of the University of Cambridge.