



UNIVERSITY OF CAMBRIDGE INTERNATIONAL EXAMINATIONS  
General Certificate of Education Advanced Subsidiary Level and Advanced Level

---

**GEOGRAPHY**

**9696/21**

Paper 2 Advanced Physical Options

**October/November 2011**

INSERT

**1 hour 30 minutes**

---

**READ THESE INSTRUCTIONS FIRST**

This Insert contains all the Figures and the Photograph referred to in the questions.

---

This document consists of **4** printed pages.



**Photograph A for Question 1**  
**A granite landform in South Africa**



Fig. 1 for Question 3

Three types of cliff profile

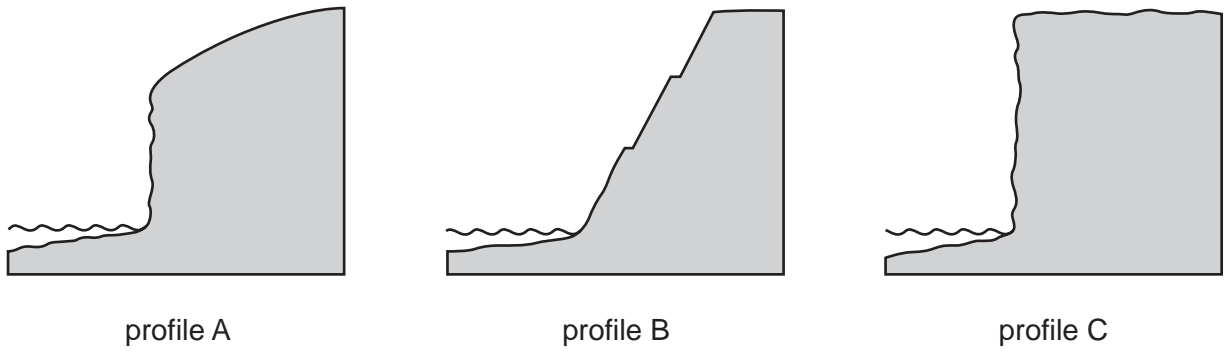
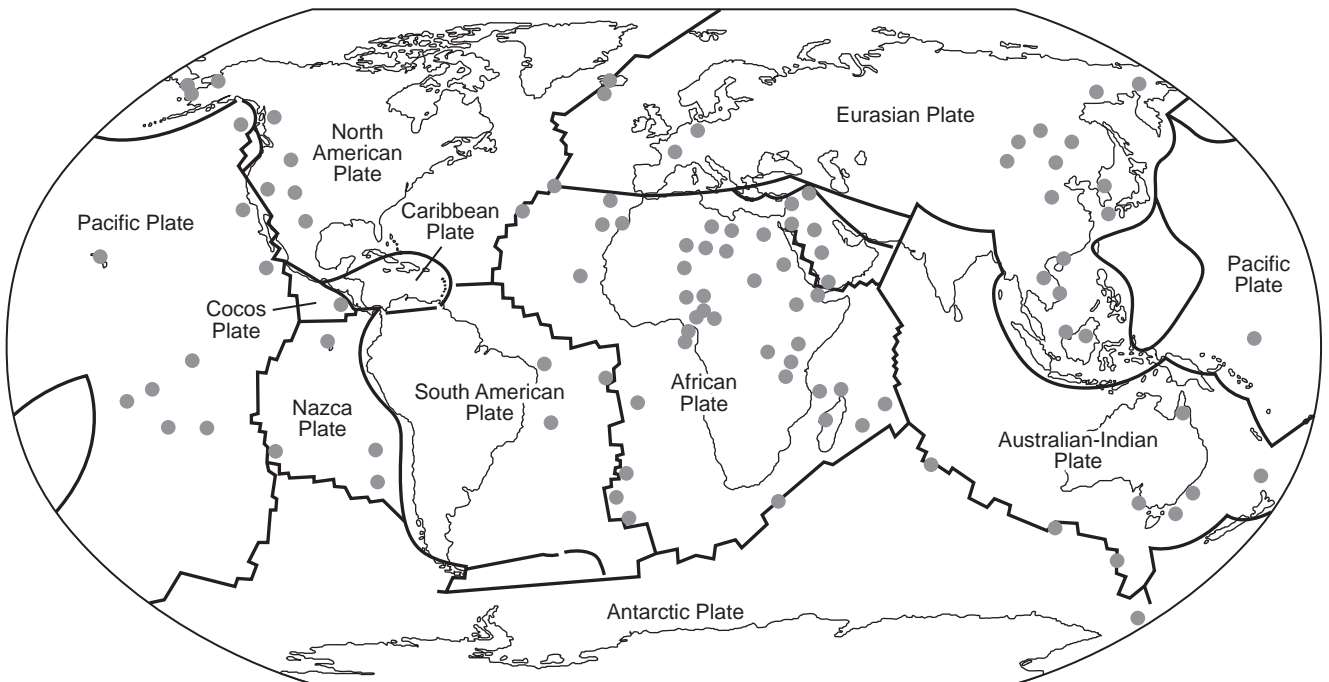


Fig. 2 for Question 5

Global distribution of volcanic hot spots



Key



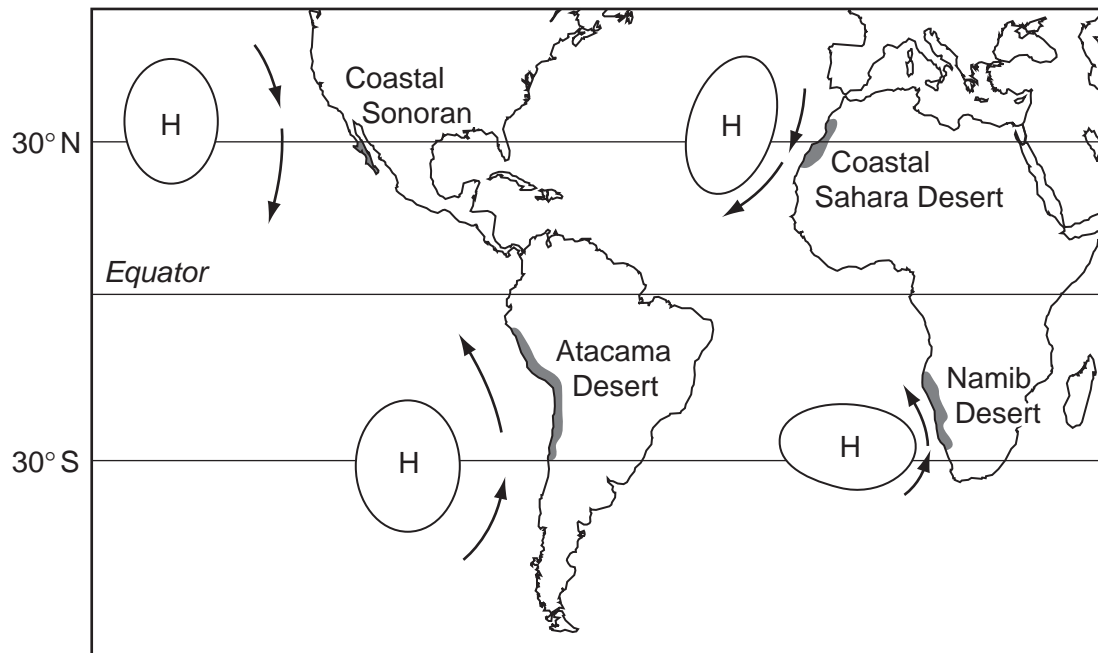
-  plate boundaries
-  volcanic hot spot

Fig. 3 for Question 7

## Location of some coastal deserts



Permission to reproduce items where third-party owned material protected by copyright is included has been sought and cleared where possible. Every reasonable effort has been made by the publisher (UCLES) to trace copyright holders, but if any items requiring clearance have unwittingly been included, the publisher will be pleased to make amends at the earliest possible opportunity.

University of Cambridge International Examinations is part of the Cambridge Assessment Group. Cambridge Assessment is the brand name of University of Cambridge Local Examinations Syndicate (UCLES), which is itself a department of the University of Cambridge.