



UNIVERSITY OF CAMBRIDGE INTERNATIONAL EXAMINATIONS
General Certificate of Education Advanced Subsidiary Level and Advanced Level

GEOGRAPHY

9696/33

Paper 3 Advanced Human Options

October/November 2013

INSERT

1 hour 30 minutes

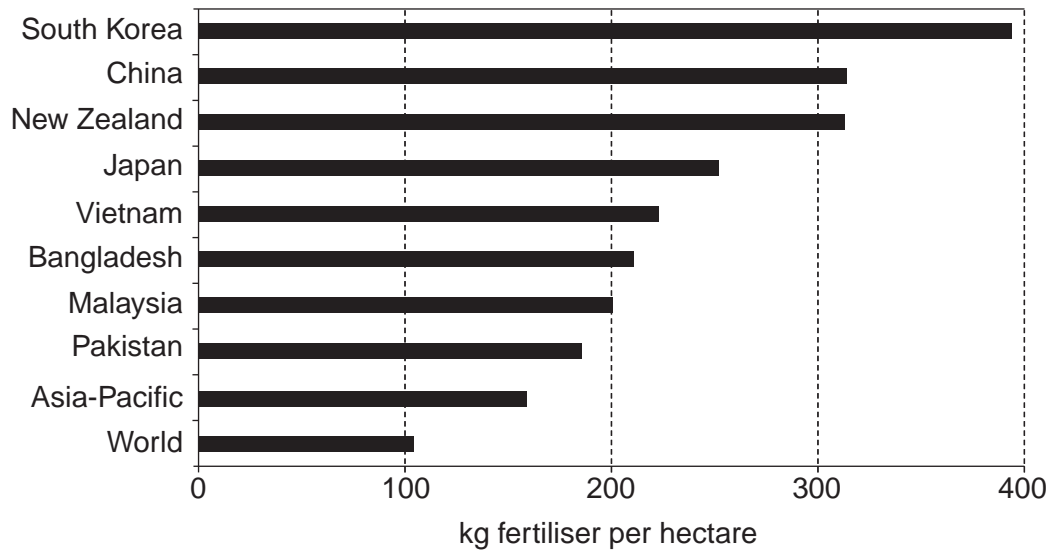
READ THESE INSTRUCTIONS FIRST

This Insert contains all the Figures referred to in the questions.

This document consists of **5** printed pages and **3** blank pages.



Fig. 1 for Question 1

Countries in Asia-Pacific with the most intensive agriculture in terms of fertiliser* input, 2005

* organic fertilisers, such as dung, and inorganic (artificial) fertilisers

Fig. 2 for Question 4

The Amarakaeri Communal Reserve (RCA), Peru, South America, 2005

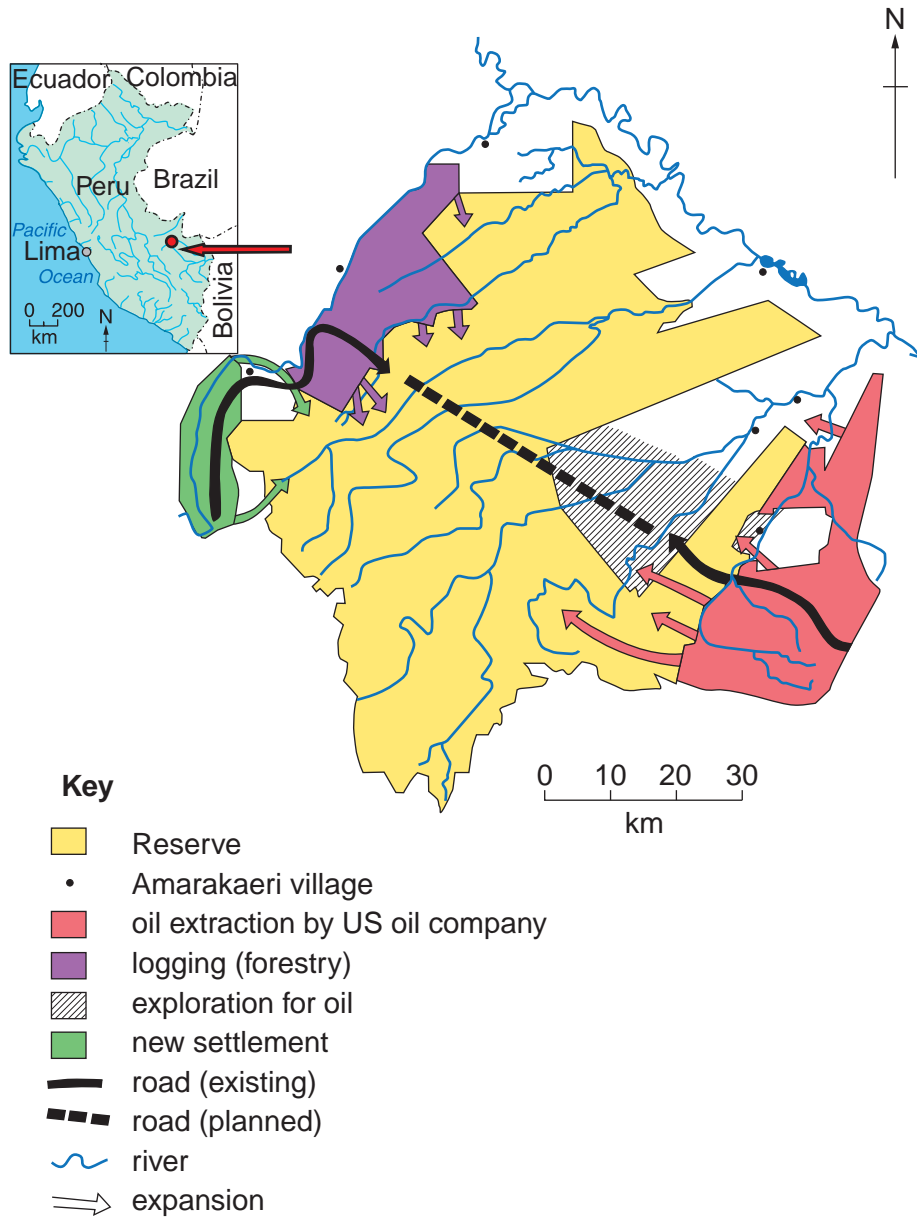



Fig. 3 for Question 6

An initiative to promote Dubai as a tourist destination

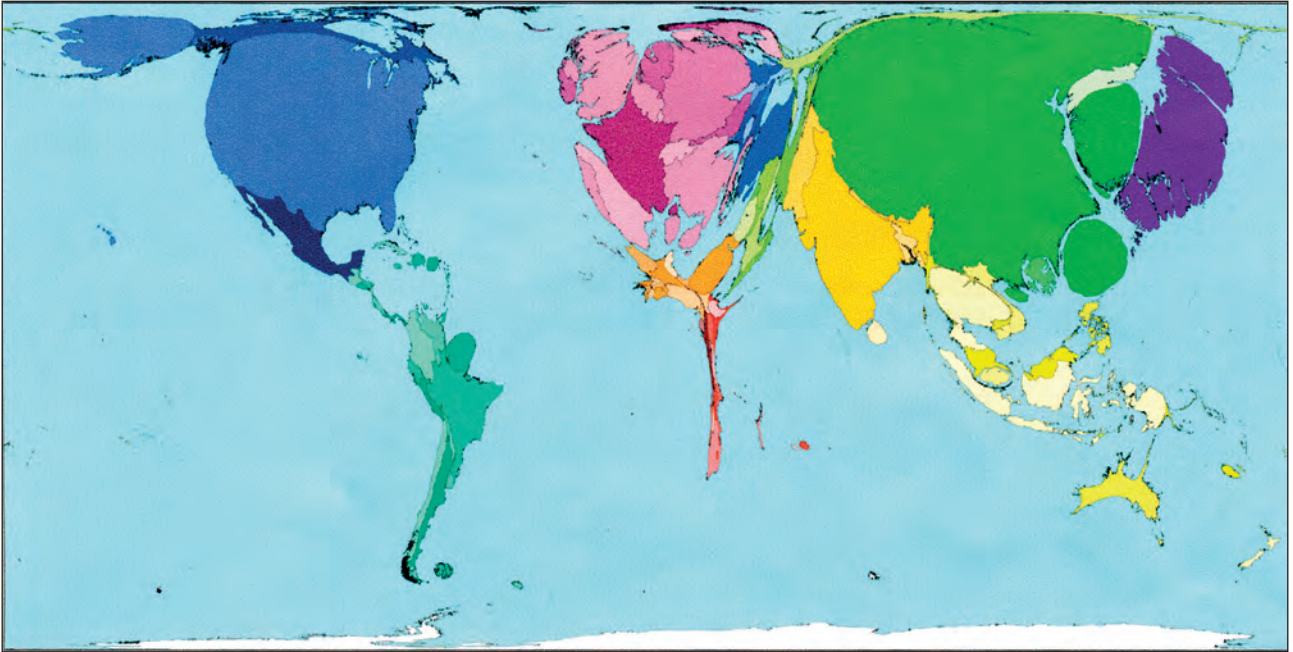
Do you have the wrong perception of Dubai? It's time to change.

You don't need to spend a fortune to see the world's most exciting destination. Dubai has something to offer for everyone, regardless of their budget.

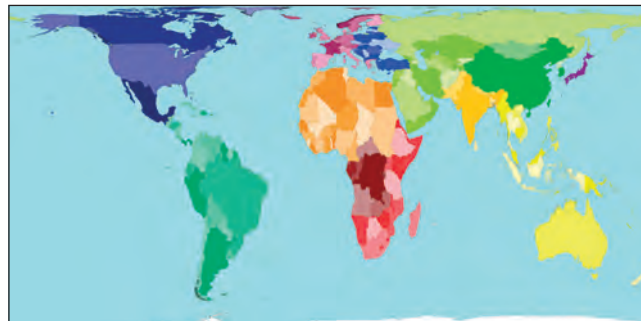
Call the agents now to find out about special packages to Dubai – and get a free Dubai map and Dubai luggage tag, while stocks last.

Fig. 4 for Question 7

Projected gross domestic product (GDP), by country, in 2015



Country size shows the proportion of the world's gross domestic product (GDP), in US dollars, adjusted for purchasing power parity (PPP), predicted to be produced there in 2015. Land area of the countries is shown below, for comparison.



BLANK PAGE

Permission to reproduce items where third-party owned material protected by copyright is included has been sought and cleared where possible. Every reasonable effort has been made by the publisher (UCLES) to trace copyright holders, but if any items requiring clearance have unwittingly been included, the publisher will be pleased to make amends at the earliest possible opportunity.

University of Cambridge International Examinations is part of the Cambridge Assessment Group. Cambridge Assessment is the brand name of University of Cambridge Local Examinations Syndicate (UCLES), which is itself a department of the University of Cambridge.