



UNIVERSITY OF CAMBRIDGE INTERNATIONAL EXAMINATIONS  
International General Certificate of Secondary Education

CANDIDATE  
NAME

CENTRE  
NUMBER

--	--	--	--	--

CANDIDATE  
NUMBER

--	--	--	--

\* 3 7 6 9 1 5 8 0 9 3 \*

**CAMBRIDGE INTERNATIONAL MATHEMATICS**

**0607/04**

Paper 4 (Extended)

**October/November 2013**

**2 hours 15 minutes**

Candidates answer on the Question Paper.

Additional Materials: Geometrical Instruments  
Graphics Calculator

**READ THESE INSTRUCTIONS FIRST**

Write your Centre number, candidate number and name on all the work you hand in.

Write in dark blue or black pen.

Do not use staples, paper clips, highlighters, glue or correction fluid.

You may use a pencil for any diagrams or graphs.

**DO NOT WRITE IN ANY BARCODES.**

Answer **all** the questions.

Unless instructed otherwise, give your answers exactly or correct to three significant figures as appropriate.

Answers in degrees should be given to one decimal place.

For  $\pi$ , use your calculator value.

You must show all the relevant working to gain full marks and you will be given marks for correct methods, including sketches, even if your answer is incorrect.

The number of marks is given in brackets [ ] at the end of each question or part question.

The total number of marks for this paper is 120.

**For Examiner's Use**

--

This document consists of **18** printed pages and **2** blank pages.



## Formula List

For the equation

$$ax^2 + bx + c = 0$$

$$x = \frac{-b \pm \sqrt{b^2 - 4ac}}{2a}$$

Curved surface area,  $A$ , of cylinder of radius  $r$ , height  $h$ .

$$A = 2\pi rh$$

Curved surface area,  $A$ , of cone of radius  $r$ , sloping edge  $l$ .

$$A = \pi rl$$

Curved surface area,  $A$ , of sphere of radius  $r$ .

$$A = 4\pi r^2$$

Volume,  $V$ , of pyramid, base area  $A$ , height  $h$ .

$$V = \frac{1}{3}Ah$$

Volume,  $V$ , of cylinder of radius  $r$ , height  $h$ .

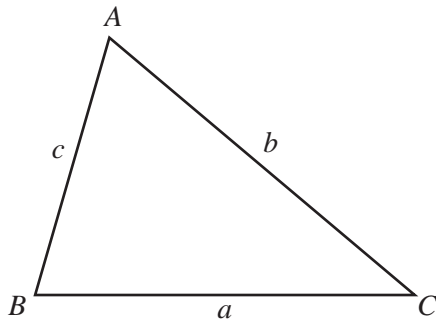
$$V = \pi r^2 h$$

Volume,  $V$ , of cone of radius  $r$ , height  $h$ .

$$V = \frac{1}{3}\pi r^2 h$$

Volume,  $V$ , of sphere of radius  $r$ .

$$V = \frac{4}{3}\pi r^3$$



$$\frac{a}{\sin A} = \frac{b}{\sin B} = \frac{c}{\sin C}$$

$$a^2 = b^2 + c^2 - 2bc \cos A$$

$$\text{Area} = \frac{1}{2}bc \sin A$$

Answer **all** the questions.

For  
Examiner's  
Use

1 Manuel buys a car for \$8000.

(a) Each year the value of the car decreases by 8% of its value at the start of the year.

(i) Calculate the value of the car after 5 years.

Answer(a)(i) \$ ..... [2]

(ii) Calculate how many **more** years it takes for the value of the car to be less than \$4000.

Answer(a)(ii) ..... [2]

(b) Manuel has a journey of 235 km.

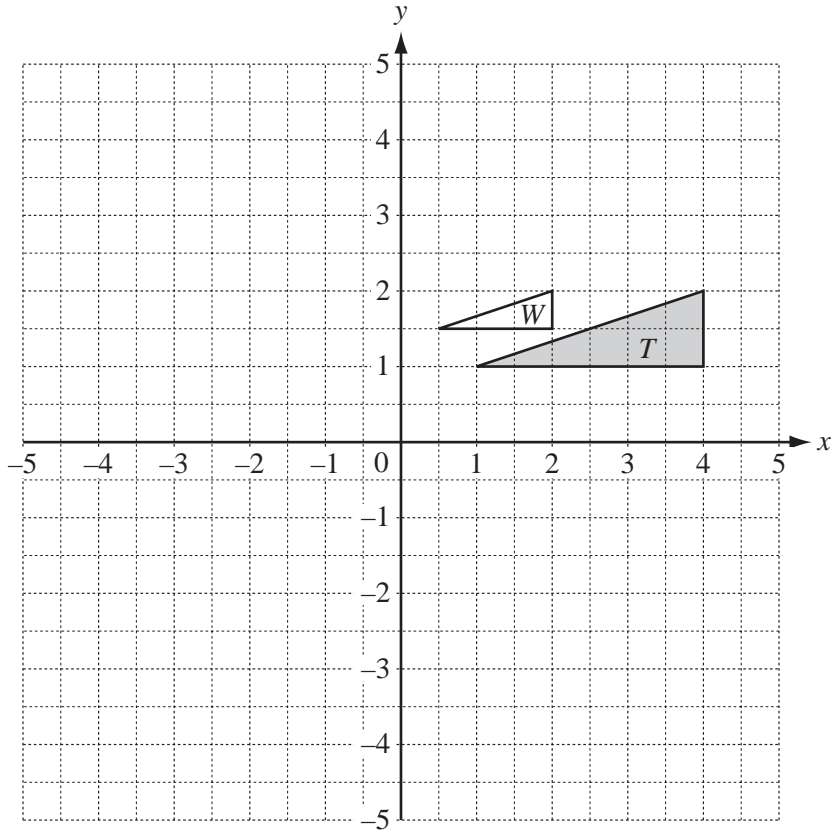
The journey takes 3 h 15 min and the car uses 19.7 litres of fuel.

(i) Calculate the average speed of the journey in kilometres per hour.

Answer(b)(i) ..... km/h [2]

(ii) Find the rate at which the car uses fuel.  
Give your answer in litres per 100 km.

Answer(b)(ii) ..... l/100 km [1]

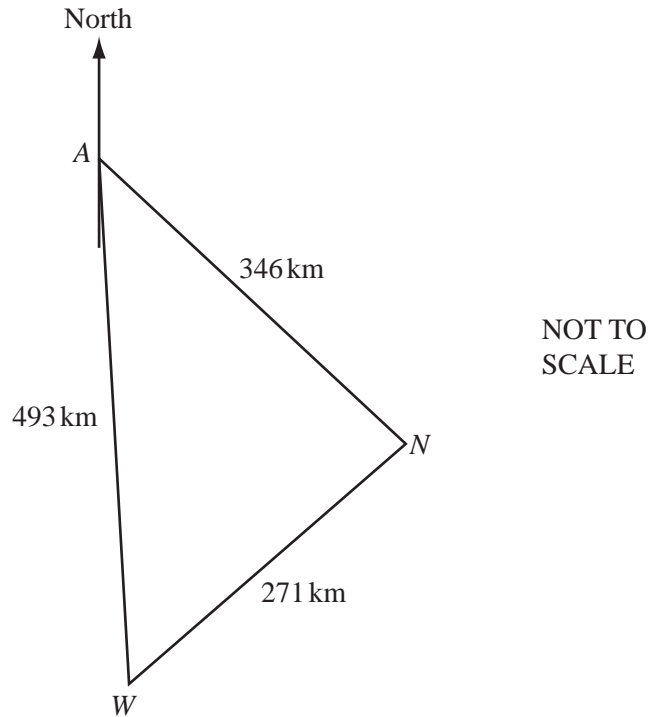


- (a) (i) Reflect triangle  $T$  in the  $x$ -axis. Label the image  $U$ . [2]
- (ii) Rotate triangle  $U$  clockwise through  $90^\circ$  about  $(0, 0)$ . Label the image  $V$ . [2]
- (iii) Describe fully the **single** transformation that maps triangle  $T$  onto triangle  $V$ .

..... [2]

- (b) Describe fully the **single** transformation that maps triangle  $T$  onto triangle  $W$ .
- ..... [3]

3



The diagram shows the straight line distances between the cities Auckland ( $A$ ), Napier ( $N$ ) and Wellington ( $W$ ) in New Zealand.

- (a) The bearing of  $W$  from  $A$  is  $179^\circ$ .

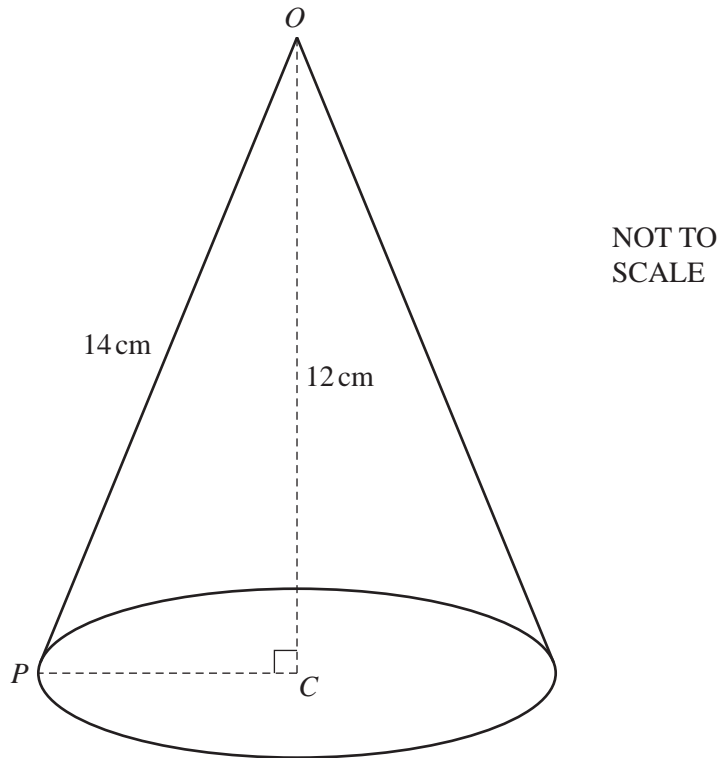
Calculate the bearing of  $N$  from  $A$ .

*Answer(a)* ..... [4]

- (b) A map shows the three cities.  
The scale of the map is 1 : 10 000 000.

Calculate the area of triangle  $ANW$  on the map.  
Give your answer in square centimetres.

*Answer(b)* .....  $\text{cm}^2$  [3]



The diagram shows a hollow cone of height  $12\text{ cm}$  and sloping edge,  $OP$ ,  $14\text{ cm}$ .  $C$  is the centre of the base of the cone.

(a) Calculate

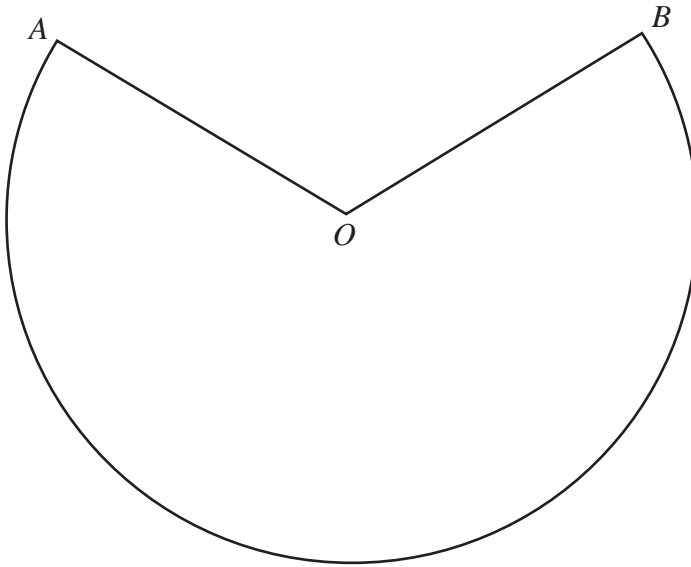
(i) the radius of the base of the cone,

Answer(a)(i) ..... cm [3]

(ii) the volume of the cone.

Answer(a)(ii) .....  $\text{cm}^3$  [2]

- (b) The cone is cut along the sloping edge  $OP$  and opened out to make a sector of a circle.



NOT TO  
SCALE

- (i) Calculate the area of the sector and show that it rounds to  $317 \text{ cm}^2$ , correct to 3 significant figures.

[2]

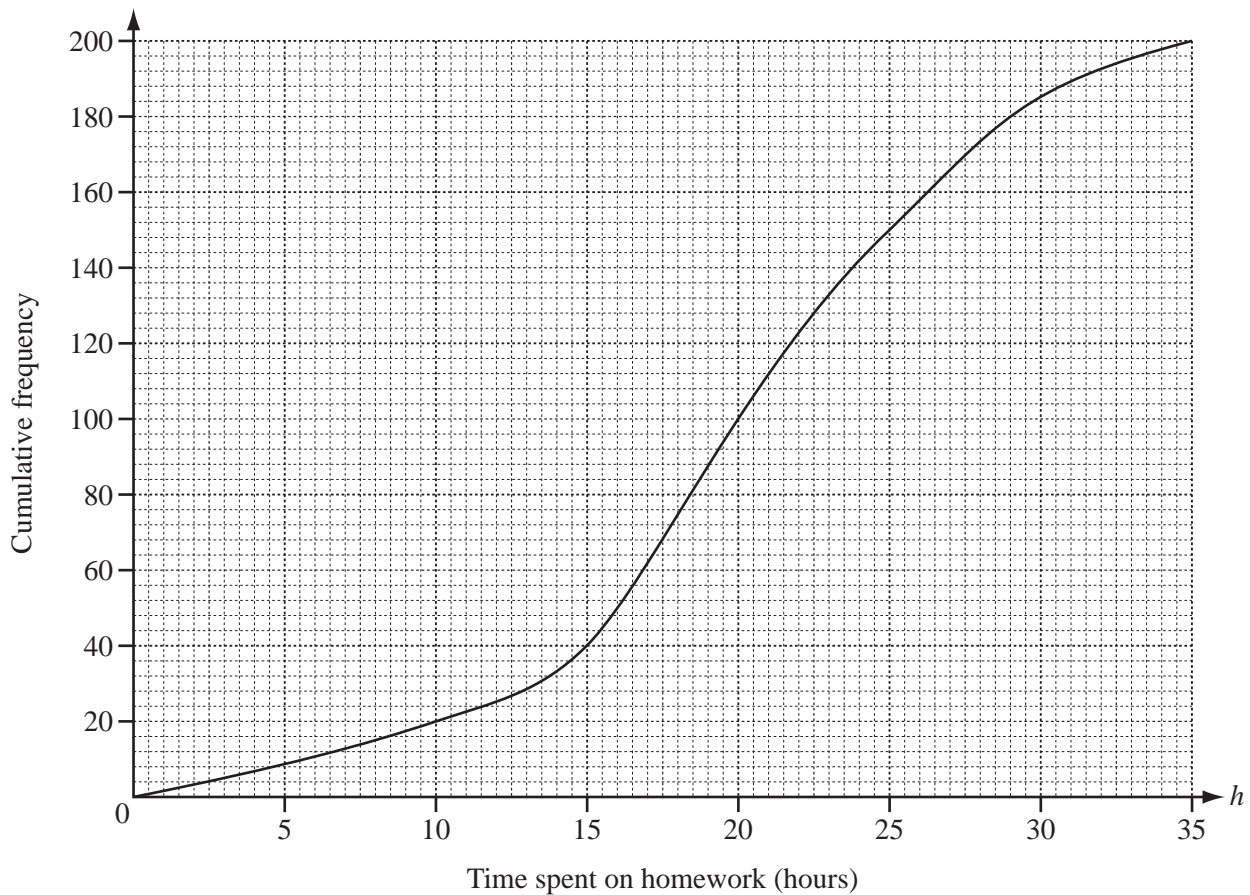
- (ii) Calculate the reflex angle  $AOB$ .

Answer(b)(ii) ..... [3]

For  
Examiner's  
Use

- 5 200 students each record the number of hours,  $h$ , they spend on homework in one week. The cumulative frequency curve shows the results.

For  
Examiner's  
Use



(a) Find

(i) the median,

Answer(a)(i) ..... h [1]

(ii) the lower quartile,

Answer(a)(ii) ..... h [1]

(iii) the inter-quartile range,

Answer(a)(iii) ..... h [1]

(iv) the 90th percentile,

Answer(a)(iv) ..... h [1]

(v) the number of students who spend more than 10 hours on homework.

Answer(a)(v) ..... [2]



- (b) (i) Use the cumulative frequency curve to complete the frequency table.

Time spent on homework $h$ hours	$0 < h \leq 10$	$10 < h \leq 15$	$15 < h \leq 20$	$20 < h \leq 25$	$25 < h \leq 35$
Frequency	20	20		50	

[2]

- (ii) Calculate an estimate of the mean number of hours spent on homework.

Answer(b)(ii) ..... h [2]

- (iii) The data is used to draw a histogram.

Complete the frequency density table.

(Do not draw the histogram.)

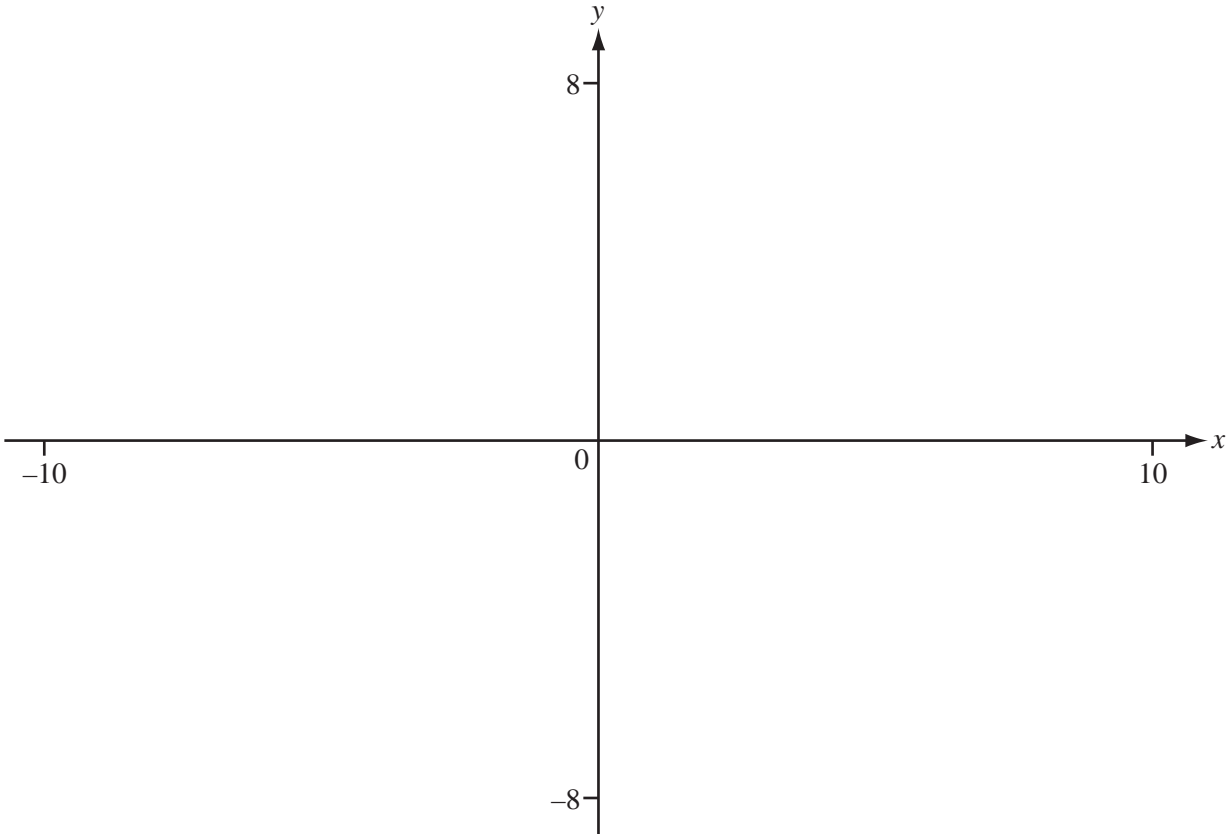
Time spent on homework $h$ hours	$0 < h \leq 15$	$15 < h \leq 20$	$20 < h \leq 25$	$25 < h \leq 35$
Frequency density			10	

[3]

For  
Examiner's  
Use

6

For  
Examiner's  
Use



$$f(x) = \frac{(2x - 3)}{(x + 2)}$$

(a) On the diagram, sketch the graph of  $y = f(x)$ . [3]

(b) Write down the value of  $f(0)$ .

Answer(b) ..... [1]

(c) Solve the equation  $f(x) = 0$ .

Answer(c) ..... [1]

(d) Write down the equations of the asymptotes.

Answer(d) .....  
..... [2]

(e) Find the range of  $f(x)$  for the domain  $0 \leq x \leq 8$ .

Answer(e) ..... [2]

(f)  $g(x) = 3 - x$

(i) On the diagram, sketch the graph of  $y = g(x)$ . [1]

(ii) Solve the equation  $f(x) = g(x)$ .

*Answer(f)(ii)*  $x = \dots\dots\dots$  or  $x = \dots\dots\dots$  [2]

(iii) Show that the equation  $f(x) = g(x)$  can be re-arranged into  $x^2 + x - 9 = 0$ .

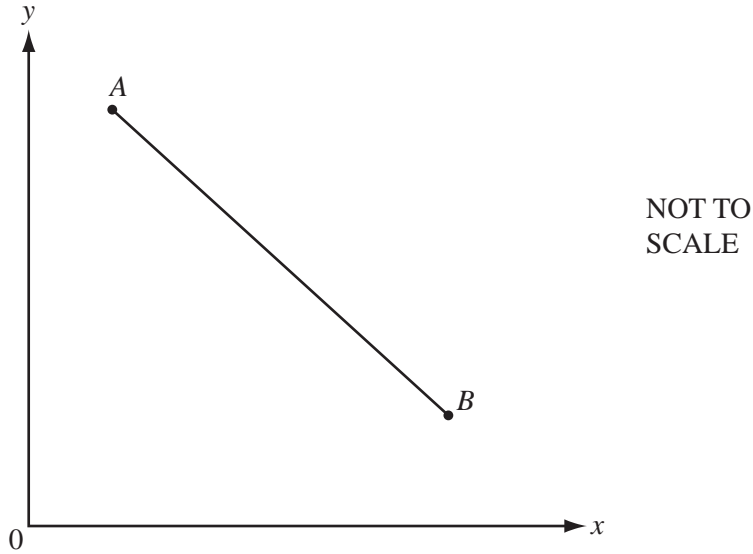
[3]

(iv) The exact solutions of the equation  $x^2 + x - 9 = 0$  are  $\frac{-1 \pm \sqrt{k}}{2}$ .

Find the value of  $k$ .

*Answer(f)(iv)*  $k = \dots\dots\dots$  [2]

For  
Examiner's  
Use



$A(1, 6)$  is joined to  $B(5, 2)$  by the line  $AB$ .

(a) Calculate the length of the line  $AB$ .

Answer(a) ..... [3]

(b) Find the equation of the straight line that passes through  $A$  and  $B$ .

Answer(b) ..... [3]

(c) (i) Find the equation of the line which is perpendicular to  $AB$  and passes through the origin.

Answer(c)(i) ..... [2]

(ii) Find the co-ordinates of the point of intersection of the line in part (c)(i) and the line  $AB$ .

Answer(c)(ii) ( ..... , ..... ) [1]

8 Find the  $n$ th term of each of the following sequences.

(a) 21, 17, 13, 9, 5, .....

Answer(a) ..... [2]

(b) 3, 6, 12, 24, 48, .....

Answer(b) ..... [2]

(c)  $\frac{1}{4}$ ,  $\frac{4}{5}$ ,  $\frac{9}{6}$ ,  $\frac{16}{7}$ ,  $\frac{25}{8}$ , .....

Answer(c) ..... [2]

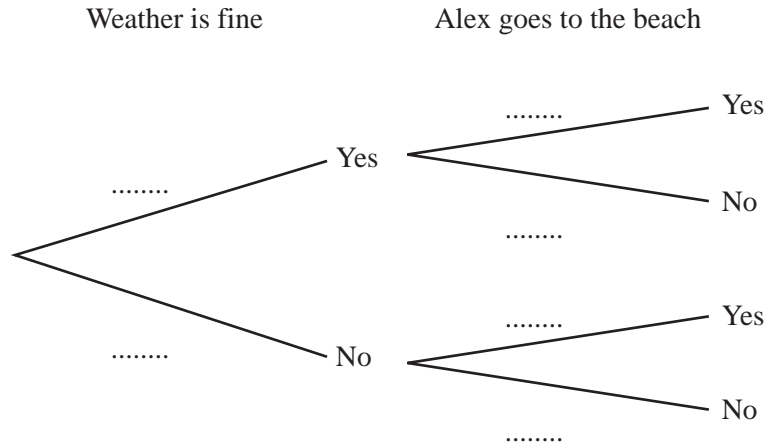
(d) 0, 6, 24, 60, 120, .....

Answer(d) ..... [4]

For  
Examiner's  
Use

- 9 If the weather is fine, the probability that Alex goes to the beach is  $\frac{9}{10}$ .  
 If the weather is not fine, the probability that Alex goes to the beach is  $\frac{3}{10}$ .  
 The probability that the weather will be fine is  $\frac{5}{6}$ .

(a) Complete the tree diagram.



[3]

(b) Find the probability that Alex goes to the beach.

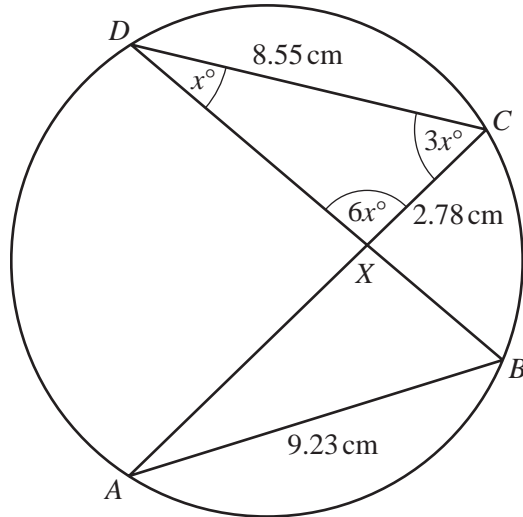
Answer(b) ..... [3]

(c) Which combination of these events has a probability of  $\frac{1}{12}$ ?

Answer(c) ..... [1]

10

For  
Examiner's  
Use



NOT TO  
SCALE

$A, B, C$  and  $D$  lie on the circumference of a circle.  
 $AC$  and  $BD$  intersect at  $X$ .

- (a) Angle  $CDX = x^\circ$ , angle  $DCX = 3x^\circ$  and angle  $CXD = 6x^\circ$ .

Show that angle  $ABX = 54^\circ$ .

[3]

- (b) (i) Complete the statement

Triangles  $CDX$  and  $BAX$  are .....

[1]

- (ii)  $AB = 9.23$  cm,  $DC = 8.55$  cm and  $XC = 2.78$  cm.

Calculate the length of  $BX$ .

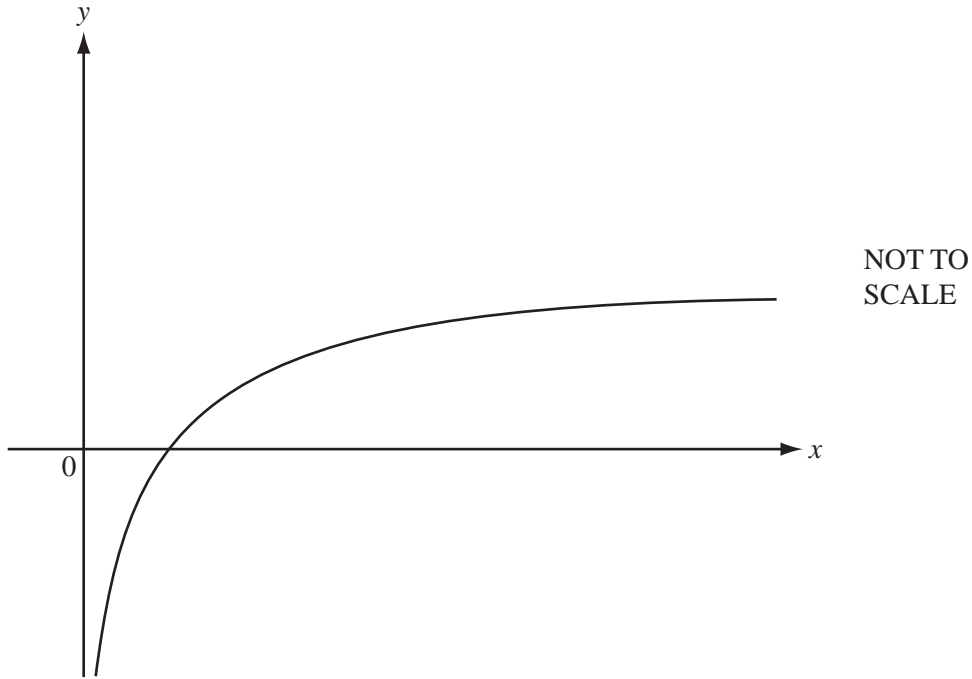
Answer(b)(ii) ..... cm [2]

- (iii) Find the value of  $\frac{\text{Area of triangle } CDX}{\text{Area of triangle } BAX}$ .

Give your answer correct to 2 decimal places.

Answer(b)(iii) ..... [2]

11 (a)



For  
Examiner's  
Use

The sketch shows the graph of  $y = \log_a x$ .

On the same diagram, sketch the graph of  $y = 2\log_a x$ . [2]

(b)  $3\log x = \log 16 - 2\log x$

Find the value of  $x$ .

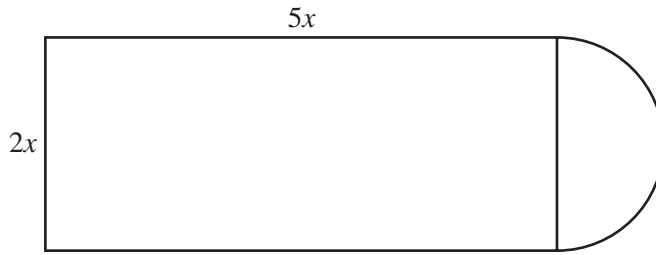
Answer(b)  $x = \dots\dots\dots$  [3]

(c) Solve the equation  $5^y = 100$ .  
Give your answer correct to 4 significant figures.

Answer(c)  $y = \dots\dots\dots$  [3]



12

NOT TO  
SCALEFor  
Examiner's  
Use

The diagram shows a rectangle with length  $5x$  and width  $2x$ .  
One of the shorter sides is joined to a semicircle with radius  $x$ .

- (a) Find a formula, in terms of  $x$  and  $\pi$ , for the total area,  $A$ , of the shape.

Answer(a)  $A = \dots\dots\dots$  [2]

- (b) Make  $x$  the subject of your formula in **part (a)**.

Answer(b)  $x = \dots\dots\dots$  [3]

- (c) Find the value of  $x$  when  $A = 200$ .

Answer(c)  $x = \dots\dots\dots$  [1]

13 (a) (i) Factorise.

$$2x^2 - x - 1$$

For  
Examiner's  
Use

Answer(a)(i) ..... [2]

(ii) Write as a single fraction in its simplest form.

$$\frac{1}{2x^2 - x - 1} + \frac{4}{x - 1}$$

Answer(a)(ii) ..... [3]

(b) Simplify.

$$\frac{p^2 - 25q^2}{p + 5q - pt - 5qt}$$

Answer(b) ..... [4]

**BLANK PAGE**

**BLANK PAGE**

---

Permission to reproduce items where third-party owned material protected by copyright is included has been sought and cleared where possible. Every reasonable effort has been made by the publisher (UCLES) to trace copyright holders, but if any items requiring clearance have unwittingly been included, the publisher will be pleased to make amends at the earliest possible opportunity.

University of Cambridge International Examinations is part of the Cambridge Assessment Group. Cambridge Assessment is the brand name of University of Cambridge Local Examinations Syndicate (UCLES), which is itself a department of the University of Cambridge.