



# Cambridge IGCSE<sup>®</sup>

CANDIDATE  
NAME

--

CENTRE  
NUMBER

--	--	--	--	--

CANDIDATE  
NUMBER

--	--	--	--



**ADDITIONAL MATHEMATICS**

**0606/01**

Paper 1

**For examination from 2020**

SPECIMEN PAPER

**2 hours**

You must answer on the question paper.

No additional materials are needed.

## INSTRUCTIONS

- Answer **all** questions.
- Use a black or dark blue pen. You may use an HB pencil for any diagrams or graphs.
- Write your name, centre number and candidate number in the boxes at the top of the page.
- Write your answer to each question in the space provided.
- Do **not** use an erasable pen or correction fluid.
- Do **not** write on any bar codes.
- You should use a calculator where appropriate.
- You must show all necessary working clearly; no marks will be given for unsupported answers from a calculator.
- Give non-exact numerical answers correct to 3 significant figures, or 1 decimal place for angles in degrees, unless a different level of accuracy is specified in the question.

## INFORMATION

- The total mark for this paper is 80.
- The number of marks for each question or part question is shown in brackets [ ].

This document has **16** pages. Blank pages are indicated.

**Mathematical Formulae****1. ALGEBRA***Quadratic Equation*

For the equation  $ax^2 + bx + c = 0$ ,

$$x = \frac{-b \pm \sqrt{b^2 - 4ac}}{2a}$$

*Binomial Theorem*

$$(a + b)^n = a^n + \binom{n}{1}a^{n-1}b + \binom{n}{2}a^{n-2}b^2 + \dots + \binom{n}{r}a^{n-r}b^r + \dots + b^n,$$

where  $n$  is a positive integer and  $\binom{n}{r} = \frac{n!}{(n-r)!r!}$

*Arithmetic series*

$$u_n = a + (n-1)d$$

$$S_n = \frac{1}{2}n(a+l) = \frac{1}{2}n\{2a + (n-1)d\}$$

*Geometric series*

$$u_n = ar^{n-1}$$

$$S_n = \frac{a(1-r^n)}{1-r} \quad (r \neq 1)$$

$$S_\infty = \frac{a}{1-r} \quad (|r| < 1)$$

**2. TRIGONOMETRY***Identities*

$$\sin^2 A + \cos^2 A = 1$$

$$\sec^2 A = 1 + \tan^2 A$$

$$\operatorname{cosec}^2 A = 1 + \cot^2 A$$

*Formulae for  $\triangle ABC$* 

$$\frac{a}{\sin A} = \frac{b}{\sin B} = \frac{c}{\sin C}$$

$$a^2 = b^2 + c^2 - 2bc \cos A$$

$$\Delta = \frac{1}{2} bc \sin A$$

**1 DO NOT USE A CALCULATOR IN THIS QUESTION.**

The polynomial  $p(x) = 2x^3 - 3x^2 + qx + 56$  has a factor  $x - 2$ .

(a) Show that  $q = -30$ . [1]

(b) Factorise  $p(x)$  completely and hence state all the solutions of  $p(x) = 0$ . [4]

**2** Variables  $x$  and  $y$  are related by the equation  $y = x\sqrt{x}$ .

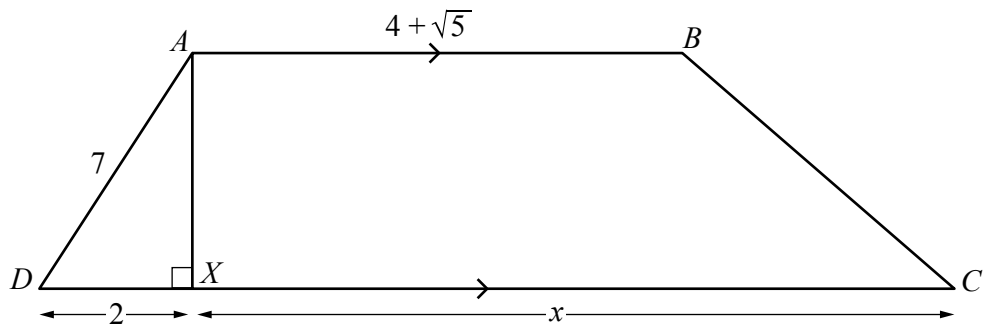
(a) Find  $\frac{dy}{dx}$ . [2]

(b) Hence find the approximate change in  $x$  when  $y$  increases from 8 by the small amount 0.015. [3]

3 (a) Express  $12x^2 - 6x + 5$  in the form  $p(x - q)^2 + r$ , where  $p$ ,  $q$  and  $r$  are constants to be found. [3]

(b) Hence find the greatest value of  $(12x^2 - 6x + 5)^{-1}$  and state the value of  $x$  at which this occurs. [2]

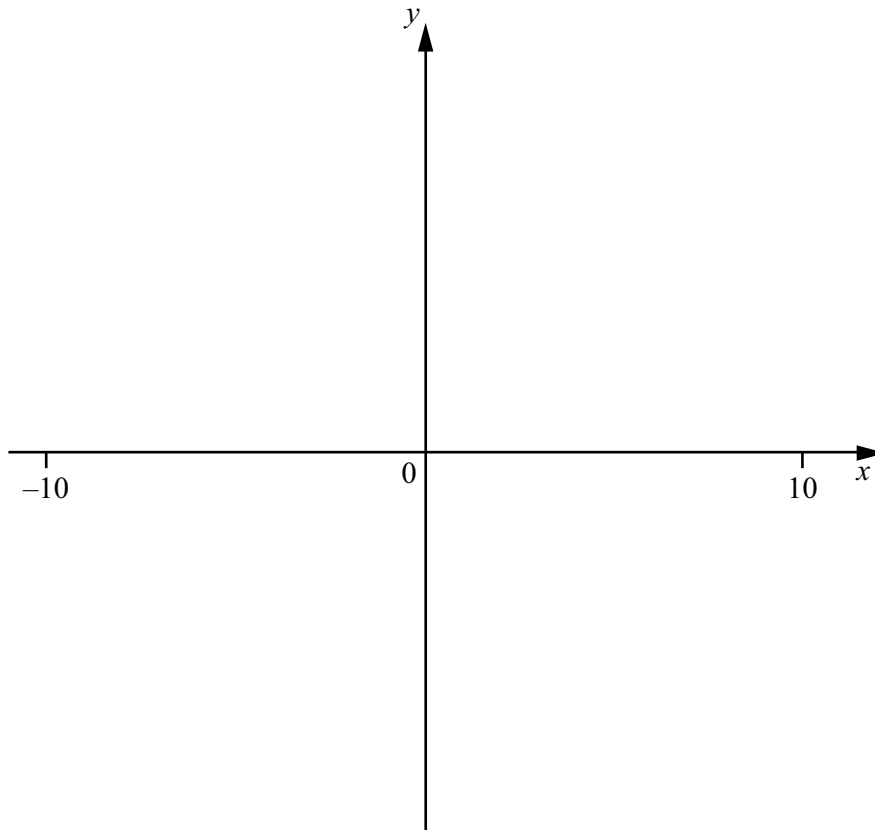
## 4 DO NOT USE A CALCULATOR IN THIS QUESTION.



The diagram shows a trapezium  $ABCD$  in which  $AD = 7$  cm and  $AB = (4 + \sqrt{5})$  cm.  $AX$  is perpendicular to  $DC$  with  $DX = 2$  cm and  $XC = x$  cm.

Given that the area of trapezium  $ABCD$  is  $15(\sqrt{5} + 2)$  cm<sup>2</sup>, obtain an expression for  $x$  in the form  $a + b\sqrt{5}$ , where  $a$  and  $b$  are integers. [6]

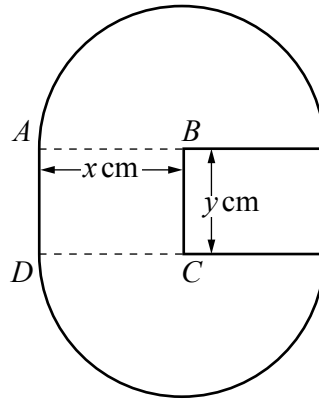
- 5 (a) On the axes below, sketch the graph of  $y = |2x + 5|$  and the graph of  $y = |2 - x|$ , stating the coordinates of the points where each graph meets the coordinate axes. [4]



(b) Solve  $|2x + 5| \leq |2 - x|$ .

[3]

- 6 Find the equation of the normal to the curve  $y = \frac{2x-1}{\sqrt{x^2+5}}$  at the point where  $x = 2$ .  
Give your answer in the form  $ax + by = c$ , where  $a$ ,  $b$  and  $c$  are integers. [8]



The diagram shows a badge, made of thin sheet metal, consisting of two semi-circular pieces, centres  $B$  and  $C$ , each of radius  $x$  cm. They are attached to each other by a rectangular piece of thin sheet metal,  $ABCD$ , such that  $AB$  and  $CD$  are the radii of the semicircular pieces and  $AD = BC = y$  cm.

- (a) Given that the area of the badge is  $20 \text{ cm}^2$ , show that the perimeter,  $P$  cm, of the badge is given by

$$P = 2x + \frac{40}{x}. \quad [4]$$



(b) Given that  $x$  can vary, find the minimum value of  $P$ , justifying that this value is a minimum. [5]

8 (a) Giving your answer in its simplest form, find the exact value of

(i)  $\int_{0.2}^1 e^{5x-1} dx,$  [4]

(ii)  $\int_1^2 \left(x + \frac{1}{x^2}\right)^2 dx.$  [5]

(b) Find  $\int \sin \frac{x}{6} dx.$  [2]

**9 DO NOT USE A CALCULATOR IN THIS QUESTION.**

In the expansion of  $(1 + 2x)^n$ , the coefficient of  $x^4$  is ten times the coefficient of  $x^2$ .

Find the value of the positive integer  $n$ .

[6]

10 (a) An arithmetic progression has a first term of 5 and a common difference of  $-3$ .

Find the number of terms such that the sum to  $n$  terms is first less than  $-200$ . [4]

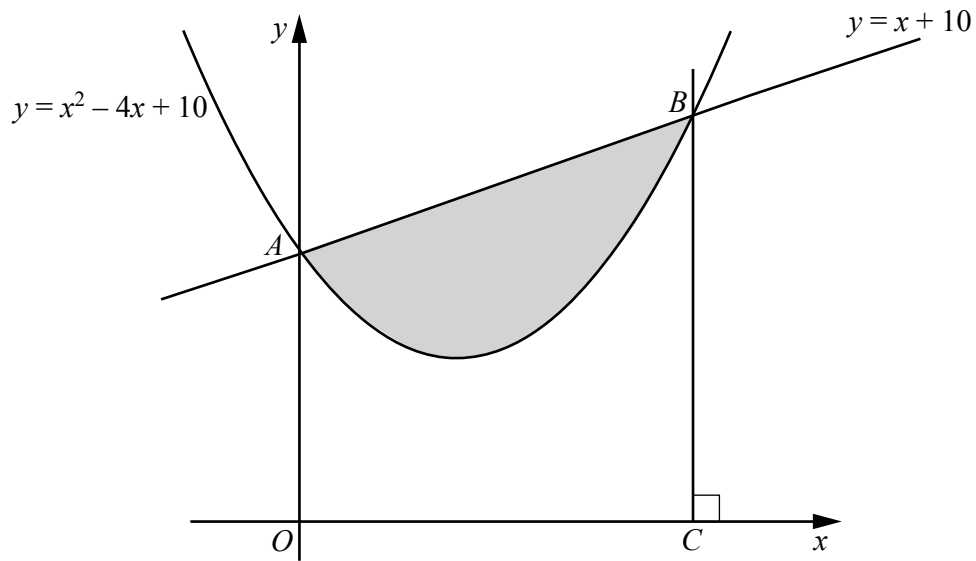
(b) A geometric progression is such that its 3rd term is equal to  $\frac{81}{64}$  and its 5th term is equal to  $\frac{729}{1024}$ .

(i) Find the first term of this progression and the positive common ratio of this progression. [5]

(ii) Hence find the sum to infinity of this progression.

[1]

11



The graph of  $y = x^2 - 4x + 10$  cuts the  $y$ -axis at point  $A$ . The graphs of  $y = x^2 - 4x + 10$  and  $y = x + 10$  intersect one another at the points  $A$  and  $B$ . The line  $BC$  is perpendicular to the  $x$ -axis. Calculate the area of the shaded region enclosed by the curve and the line  $AB$ . [8]

Continuation of working space for **question 11**.

---

Permission to reproduce items where third-party owned material protected by copyright is included has been sought and cleared where possible. Every reasonable effort has been made by the publisher (UCLES) to trace copyright holders, but if any items requiring clearance have unwittingly been included, the publisher will be pleased to make amends at the earliest possible opportunity.

Cambridge Assessment International Education is part of the Cambridge Assessment Group. Cambridge Assessment is the brand name of University of Cambridge Local Examinations Syndicate (UCLES), which itself is a department of the University of Cambridge.