

Centre Number	Candidate Number	Name
---------------	------------------	------

CAMBRIDGE INTERNATIONAL EXAMINATIONS
International General Certificate of Secondary Education

COMBINED SCIENCE

0653/03

Paper 3

May/June 2003

1 hour 15 minutes

Candidates answer on the Question Paper.
No Additional Materials are required.

READ THESE INSTRUCTIONS FIRST

Write your Centre number, candidate number and name on all the work you hand in.
Write in dark blue or black pen in the spaces provided on the Question Paper.
You may use a soft pencil for any diagrams, graphs, tables or rough working.
Do not use staples, paper clips, highlighters, glue or correction fluid.

Answer **all** questions.

At the end of the examination, fasten all your work securely together.

The number of marks is given in brackets [] at the end of each question or part question.

A copy of the Periodic Table is printed on page 20.

For Examiner's Use	
1	
2	
3	
4	
5	
6	
7	
8	
9	
Total	

If you have been given a label, look at the details. If any details are incorrect or missing, please fill in your correct details in the space given at the top of this page.

Stick your personal label here, if provided.

This document consists of **18** printed pages and **2** blank pages.

- 1 (a) Sodium chloride is an ionic compound.

Fig. 1.1 shows how the electrons are arranged in a sodium ion and a chloride ion.

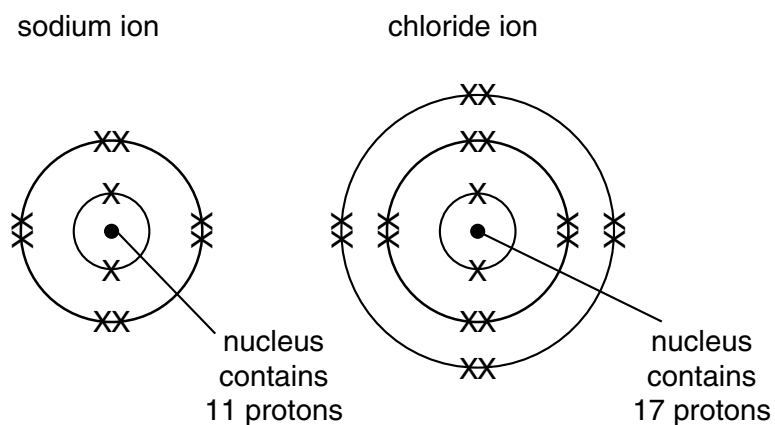


Fig. 1.1

- (i) Use the information in Fig. 1.1 to explain why a sodium ion has an electrical charge of +1.

.....

 [2]

- (ii) Explain why there is no significant difference in mass between a chloride ion and a chlorine atom.

.....

 [2]

(b) Large amounts of sodium chloride solution are electrolysed in the chemical industry. Chlorine is one of the important products from this process.

(i) Explain why chloride ions move towards the anode during electrolysis.

.....
.....
..... [2]

(ii) Describe briefly how chloride ions are changed into chlorine atoms at the anode.

.....
..... [1]

(c) Name the **two** other products that are made in addition to chlorine in the electrolysis of sodium chloride solution.

.....
..... [2]

- 2 (a) Liquids expand on heating, but the change in volume is not large for a temperature change of 50°C .

Describe an experiment to show how a liquid such as water expands when it is heated by 50°C .

Your description must include

- the apparatus you would use
- an explanation as to how you would know that the liquid had expanded.

.....

.....

.....

..... [3]

- (b) When heated by 50°C , will a sample of a liquid expand more or less than the same volume of

a solid, a gas? [1]

- (c) When light from an object passes from water into air, it is refracted as shown in Fig. 2.1.

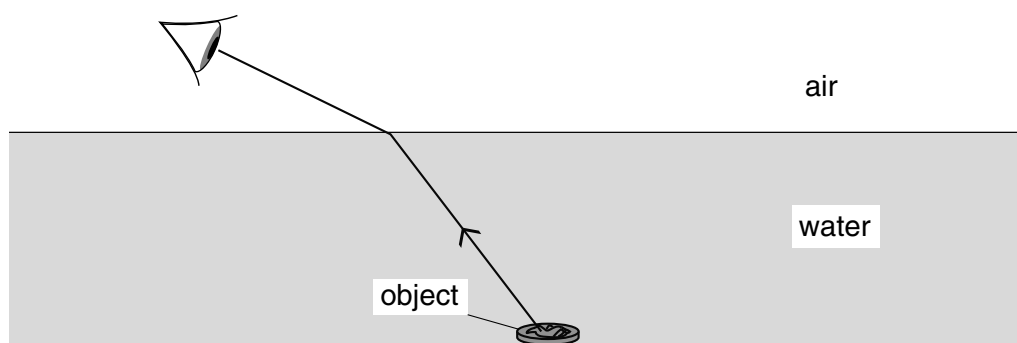


Fig. 2.1

- (i) On Fig. 2.1, draw a normal to the surface where the ray emerges and label the angle of refraction. [2]
- (ii) By drawing a suitable line on Fig. 2.1, show where the object appears to be to the observer. [1]

3 (a) Explain what is meant by the term *enzyme*.

.....

.....

.....

..... [2]

(b) Lactose is a sugar which is present in milk. It is broken down to glucose and galactose by the enzyme lactase.

A student carried out an investigation into the effect of temperature on the rate of activity of lactase. He put 5 cm³ of milk into each of three test-tubes, **A**, **B** and **C**. He kept each test-tube at a different temperature, as shown in Fig. 3.1, for 10 minutes. Then he added 5 cm³ of lactase solution to each tube.

After the lactase was added, he tested each tube for glucose every thirty seconds, using paper test strips which change colour when in contact with glucose solution. He recorded the time at which glucose was first detected. One of his results is shown in Fig. 3.1.

tube	temperature / °C	time at which glucose was first detected / s
A	5	300
B	30	
C	90	

Fig. 3.1

(i) Suggest why the Benedict's test for glucose is not suitable to use in this investigation.

.....

..... [1]

(ii) Complete the table by suggesting times for glucose to be first detected in tubes **B** and **C**. (You are not expected to know exact times.) [2]

(iii) Explain your suggested result for tube **C**.


.....

..... [1]

- 4 (a) (i) Describe **one** observation that is made when hydrochloric acid reacts with calcium carbonate.

.....
 [1]

- (ii) Complete the word equation for the reaction.



[2]

Fig. 4.1 shows the apparatus that a student used to study the rate of reaction between dilute hydrochloric acid and calcium carbonate. The student studied the rate of reaction at three different temperatures.

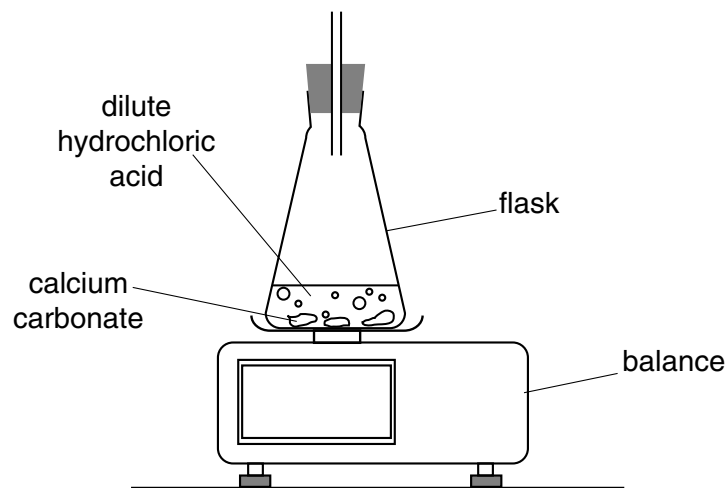


Fig. 4.1

- (b) The table and graph in Fig. 4.2 show some data for the three experiments carried out by the student.

experiment	initial mass of calcium carbonate / g	temperature of hydrochloric acid / °C
A	10.0	15
B	10.0	25
C	10.0	35

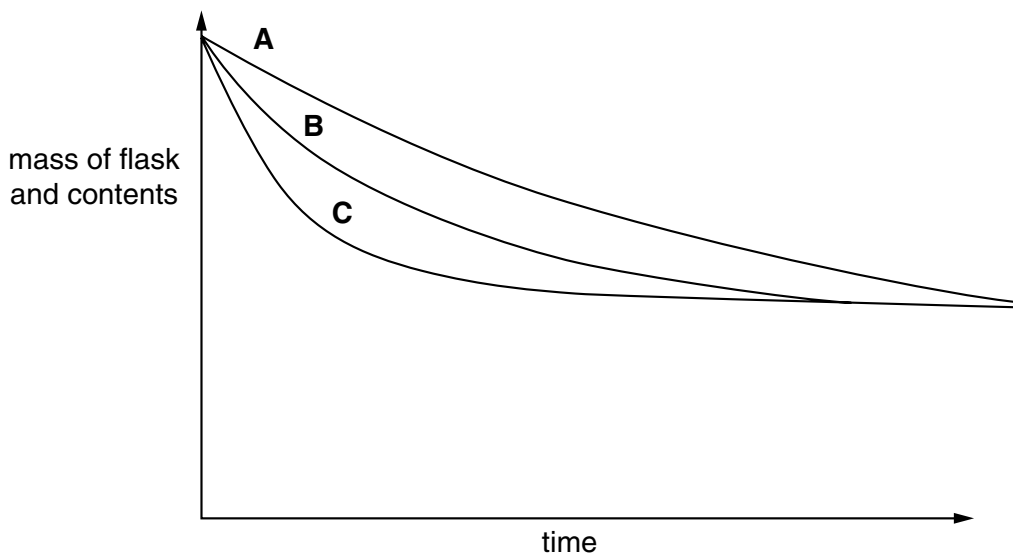


Fig. 4.2

(i) Explain why the balance reading decreases during the reaction.

.....

.....

..... [2]

(ii) The student used 10.0 g of calcium carbonate in each experiment.

State two other conditions that should be kept the same for each experiment.

1.
-
2.
- [2]

(iii) Describe and explain, in terms of the collisions between particles, the difference in rate between reactions **A** and **C**.

.....

.....

.....

.....

..... [2]

5 A skydiver jumps from an aircraft.

- (a) (i) On Fig. 5.1, draw arrows to show the **two** main forces acting on her. Label the arrows with the names of the forces.



Fig. 5.1

[2]

- (ii) Which of the forces you have labelled will be the larger just after she jumps?
Explain your answer.

.....
..... [1]

- (b) (i) On Fig. 5.2, draw arrows to show the **two** main forces acting on her when the parachute has opened. Label the arrows with the names of the forces.




Fig. 5.2

[1]

(ii) How do the forces in Fig. 5.2 compare with the forces in Fig. 5.1?

Explain your answer.

.....

.....

.....

..... [2]

(c) The speed-time graph in Fig. 5.3 shows her descent.

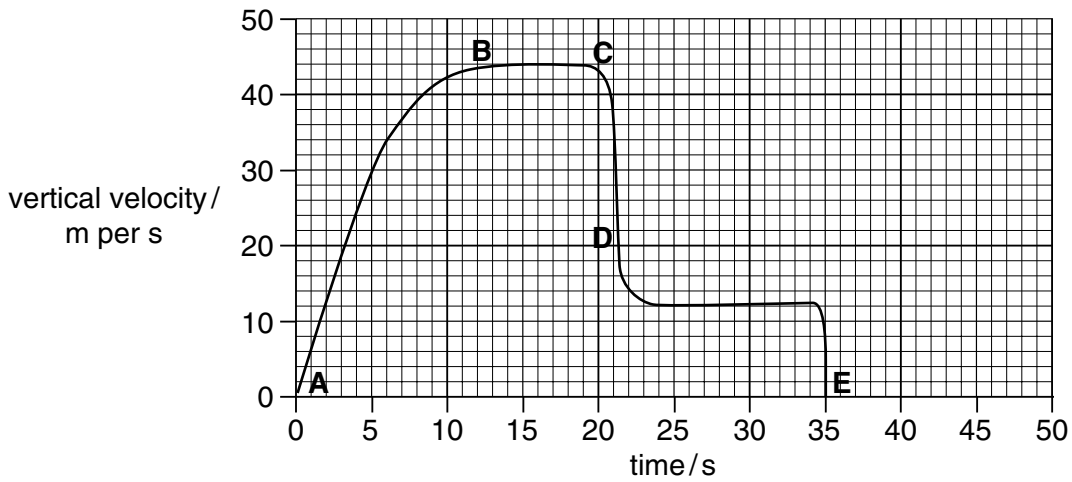


Fig. 5.3

(i) Which section of the graph shows the skydiver travelling with an acceleration which is not uniform?

Explain your answer.

.....

..... [2]

(ii) At which point does she open her parachute?

Explain your answer.

.....

..... [2]

(iii) How long after opening her parachute does she reach the ground?

Explain your answer.

.....

..... [2]

6 Fig. 6.1 is a diagram of a transverse section through a leaf.

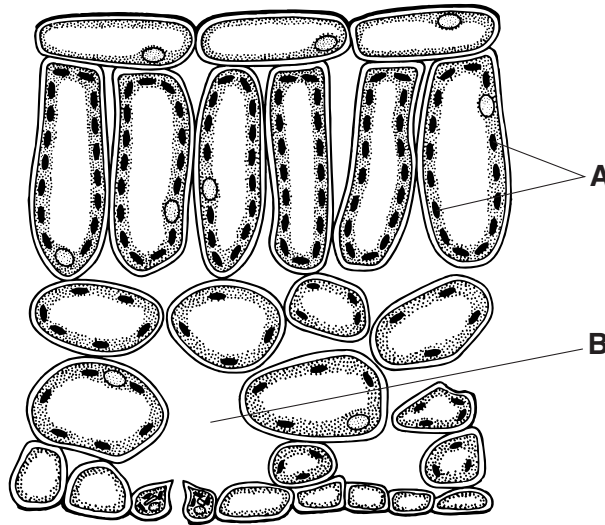


Fig. 6.1

(a) Explain how parts **A** and **B** help photosynthesis to take place in the leaf.

A

.....

.....

B

.....

..... [4]

(b) When photosynthesis takes place in a leaf, glucose is produced. The plant converts some of the glucose to other substances.

(i) Name **one** carbohydrate, other than starch, which the plant makes from glucose and which is used to make cell walls.

..... [1]

(ii) Carbohydrates contain carbon, hydrogen and oxygen. Name **one** other element which is contained in a chlorophyll molecule.

..... [1]

(iii) Describe how a plant obtains the element you have named in (ii).

.....

.....

..... [2]

- (c) Deer often eat the bark from young trees. Fig. 6.2 shows a tree where a whole ring of bark has been removed by deer.




Fig. 6.2

Explain why this tree is likely to die.

.....

.....

..... [2]

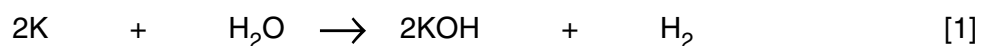
7 Potassium reacts vigorously with water.

- (a) (i) Predict and explain how the temperature of the mixture changes during the reaction.

.....
.....
..... [2]

- (ii) A symbolic equation for the reaction is shown below. This equation is not balanced.

Balance the equation.



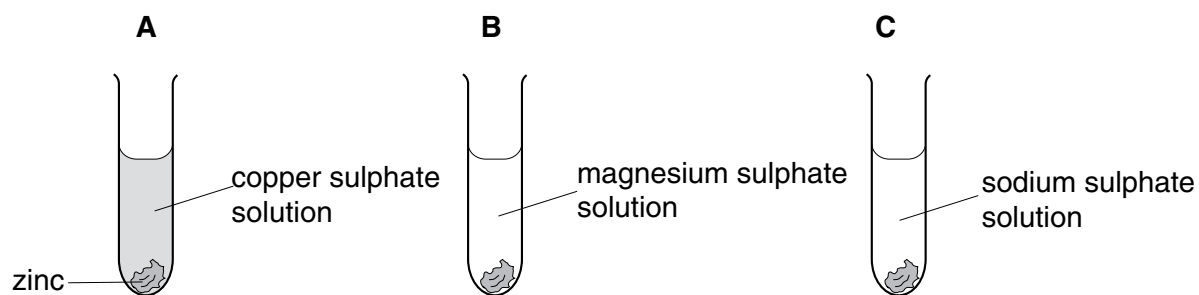
- (iii) Write the formula and charge of an ion whose concentration increases during the reaction.

..... [2]

- (iv) Draw a dot and cross diagram to show how the outer electrons are arranged in a water molecule.

[2]

(b) A student added pieces of zinc to three test-tubes, **A**, **B** and **C**.



She observed a reaction in tube **A**, but not in tubes **B** and **C**.

Explain the results in these experiments.

.....

.....

..... [2]

8 Ordinary light bulbs contain a small tungsten filament which glows when an electric current passes through it. They give off more energy as heat than they give off as light.

(a) These bulbs are not efficient. Explain what this means.

.....
 [1]

(b) How much energy does a 100 W light bulb use per second?

..... [1]

(c) Two light bulbs have a resistance of $3\text{ k}\Omega$ each and are connected in series in the circuit shown in Fig. 8.1.

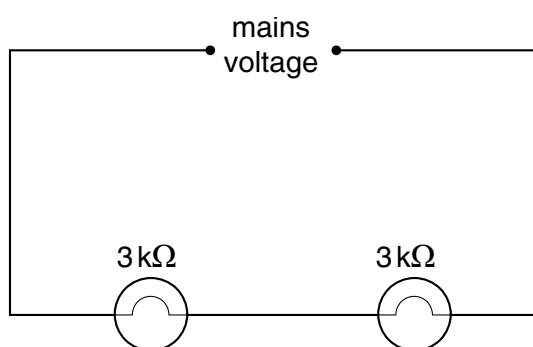


Fig. 8.1

(i) State the combined resistance of these light bulbs.

..... [1]

(ii) If the mains voltage is 240 V, state the voltage across **one** of the light bulbs.

..... [1]

- (d) The light bulbs are now connected in parallel as shown in Fig. 8.2.

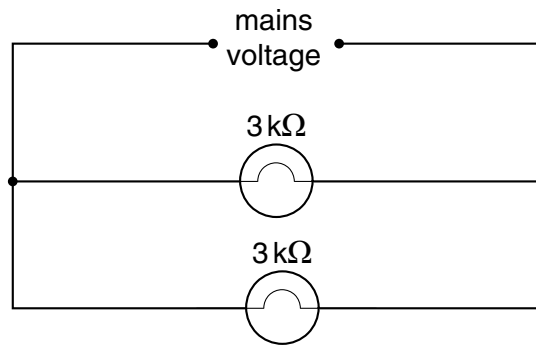


Fig. 8.2

- (i) Calculate the combined resistance of the light bulbs now. Show your working.

..... [2]

- (ii) If the mains voltage is 240 V, state the voltage across **one** of the light bulbs.

..... [1]

9 When the heart muscle contracts, it pushes blood into the arteries at a high pressure. As the blood flows around the circulatory system, the pressure gradually drops.

(a) Using the information above, and your own knowledge of the circulatory system, explain why

(i) you can feel a pulse in an artery but not in a vein,

.....
.....
..... [2]

(ii) arteries have thicker and more elastic walls than veins.

.....
.....
..... [2]

(b) White blood cells can destroy pathogens, such as bacteria or viruses. Some white cells do this by ingesting and digesting the pathogens. Other white cells produce antibodies, which kill the pathogens.

Chicken pox is a disease caused by a virus. Fig. 9.1 shows the level of antibodies to the chicken pox virus in the blood of a girl before, during and after the time when she suffered from chicken pox.

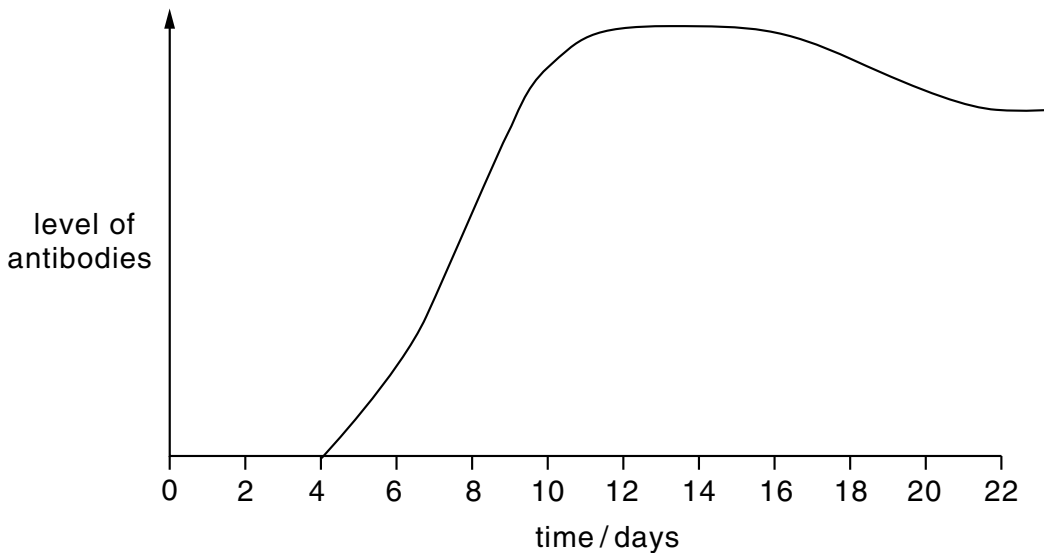


Fig. 9.1

(i) Name the type of white blood cell which produces antibodies.

..... [1]

(ii) On Fig. 9.1, draw an arrow at a point on the graph when the virus could have first entered the girl's body. [1]

(iii) Using the information in Fig. 9.1, explain why it is unlikely that the girl will suffer from chicken pox again.

.....
.....
..... [2]

(iv) Explain why having chicken pox does not affect the girl's chances of suffering from other diseases caused by viruses, such as influenza.

.....
.....
..... [1]

(v) A man was given a kidney transplant. He was told that he could now have a greater risk of suffering from diseases such as chicken pox or influenza.

Explain the reason for this.

.....
.....
..... [2]

BLANK PAGE

DATA SHEET
The Periodic Table of the Elements

		Group														
I	II	III	IV	V	VI	VII	0									
7 Li Lithium 3	9 Be Beryllium 4	1 H Hydrogen 1	11 B Boron 5	12 C Carbon 6	13 Al Aluminium 13	14 Si Silicon 14	15 P Phosphorus 15	16 S Sulphur 16	17 Cl Chlorine 17	18 Ar Argon 18	19 F Fluorine 9	20 Ne Neon 10				
23 Na Sodium 11	24 Mg Magnesium 12	27 Fe Iron 26	28 Ni Nickel 28	29 Cu Copper 29	30 Zn Zinc 30	31 Ga Gallium 31	32 Ge Germanium 32	33 As Arsenic 33	34 Se Selenium 34	35 Br Bromine 35	53 I Iodine 53	54 Xe Xenon 54				
39 K Potassium 19	40 Ca Calcium 20	41 Rb Rubidium 37	42 Mo Molybdenum 42	43 Tc Technetium 43	44 Ru Ruthenium 44	45 Rh Rhodium 45	46 Pd Palladium 46	47 Ag Silver 47	48 Cd Cadmium 48	49 In Indium 49	50 Sn Tin 50	51 Sb Antimony 51	80 Kr Krypton 36			
55 Cs Caesium 55	56 Ba Barium 56	57 Fr Francium 87	58 La Lanthanum 57	59 Ce Cerium 58	60 Pr Praseodymium 59	61 Nd Neodymium 60	62 Pm Promethium 61	63 Sm Samarium 62	64 Gd Gadolinium 64	65 Tb Terbium 65	66 Dy Dysprosium 66	67 Ho Holmium 67	68 Er Erbium 68	69 Tm Thulium 69	70 Yb Ytterbium 70	71 Lu Lutetium 71
89 La Lanthanum 89	90 Th Thorium 90	91 Pa Protactinium 91	92 U Uranium 92	93 Np Neptunium 93	94 Pu Plutonium 94	95 Am Americium 95	96 Cm Curium 96	97 Bk Berkelium 97	98 Cf Californium 98	99 Es Einsteinium 99	100 Fm Fermium 100	101 Md Mendelevium 101	102 No Nobelium 102	103 Lr Lawrencium 103	104 Rn Radon 86	105 Fr Francium 87
133 Cs Caesium 55	137 Ba Barium 56	138 Ra Radium 88	139 La Lanthanum 89	140 Ce Cerium 58	141 Pr Praseodymium 59	142 Nd Neodymium 60	143 Pm Promethium 61	144 Sm Samarium 62	145 Gd Gadolinium 64	146 Tb Terbium 65	147 Dy Dysprosium 66	148 Ho Holmium 67	149 Er Erbium 68	150 Tm Thulium 69	151 Yb Ytterbium 70	152 Lu Lutetium 71
226 Ra Radium 88	227 Ac Actinium 89	228 Th Thorium 90	229 Pa Protactinium 91	230 U Uranium 92	231 Np Neptunium 93	232 Pu Plutonium 94	233 Am Americium 95	234 Cm Curium 96	235 Bk Berkelium 97	236 Cf Californium 98	237 Es Einsteinium 99	238 Fm Fermium 100	239 Md Mendelevium 101	240 No Nobelium 102	241 Lr Lawrencium 103	242 Rn Radon 86

*58-71 Lanthanoid series
†90-103 Actinoid series

Key

a	X
b	

a = relative atomic mass
X = atomic symbol
b = proton (atomic) number

The volume of one mole of any gas is 24 dm³ at room temperature and pressure (r.t.p.).