



UNIVERSITY OF CAMBRIDGE INTERNATIONAL EXAMINATIONS
International General Certificate of Secondary Education

CANDIDATE
NAME

CENTRE
NUMBER

--	--	--	--	--

CANDIDATE
NUMBER

--	--	--	--

CO-ORDINATED SCIENCES

0654/23

Paper 2 (Core)

October/November 2011

2 hours

Candidates answer on the Question Paper.

No Additional Materials are required.



READ THESE INSTRUCTIONS FIRST

Write your Centre number, candidate number and name on all the work you hand in.

Write in dark blue or black pen.

You may use a soft pencil for any diagrams, graphs, tables or rough working.

Do not use staples, paper clips, highlighters, glue or correction fluid.

DO NOT WRITE IN ANY BARCODES.

Answer **all** questions.

A copy of the Periodic Table is printed on page 28.

At the end of the examination, fasten all your work securely together.

The number of marks is given in brackets [] at the end of each question or part question.

For Examiner's Use	
1	
2	
3	
4	
5	
6	
7	
8	
9	
Total	

This document consists of **26** printed pages and **2** blank pages.



1 (a) Fig. 1.1 shows a flowering plant, and two cells from the plant.

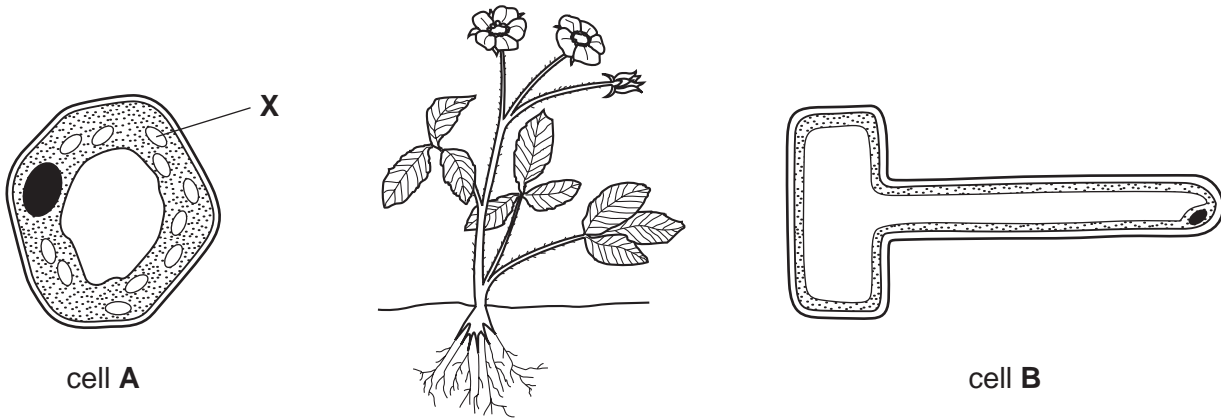


Fig. 1.1

(i) On Fig. 1.1, draw a line from each cell to a part of the plant in which it could be found. [2]

(ii) Explain why cell A contains the structures labelled X, while cell B does not.

.....
.....
.....
..... [3]

(iii) Explain how the shape of cell B adapts it for its function.

.....
.....
..... [2]

(b) The colour of the flower petals is determined by a gene with two alleles, **R** and **r**. Allele **R** is dominant and produces red flowers, and allele **r** produces white flowers.

For
Examiner's
Use

(i) Complete Table 1.1 to show the phenotype produced by each of the three possible genotypes.

Table 1.1

genotype	phenotype
RR	
Rr	
rr	

[1]

(ii) On Table 1.1, draw a circle around **one heterozygous** genotype. [1]

(iii) Predict the ratio of red to white flowers that would be produced if two plants with the genotypes **Rr** were crossed.

..... [1]

(c) A grower has a rare variety of orchid with unusual flowers. She decides to produce new plants from this orchid using tissue culture.

Suggest the advantages to the grower of using tissue culture to produce new plants, rather than sowing seeds she has collected from the orchid plant.

.....

 [2]

2 (a) Fig. 2.1 shows the forces acting on a moving car.

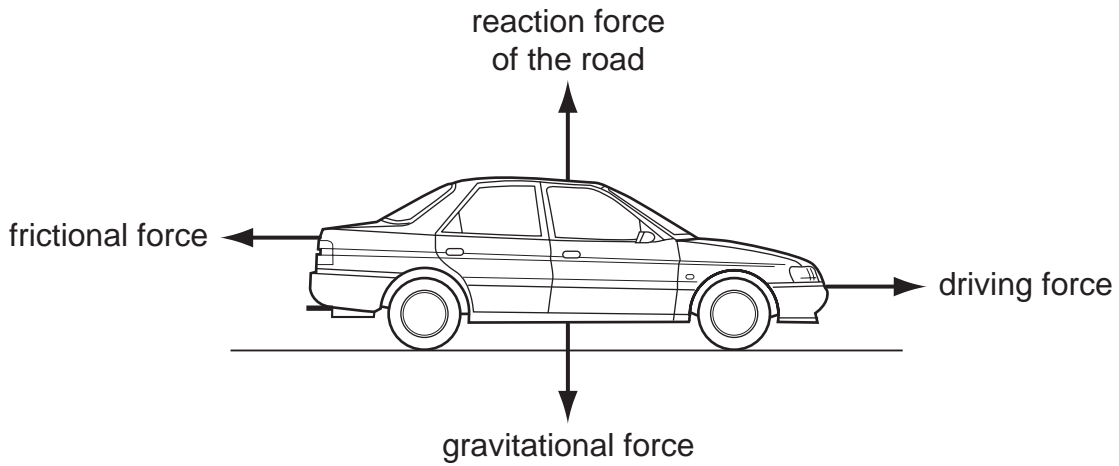


Fig. 2.1

(i) The car is accelerating.

What can be stated about the sizes of the driving force and frictional force?

.....
 [1]

(ii) The car reaches a steady speed of 20 m/s.

What can be stated about the sizes of the driving force and frictional force now?

.....
 [1]

(iii) The mass of the car is 1500 kg.

Calculate the kinetic energy of the car when it is travelling at a steady speed of 20 m/s.

State the formula that you use and show your working.

formula used

working

..... J [2]

(iv) The car travels at 20 m/s for 2 minutes.

Calculate the distance travelled.

State the formula that you use and show your working.

formula used

working

..... m [2]

(b) Fig. 2.2 shows a speed-time graph for part of the car's journey, during which the brakes are used.

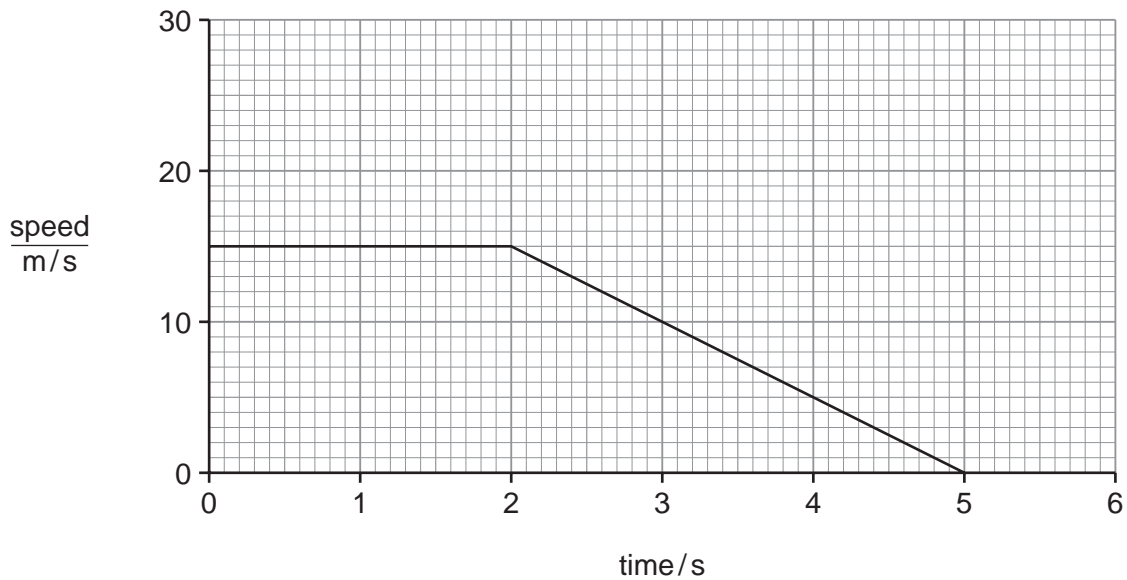


Fig. 2.2

(i) Mark with an X the point on the graph at which the brakes are applied. [1]

(ii) Calculate the deceleration of the car.

Show your working.

..... m/s² [2]

- 3 (a) Table 3.1 shows the electron arrangements of atoms of five elements, **P** to **T**. In all atoms the number of protons is the same as the number of electrons.

For
Examiner's
Use

Table 3.1

atom	1 st shell	2 nd shell	3 rd shell	4 th shell
P	2	1		
Q	2	8	1	
R	2	8	7	
S	2	8	8	1
T	2	8	8	2

- (i) Explain which element in Table 3.1 would **not** be a good conductor of electricity.

element

explanation

..... [2]

- (ii) State and explain which **one** of the elements **P**, **Q** or **S** is the most reactive.

most reactive

explanation

..... [2]

- (iii) An atom of element **P** has a nucleon (mass) number of 7.

State the number of neutrons in this atom and explain your answer.

number of neutrons

explanation

..... [2]

- (iv) Suggest **two** elements in Table 3.1 which would react together to form an ionic compound.

Explain your answer.

elements and

explanation

..... [2]

- (b) Fig. 3.1 shows a working electrochemical cell that was made by a student in a school laboratory.

For
Examiner's
Use

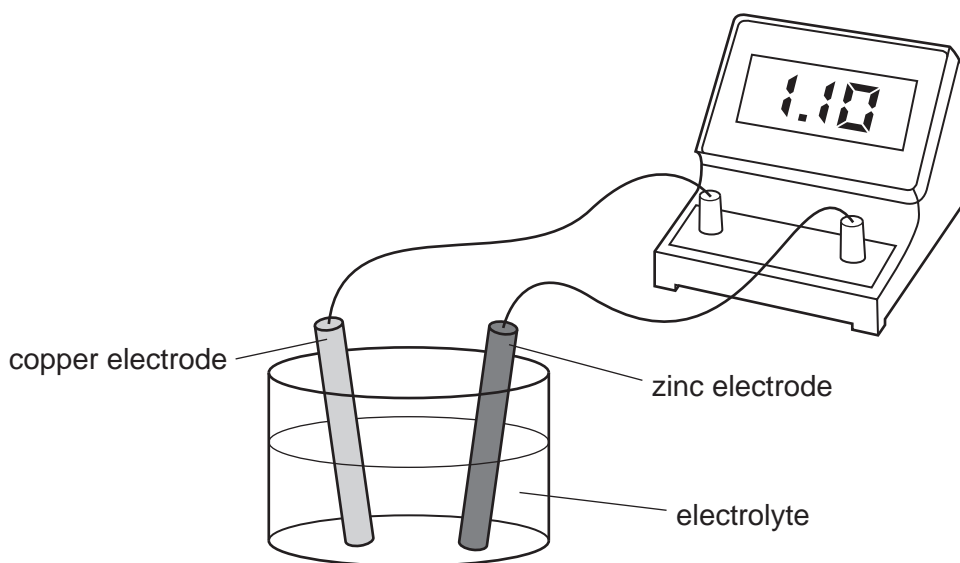


Fig. 3.1

- (i) The student used one of the liquids shown below as the electrolyte in her cell.

gasoline (a hydrocarbon)

sodium chloride solution

water

State which liquid the student used and explain briefly why the other liquids would **not** have been suitable.

liquid the student used

explanation

.....

..... [2]

- (ii) State and explain briefly what would happen to the voltmeter reading if the zinc electrode was replaced by an electrode made of copper.

.....

..... [2]

- 4 A man enters a theatre and then moves up an escalator (moving staircase) as shown in Fig. 4.1.

For
Examiner's
Use




Fig. 4.1

The man weighs 1000 N.

- (a) (i) Calculate the work done lifting the man a vertical distance of 5 m.

State the formula that you use and show your working.

formula used

working

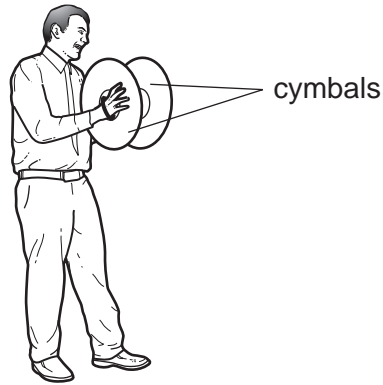
..... J [2]

- (ii) State the potential energy the man has gained when he reaches the top of the escalator.

..... J [1]

(b) In the theatre, a musician is playing the cymbals.

For
Examiner's
Use



The man in the audience thought that the sound from the cymbals was loud because of its high frequency. He was wrong.

Explain why the man was wrong.

.....
.....
..... [2]

(c) Blue light and red light are being shone on the musician.

These are two of the primary colours of light.

(i) Name the third primary colour of light. [1]

(ii) Name one of the secondary colours of light. [1]

(d) The theatre measures 50 m x 50 m x 20 m. The air inside it has a density of 1.3 kg/m^3 .

(i) Calculate the volume of the air in the theatre.

..... m^3 [1]

(ii) Show that the mass of the air in the theatre is 65 000 kg.

State the formula that you use and show your working.

formula used

working

[2]

For
Examiner's
Use

BLANK PAGE

Please turn over for Question 5.

5 PTFE is an important plastic which has many uses in the home and industry.

Wool consists of fibres which are made of protein molecules.

(a) Both PTFE and wool are made of polymer molecules.

Explain the meanings of the terms *monomer* and *polymer*.

.....
.....
.....
..... [3]

(b) The chemical formula of the monomer used to make PTFE is C_2F_4 .

(i) Explain the meaning of the formula C_2F_4 .

.....
.....
..... [2]

(ii) Explain why the monomer, C_2F_4 , is **not** an example of a hydrocarbon.

.....
..... [1]

(iii) Name the type of compound which polymerises to form the proteins that make up wool.

..... [1]

(c) PTFE is a thermoplastic material.

Describe how PTFE behaves when it is heated and then cooled.

.....
.....
..... [2]

- (d) Fig. 5.1 shows a magnified section of a wool fibre. The fibre has been washed using hard water. The fibre is covered with tiny crystals of limescale.

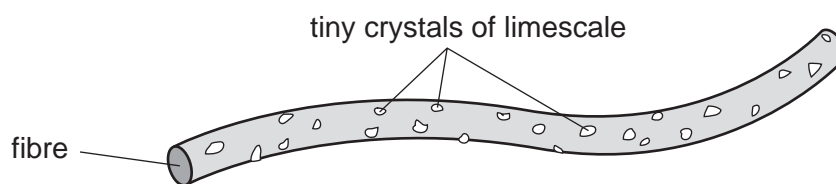


Fig. 5.1

- (i) Explain which **one** of the chemical formulae below is of a compound which causes hardness in water.



formula

explanation

..... [1]

- (ii) In many countries the water supplied to homes and industry does not contain compounds which cause hardness.

Suggest **one** advantage of a water supply which does **not** contain compounds which cause hardness.

.....

..... [1]

6 (a) Fig. 6.1 shows a section through part of a person's lungs.

For
Examiner's
Use

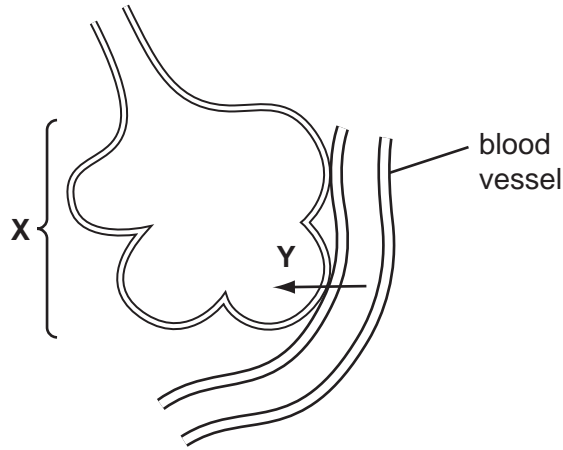


Fig. 6.1

- (i) Name the structure labelled X. [1]
- (ii) Name the type of blood vessel that is shown in Fig. 6.1. [1]
- (iii) On Fig. 6.1, draw an arrow to show the direction in which air flows when the person breathes out. [1]
- (iv) Carbon dioxide diffuses out of the blood down its concentration gradient, as shown by arrow Y.

Explain why there is more carbon dioxide in the blood that is brought to the lungs than in the air inside structure X.

.....
.....
..... [2]

- (v) Describe how blood travels from the heart to the lungs. Your description should include the role of the heart in this process.

.....
.....
.....
.....
..... [3]

(b) Many people who regularly smoke tobacco get bronchitis. This happens when mucus builds up in the lungs. Bacteria breed in the mucus.

*For
Examiner's
Use*

(i) Explain why mucus builds up in the lungs of a person who smokes tobacco.

.....
.....
..... [2]

(ii) Explain why a build-up of mucus inside structure **X** in Fig. 6.1 would make gas exchange difficult.

.....
.....
..... [2]

- 7 (a) (i) Caffeine is a compound contained in coffee. Many people who consume caffeine during the day often find that they have difficulty in getting to sleep at night.

Explain why it is correct to refer to caffeine as a *drug*.

.....
..... [1]

- (ii) Some drugs are analgesics.

Why might a person need to take an analgesic?

..... [1]

- (b) Some coffee drinks are sold in self-heating cans.

Fig. 7.1 shows a cross-sectional diagram of one design of self-heating can.

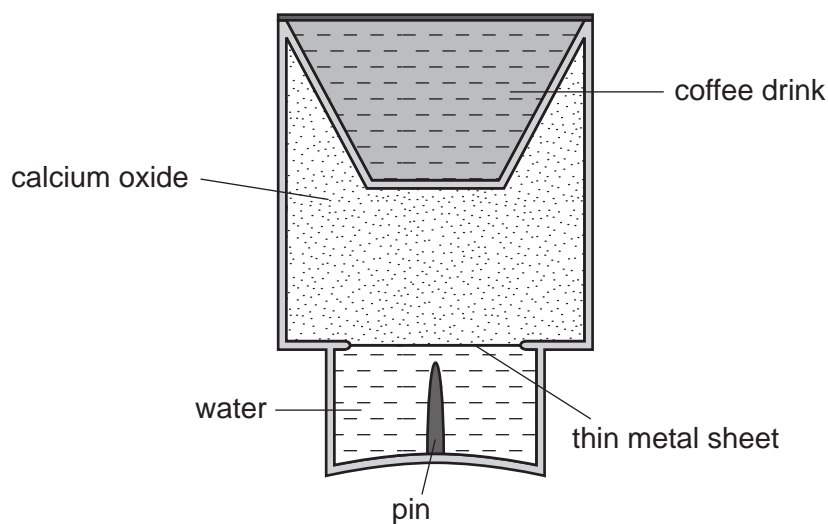


Fig. 7.1

Fig. 7.2 shows the can after it has been turned upside down and the pin pushed through the thin metal sheet. This allows the water to fall into the calcium oxide.

For
Examiner's
Use

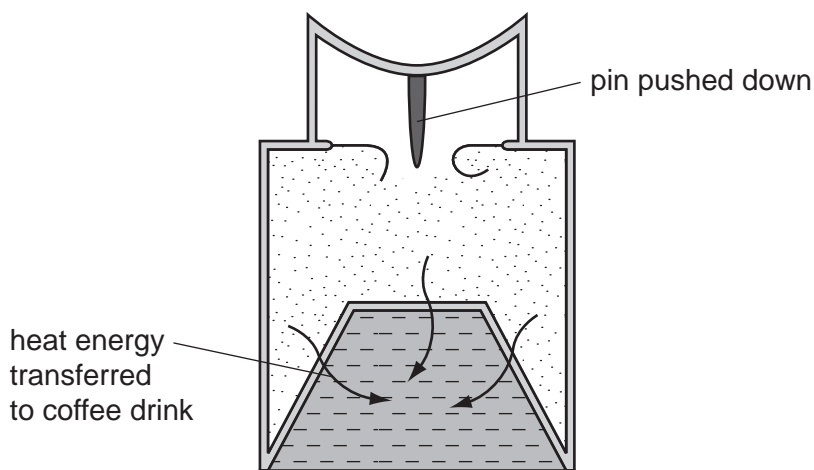


Fig. 7.2

The reaction between calcium oxide and water produces the compound calcium hydroxide, $\text{Ca}(\text{OH})_2$.

- (i) In an internet video to explain how the can works, it is stated that the water mixes with 'limestone'.


State why this information is **incorrect**.

.....
..... [1]

- (ii) What can be deduced about the reaction between water and calcium oxide ?

..... [1]

- (iii) A student suggests the symbolic equation below for the reaction between calcium oxide and water.



Explain whether or not this is a correctly balanced equation.

.....
.....
..... [2]

(c) Calcium hydroxide forms an alkaline solution which is known as limewater.

*For
Examiner's
Use*

- (i) Name the compound that can be tested for using limewater, and describe the result of this test.

compound

result of test

..... [2]

- (ii) Suggest a solution which could be used to neutralise a sample of limewater and name one of the products of the reaction.

solution

product [2]

8 (a) Fig. 8.1 shows an electric kettle.

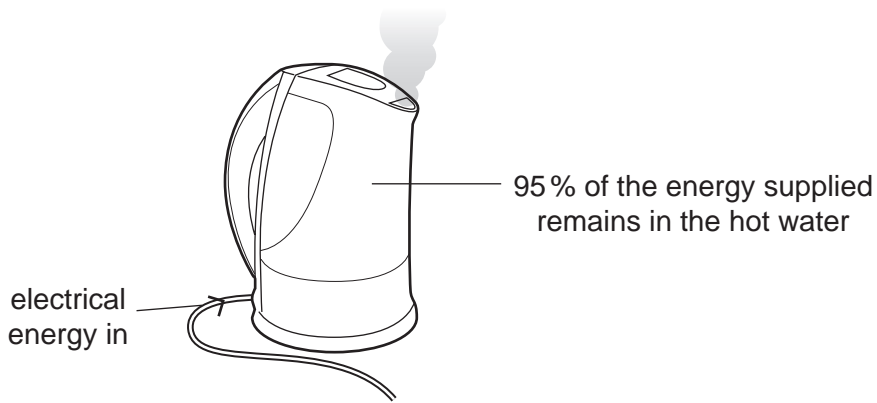


Fig. 8.1

What happens to the rest of the energy supplied?

..... [1]

(b) The bar chart in Fig. 8.2 shows the electrical power rating of three kettles.

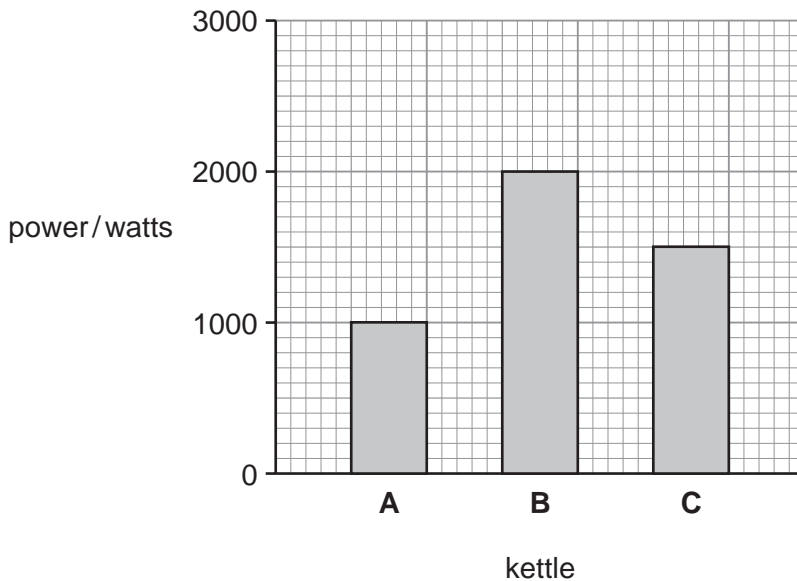


Fig. 8.2

(i) What is the power rating of kettle C ?

..... W [1]

(ii) Kettle A takes 10 minutes to boil some water.

Predict how long kettle B will take to boil the same mass of water.

..... minutes [1]

- (c) In a kettle, the liquid water boils and turns into steam, a gas.

Fig. 8.3 shows the arrangement of particles in a solid.

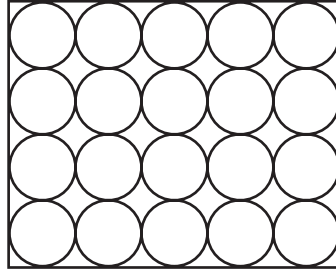
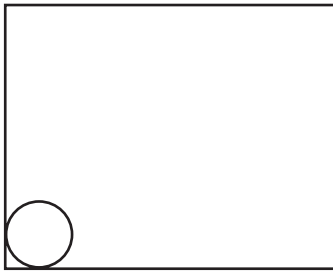



Fig. 8.3

Draw similar diagrams for a liquid and a gas.



liquid



gas

[2]

- (d) Kettle **A** has a label underneath it. Fig 8.4 shows some of the information on this label.

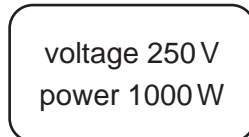


Fig. 8.4

- (i) Use the formula

$$\text{power} = \text{voltage} \times \text{current}$$

to show that the maximum current likely to pass through the kettle is 4 A.

[1]

(ii) A current of 4 A passes through the kettle for two minutes.

Calculate the number of coulombs of charge which pass through the kettle.

State the formula that you use and show your working.

formula used

working

..... C [2]

(iii) In another kettle, the current was 10 A when used with a 250 V supply.

Calculate the resistance of the heating element in the kettle.

State the formula that you use and show your working.

formula used

working

..... Ω [2]

(e) Use the idea of *convection* to explain why a kettle has the heating element at the bottom.

.....
.....
..... [2]

(f) The rules in Fig 8.5 are from an electrical safety manual.

For
Examiner's
Use

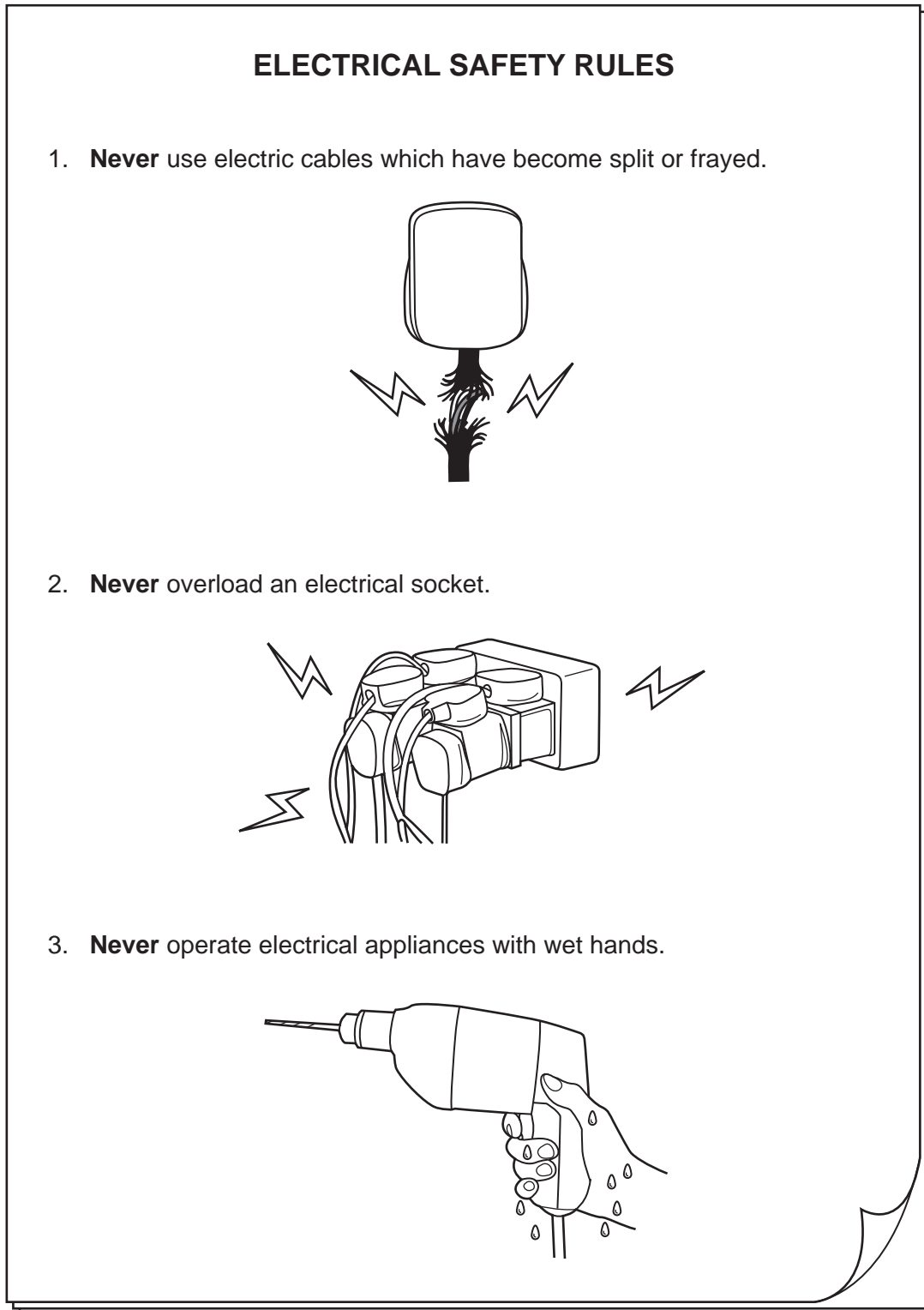


Fig. 8.5

Explain why each of these safety rules is important.

*For
Examiner's
Use*

rule 1

.....

.....

rule 2

.....

.....

rule 3

.....

.....

[3]

9 Cichlid fish live in lakes in east Africa. Fig. 9.1 shows a cichlid fish.

For
Examiner's
Use




Fig. 9.1

(a) (i) State **two** features, visible on Fig. 9.1, which are characteristic of fish.

- 1
- 2 [2]

(ii) State **one** feature, visible on Fig. 9.1, that is shared by fish and reptiles, but not by amphibians and mammals.

..... [1]


(b) Fish reproduce sexually. The female fish lays eggs into the water. The male fish releases sperm onto them. Fertilisation takes place in the water.

Explain what is meant by *fertilisation*.

.....
.....
..... [2]

- (c) When the young hatch from the eggs, the mother cichlid fish takes them into her mouth whenever danger threatens.

For
Examiner's
Use



Cichlid fish mothers that have been bred and kept in captivity do not do this. The breeders have to take the young away from the mothers, because the mothers eat their young.

Researchers measured the levels of testosterone in two groups of cichlid fish mothers. One group had been bred in captivity, and the other group had recently been caught in the wild.

Fig. 9.2 shows the results.

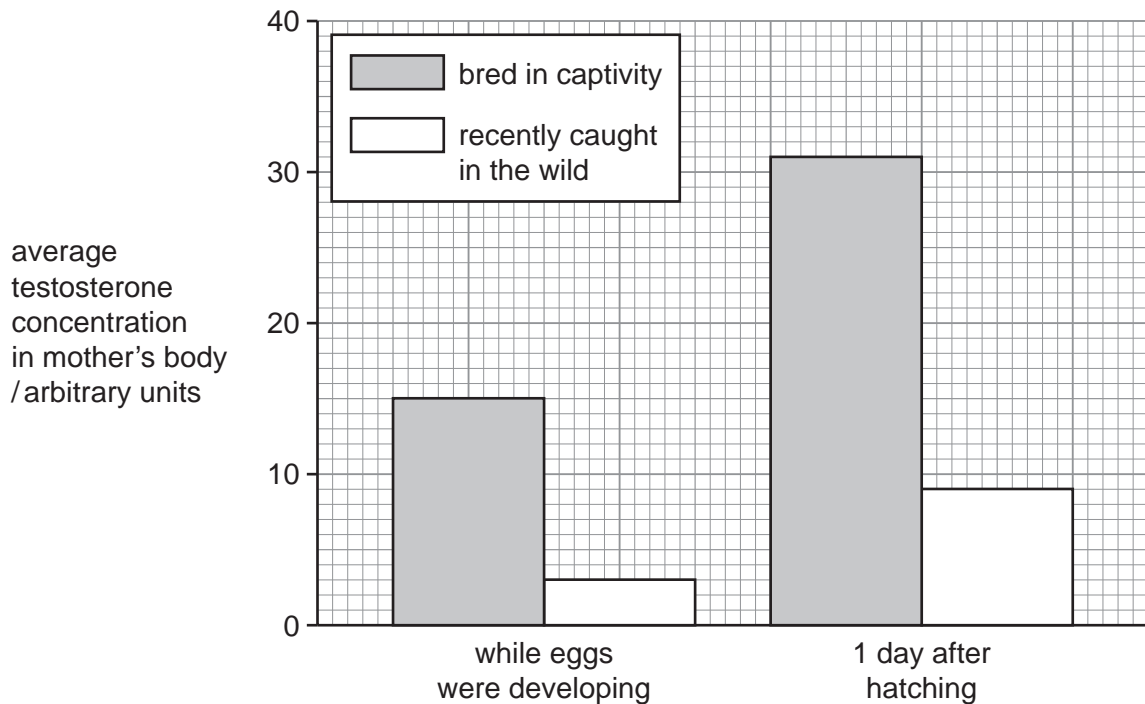


Fig. 9.2

- (i) Describe how the testosterone concentrations in the fish bred in captivity differed from the fish caught in the wild.

.....
.....
..... [2]

- (ii) These results do **not** prove that high testosterone levels in the mothers bred in captivity caused them to eat their young.

Explain why this statement is correct.

.....
.....
..... [1]

- (d) In humans, testosterone is produced in much larger quantities in men than in women.

Name the organ that produces testosterone in men.

..... [1]

DATA SHEET
The Periodic Table of the Elements

		Group																																																																																										
I	II	III	IV	V	VI	VII	O					O																																																																																
7 Li Lithium 3	9 Be Beryllium 4	1 H Hydrogen 1	11 B Boron 5	12 C Carbon 6	14 N Nitrogen 7	16 O Oxygen 8	19 F Fluorine 9	20 Ne Neon 10	23 Na Sodium 11	24 Mg Magnesium 12	27 Al Aluminium 13	28 Si Silicon 14	31 P Phosphorus 15	32 S Sulfur 16	35.5 Cl Chlorine 17	40 Ar Argon 18	39 K Potassium 19	40 Ca Calcium 20	45 Sc Scandium 21	48 Ti Titanium 22	51 V Vanadium 23	52 Cr Chromium 24	55 Mn Manganese 25	56 Fe Iron 26	59 Co Cobalt 27	59 Ni Nickel 28	64 Cu Copper 29	65 Zn Zinc 30	70 Ga Gallium 31	73 Ge Germanium 32	75 As Arsenic 33	79 Se Selenium 34	80 Br Bromine 35	84 Kr Krypton 36	85 Rb Rubidium 37	88 Sr Strontium 38	89 Y Yttrium 39	91 Zr Zirconium 40	93 Nb Niobium 41	96 Mo Molybdenum 42	101 Ru Ruthenium 44	106 Pd Palladium 46	112 Cd Cadmium 48	115 In Indium 49	119 Sn Tin 50	122 Sb Antimony 51	127 I Iodine 53	131 Xe Xenon 54	133 Cs Cesium 55	137 Ba Barium 56	139 La Lanthanum 57	178 Hf Hafnium 72	181 Ta Tantalum 73	184 W Tungsten 74	186 Re Rhenium 75	190 Os Osmium 76	195 Pt Platinum 78	197 Au Gold 79	201 Hg Mercury 80	204 Tl Thallium 81	207 Pb Lead 82	209 Bi Bismuth 83	210 Po Polonium 84	210 At Astatine 85	226 Ra Radium 88	227 Ac Actinium 89	232 Th Thorium 90	238 U Uranium 92	238 Np Neptunium 93	238 Pu Plutonium 94	238 Am Americium 95	238 Cm Curium 96	238 Bk Berkelium 97	238 Cf Californium 98	238 Es Einsteinium 99	238 Fm Fermium 100	238 Md Mendelevium 101	238 No Nobelium 102	238 Lr Lawrencium 103	140 Ce Cerium 58	141 Pr Praseodymium 59	144 Nd Neodymium 60	147 Pm Promethium 61	150 Sm Samarium 62	152 Eu Europium 63	157 Gd Gadolinium 64	162 Dy Dysprosium 66	165 Ho Holmium 67	167 Er Erbium 68	169 Tm Thulium 69	173 Yb Ytterbium 70	175 Lu Lutetium 71

* 58-71 Lanthanoid series
† 90-103 Actinoid series

a	X
b	

Key

a = relative atomic mass
X = atomic symbol
b = proton (atomic) number

The volume of one mole of any gas is 24 dm³ at room temperature and pressure (r.t.p.).

Permission to reproduce items where third-party owned material protected by copyright is included has been sought and cleared where possible. Every reasonable effort has been made by the publisher (UCLES) to trace copyright holders, but if any items requiring clearance have unwittingly been included, the publisher will be pleased to make amends at the earliest possible opportunity.

University of Cambridge International Examinations is part of the Cambridge Assessment Group. Cambridge Assessment is the brand name of University of Cambridge Local Examinations Syndicate (UCLES), which is itself a department of the University of Cambridge.