



CO-ORDINATED SCIENCES

0654/11

Paper 1 Multiple Choice

October/November 2014

45 minutes

Additional Materials: Multiple Choice Answer Sheet
Soft clean eraser
Soft pencil (type B or HB is recommended)

* 2 5 0 9 1 3 3 5 6 1 3 *

READ THESE INSTRUCTIONS FIRST

Write in soft pencil.
Do not use staples, paper clips, glue or correction fluid.
Write your name, Centre number and candidate number on the Answer Sheet in the spaces provided unless this has been done for you.
DO NOT WRITE IN ANY BARCODES.

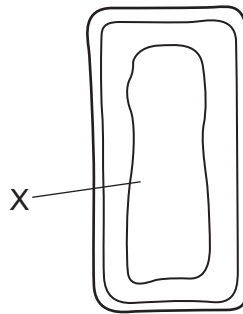
There are **forty** questions on this paper. Answer **all** questions. For each question there are four possible answers **A, B, C** and **D**.
Choose the **one** you consider correct and record your choice in **soft pencil** on the separate Answer Sheet.

Read the instructions on the Answer Sheet very carefully.

Each correct answer will score one mark. A mark will not be deducted for a wrong answer.
Any rough working should be done in this booklet.
A copy of the Periodic Table is printed on page 20.
Electronic calculators may be used.

This document consists of **17** printed pages and **3** blank pages.

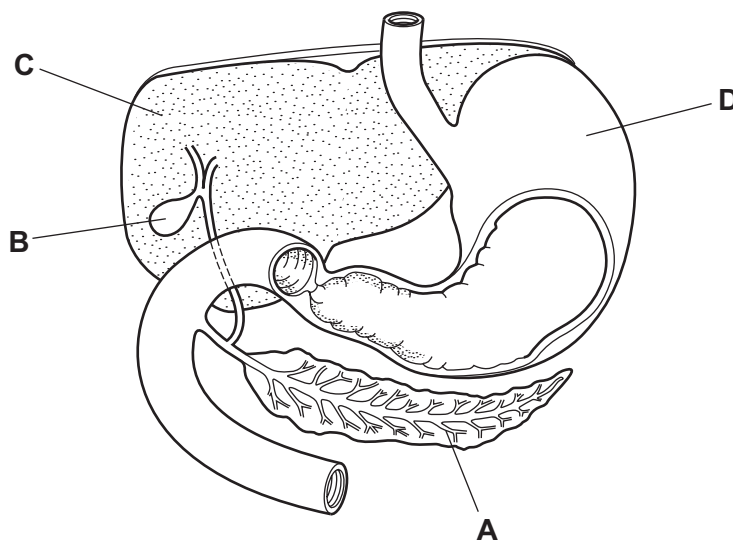
- 1 The diagram shows parts of a mesophyll cell.



What will be found in the part labelled X?

- A chloroplasts and nucleus
 - B chloroplasts only
 - C nucleus only
 - D watery solution
- 2 Which statement about cells is correct?
- A Cell membranes are found only in animal cells.
 - B Cell membranes are found only in plant cells.
 - C Cell walls are found only in animal cells.
 - D Cell walls are found only in plant cells.
- 3 The diagram shows part of the digestive system.

Where is lipase produced?

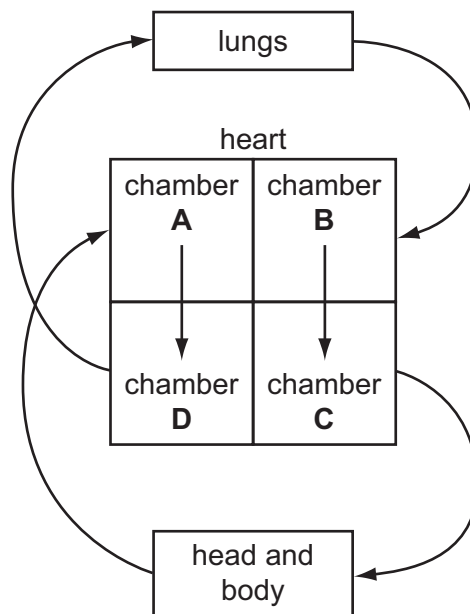


4 What is the correct word equation for photosynthesis?

- A carbon dioxide + sugar → oxygen + water
- B carbon dioxide + water → oxygen + sugar
- C oxygen + sugar → carbon dioxide + water
- D oxygen + water → carbon dioxide + sugar

5 The diagram represents the human blood system.

Which chamber of the heart is the left ventricle?



6 Which statement about the pulmonary vein is correct?

- A It carries deoxygenated blood away from the heart.
- B It carries deoxygenated blood towards the heart.
- C It carries oxygenated blood away from the heart.
- D It carries oxygenated blood towards the heart.

7 Why does oxygen move from an alveolus to a blood capillary?

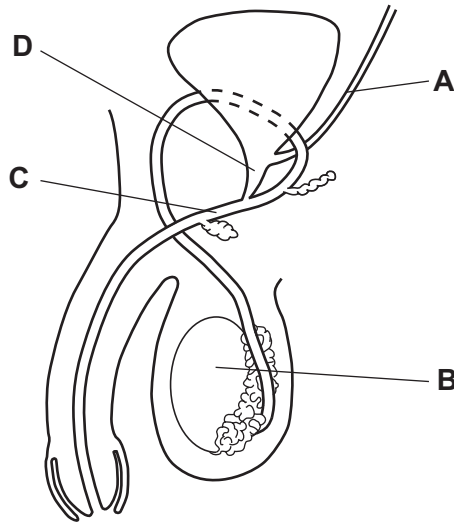
- A It diffuses through because of a difference in concentration.
- B It is forced through the wall of the alveolus by air pressure.
- C It passes through because carbon dioxide is coming out.
- D It is pulled in by movement of blood in the capillary.

- 8 When a plant organ grows towards a stimulus, its response is described as 'positive'. When it grows away from a stimulus, its response is described as 'negative'.

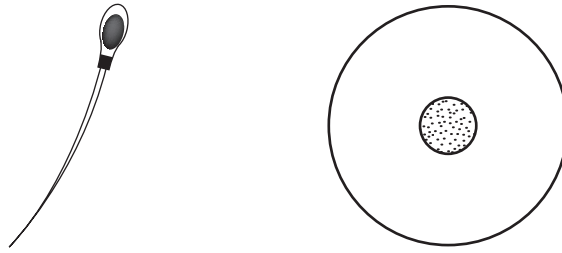
A plant root is placed horizontally in the dark.

Which response would it show?

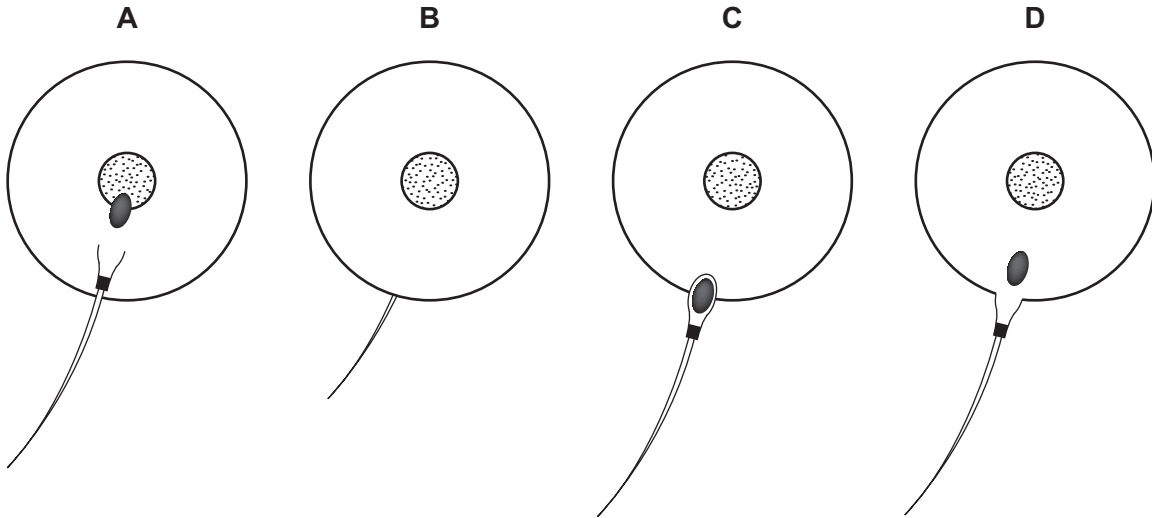
- A negative geotropism
 - B negative phototropism
 - C positive geotropism
 - D positive phototropism
- 9 The diagram shows the male reproductive system of a human.
- Which labelled part is found only in a male?



10 The diagram shows a sperm and an egg.



Which diagram shows fertilisation?



11 Which statements about X chromosomes are correct?

	present in body cells in males	present in body cells of females	carry genes
A	✓	✓	✓
B	✓	x	✓
C	✓	x	x
D	x	✓	x

12 Cystic fibrosis is an inherited disease.

Only people who are homozygous recessive, ff, have this disease.

Which cross could **not** give rise to a child suffering from cystic fibrosis?

- A** $ff \times ff$ **B** $Ff \times ff$ **C** $Ff \times Ff$ **D** $FF \times ff$

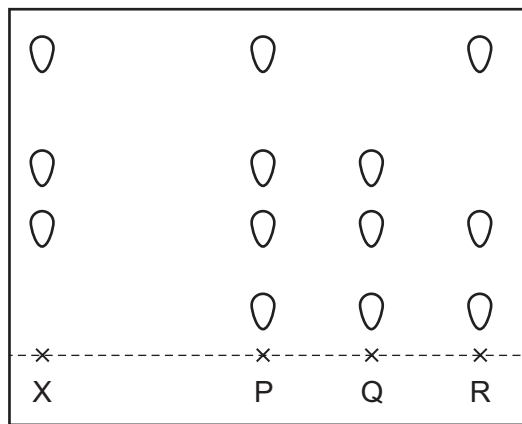
13 In an ecosystem, how do producers get most of their energy?

- A absorbing sunlight
- B eating other organisms
- C feeding on dead matter
- D using nutrients recycled by decay

14 Dye X is a mixture of different coloured substances.

Chromatography is used to compare X with three other mixtures, P, Q and R.

The results are shown in the diagram.



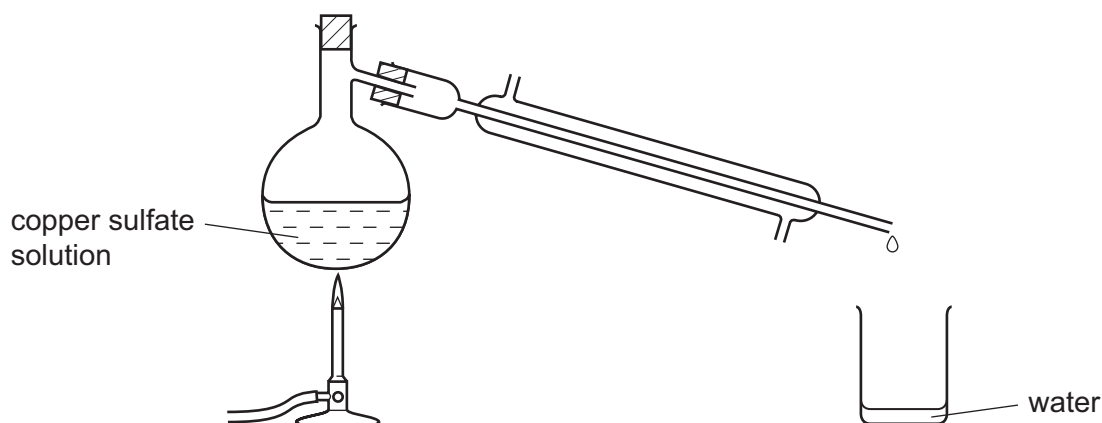
Which other mixtures contain the dye X?

- A P only
- B R only
- C P and Q only
- D P, Q and R

15 Which process can be used to produce sodium and chlorine from the compound sodium chloride?

- A cracking
- B distillation
- C electrolysis
- D filtration

16 Water can be separated from copper sulfate solution using the apparatus shown.



What is the name of the process?

- A chromatography
- B crystallisation
- C distillation
- D filtration

17 Which statement describes the particles in a gas?

- A As the particles move quicker the pressure of the gas decreases.
- B The movement of the particles is unaffected by temperature.
- C The particles are in random motion.
- D The particles are ordered.

18 Sodium chloride (salt) has an ionic structure.

Which compound could be sodium chloride?

	melting point /°C	boiling point /°C	electrical conductivity
A	-114	-85	conducts when dissolved in water
B	98	880	conducts when solid
C	801	1413	conducts when dissolved in water
D	1610	2230	conducts when solid

19 When a match is struck, heat and light energy are produced.

Which row describes the type of change and the type of reaction taking place?

	type of change	type of reaction
A	chemical	endothermic
B	chemical	exothermic
C	physical	endothermic
D	physical	exothermic

20 Metal X is extracted from its oxide by heating with carbon.

The oxide of X reacts with hydrochloric acid.

Which row shows the type of oxide and the type of reaction that occurs to the oxide when it is heated with carbon?

	type of oxide	type of reaction
A	acidic	oxidation
B	acidic	reduction
C	basic	oxidation
D	basic	reduction

21 Which statement about the trends in the Periodic Table is correct?

- A** Elements are arranged in order of nucleon number.
- B** Elements on the left hand side form acidic oxides.
- C** The melting point of the Group I elements increases down the group.
- D** The proton number increases from left to right across the table.

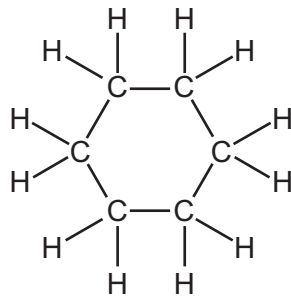
22 The first row of the transition elements is shown.

Sc	Ti	V	Cr	Mn	Fe	Co	Ni	Cu	Zn
----	----	---	----	----	----	----	----	----	----

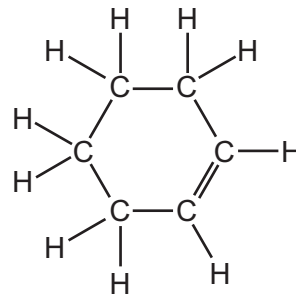
Which statement about transition metals is **not** correct?

- A** They are often used as catalysts.
- B** They form colourless compounds.
- C** They have high densities.
- D** They have high melting points.

23 The structures of compounds X and Y are shown.



compound X

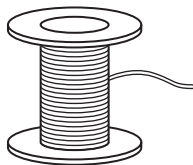


compound Y

What are the correct formulae for these two compounds?

	compound X	compound Y
A	C_6H_{14}	C_6H_{10}
B	C_6H_{14}	C_6H_{12}
C	C_6H_{12}	C_6H_{10}
D	C_6H_{12}	C_6H_{12}

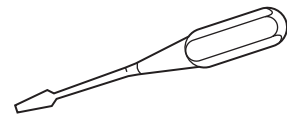
24 Some uses of alloys are shown.



solder



coins

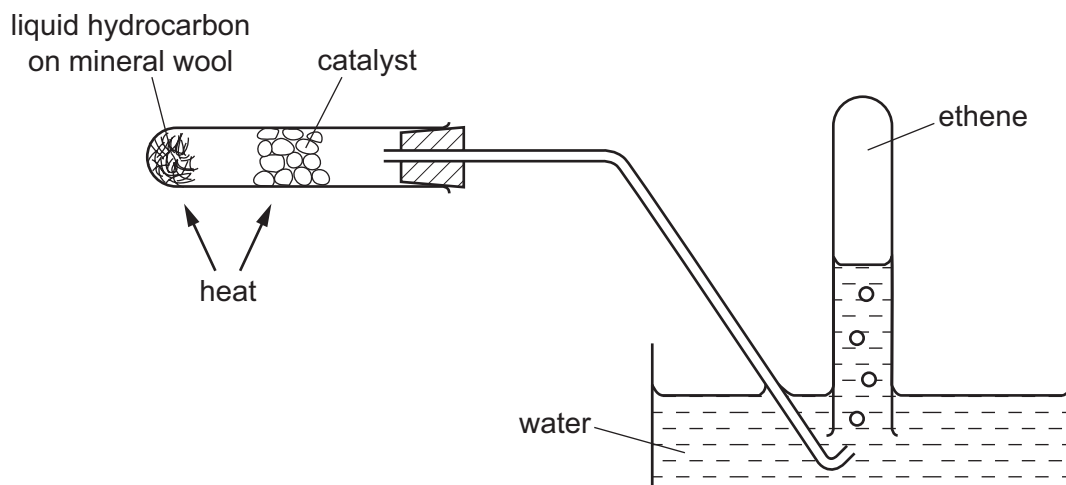


tools

Which statement about alloys is correct?

- A** They are always stronger than the metals from which they are made.
- B** They are made from metals because metals are poor electrical conductors.
- C** They contain mixtures of compounds that contain metals.
- D** They have different properties to the metals from which they are made.

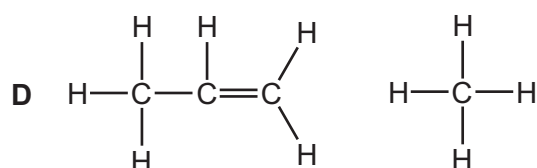
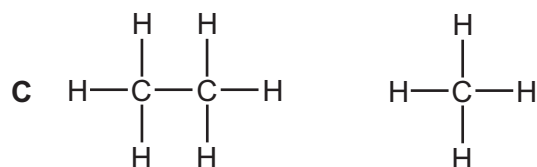
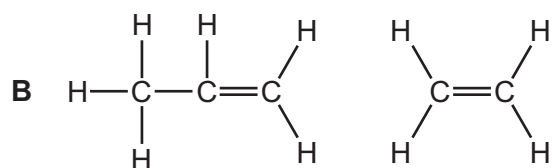
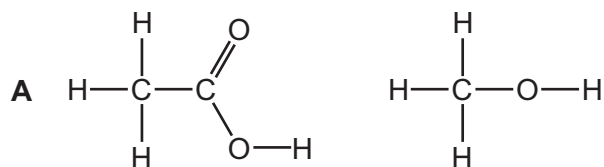
25 The diagram shows an experiment on a liquid hydrocarbon.



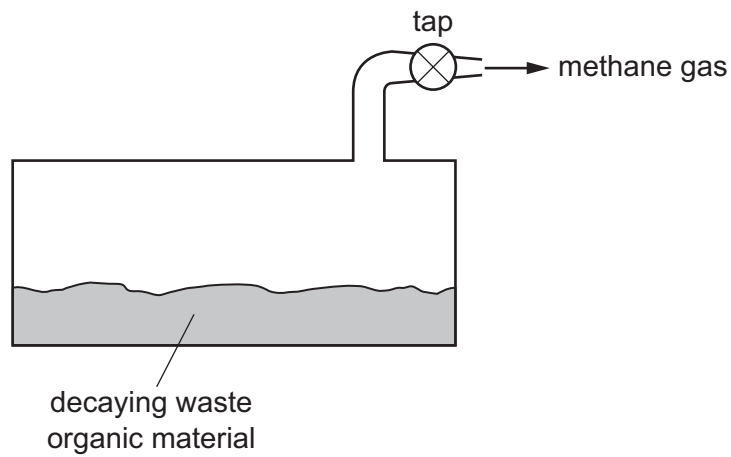
Which change takes place?

- A combustion
- B cracking
- C fractional distillation
- D polymerisation

26 In which pair are **both** molecules unsaturated?



27 The diagram shows waste organic material decaying.

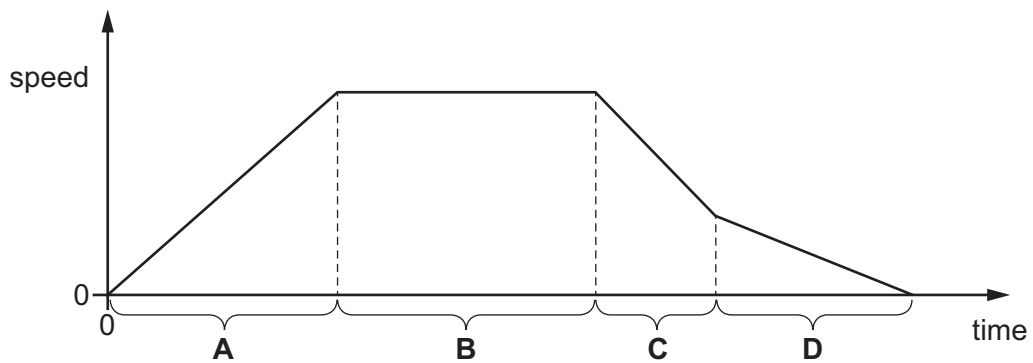


What is formed when the gas, methane, is burned?

- A carbon dioxide and water
- B carbon dioxide only
- C carbon monoxide
- D water only

28 The diagram shows the speed/time graph for a car.

During which period is the car moving at constant speed?



29 Three forces act on a block.

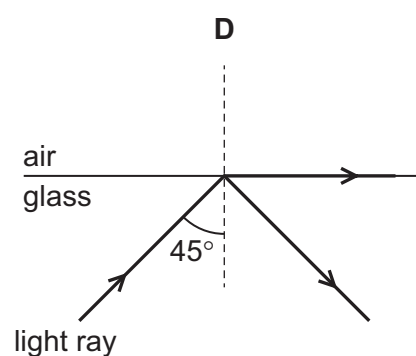
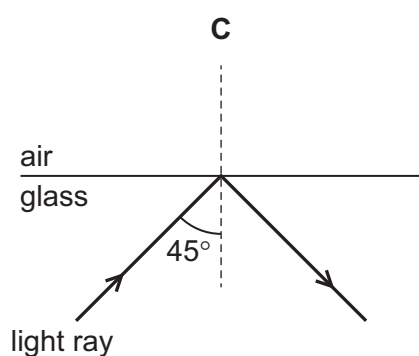
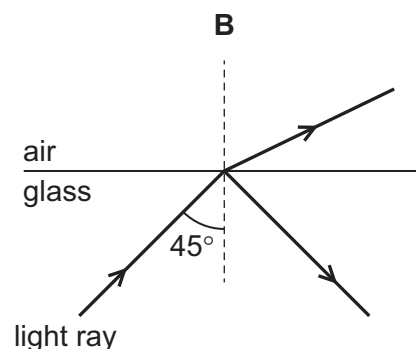
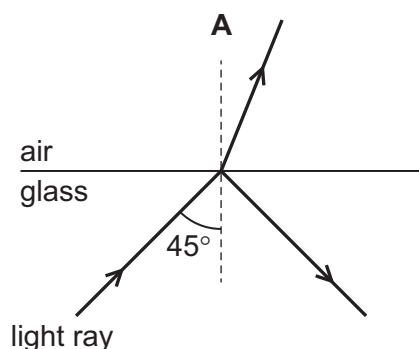


What is the resultant force and what is its direction?

- A 3 N to the right
 - B 6 N to the left
 - C 15 N to the left
 - D 18 N to the right
- 30 Which energy resource does **not** provide energy originally derived from the Sun?
- A coal
 - B geothermal
 - C tides
 - D waves
- 31 A flask contains a hot liquid. The flask has double walls with a vacuum between them. The vacuum reduces loss of thermal energy from the hot liquid.
- Which types of thermal energy transfer **cannot** occur through the vacuum?
- A conduction and convection only
 - B conduction and radiation only
 - C convection and radiation only
 - D conduction, convection and radiation
- 32 Which waves are longitudinal?
- A light waves from a lamp
 - B sound waves from a piano
 - C ultraviolet waves from the Sun
 - D X-rays from a security scanner

33 A ray of light travels in glass towards a glass/air boundary. The critical angle for glass is 42° .

Which diagram shows what happens to the ray?



34 Which type of waves are used for intruder alarms?

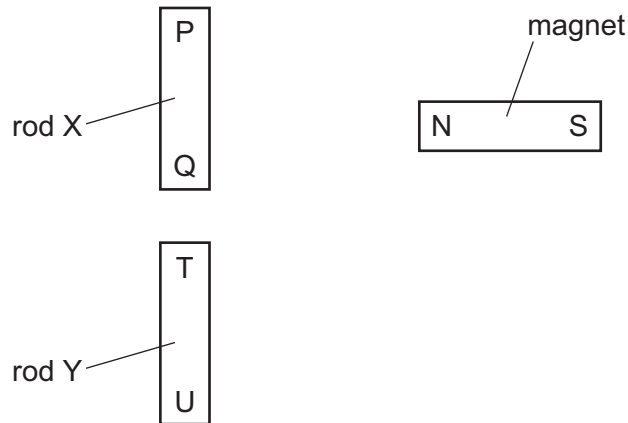
- A γ -rays
- B infra-red waves
- C ultraviolet waves
- D X-rays

35 Music is produced by the loudspeaker of a radio.

Which property of the sound waves from the loudspeaker increases when the music is made louder?

- A amplitude
- B frequency
- C speed
- D wavelength

36 Two rods, X and Y, look the same.



The N pole of a magnet is brought close, in turn, to P, Q, T and U. The results of these four actions are shown in the table.

end tested	result
P	attraction
Q	attraction
T	attraction
U	repulsion

Which of the rods is a permanent magnet, with a pole at each end?

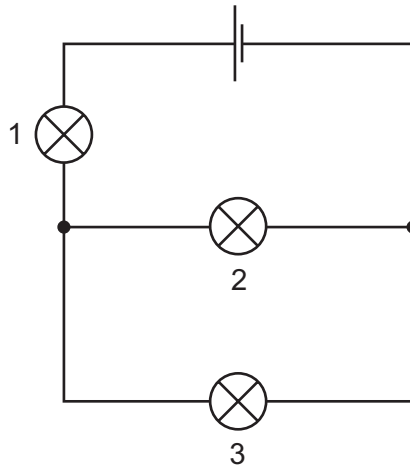
- A both of the rods
- B neither of the rods
- C rod X only
- D rod Y only

37 The current in a resistor is 0.50 A and the potential difference across the resistor is 4.6 V.

What is the resistance of the resistor?

- A 0.11 Ω
- B 2.3 Ω
- C 5.1 Ω
- D 9.2 Ω

38 In the circuit all the lamps are lit.

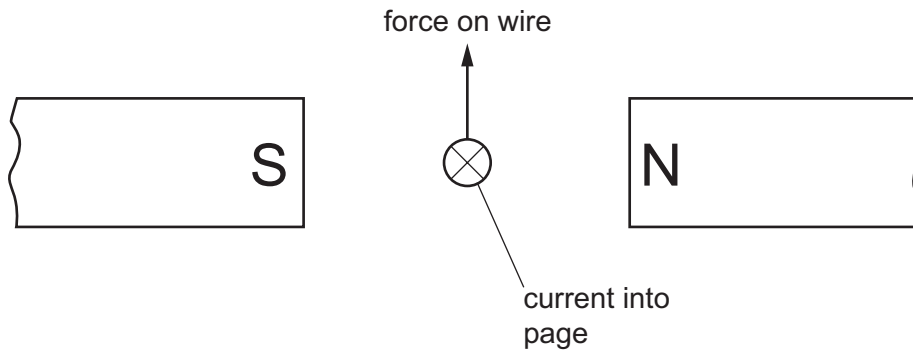


Lamp 2 is removed.

What happens to each of the other lamps?

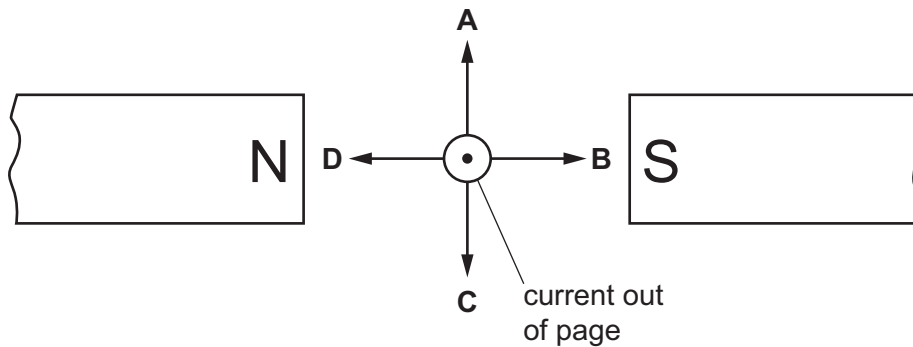
	lamp 1	lamp 3
A	goes out	goes out
B	goes out	stays lit
C	stays lit	goes out
D	stays lit	stays lit

- 39 A wire carries an electric current. The wire is placed between the poles of a magnet. This causes a force that pushes the wire upwards.




The poles of the magnet and the direction of the current are both reversed.

Which arrow now shows the direction of the force on the wire?



- 40 During a fire in a laboratory storeroom, some radioactive material is spilt. A firefighter detects radiation through the lead-lined walls of the storeroom. The radiation is emitted by the radioactive material.



Which type of radiation from the radioactive material is detected?

- A α -particles
- B β -particles
- C γ -rays
- D X-rays

DATA SHEET
The Periodic Table of the Elements

		Group																																																													
		I	II	III	IV	V	VI	VII	0																																																						
		<table style="width: 100%; border-collapse: collapse;"> <tr> <td style="width: 5%; text-align: right;">1</td> <td style="width: 5%; text-align: center;">H Hydrogen 1</td> <td colspan="10" style="border: none;"></td> </tr> </table>										1	H Hydrogen 1												4 He Helium 2																																						
1	H Hydrogen 1																																																														
7	9											19	20																																																		
3	4	3	4											9	10																																																
23	24											35.5	40																																																		
11	12	13	14											17	18																																																
39	40	39	40											79	84																																																
85	86	37	38											53	54																																																
133	137	55	56											85	86																																																
Fr Francium 87	Ra Radium 88	Ac Actinium 89											At Astatine 85	Rn Radon 86																																																	
<p>*58-71 Lanthanoid series †90-103 Actinoid series</p>		<table style="width: 100%; border-collapse: collapse;"> <tr> <td style="width: 5%; text-align: right;">140</td> <td style="width: 5%; text-align: center;">Ce Cerium 58</td> <td style="width: 5%; text-align: right;">141</td> <td style="width: 5%; text-align: center;">Pr Praseodymium 59</td> <td style="width: 5%; text-align: right;">144</td> <td style="width: 5%; text-align: center;">Nd Neodymium 60</td> <td style="width: 5%; text-align: right;">150</td> <td style="width: 5%; text-align: center;">Sm Samarium 62</td> <td style="width: 5%; text-align: right;">152</td> <td style="width: 5%; text-align: center;">Eu Europium 63</td> <td style="width: 5%; text-align: right;">157</td> <td style="width: 5%; text-align: center;">Gd Gadolinium 64</td> <td style="width: 5%; text-align: right;">162</td> <td style="width: 5%; text-align: center;">Dy Dysprosium 66</td> <td style="width: 5%; text-align: right;">165</td> <td style="width: 5%; text-align: center;">Ho Holmium 67</td> <td style="width: 5%; text-align: right;">167</td> <td style="width: 5%; text-align: center;">Er Erbium 68</td> <td style="width: 5%; text-align: right;">169</td> <td style="width: 5%; text-align: center;">Tm Thulium 69</td> <td style="width: 5%; text-align: right;">173</td> <td style="width: 5%; text-align: center;">Yb Ytterbium 70</td> <td style="width: 5%; text-align: right;">175</td> <td style="width: 5%; text-align: center;">Lu Lutetium 71</td> </tr> <tr> <td style="width: 5%; text-align: right;">232</td> <td style="width: 5%; text-align: center;">Th Thorium 90</td> <td style="width: 5%; text-align: right;">238</td> <td style="width: 5%; text-align: center;">U Uranium 92</td> <td style="width: 5%; text-align: right;">91</td> <td style="width: 5%; text-align: center;">Pa Protactinium 91</td> <td style="width: 5%; text-align: right;">93</td> <td style="width: 5%; text-align: center;">Np Neptunium 93</td> <td style="width: 5%; text-align: right;">94</td> <td style="width: 5%; text-align: center;">Pu Plutonium 94</td> <td style="width: 5%; text-align: right;">95</td> <td style="width: 5%; text-align: center;">Am Americium 95</td> <td style="width: 5%; text-align: right;">96</td> <td style="width: 5%; text-align: center;">Cm Curium 96</td> <td style="width: 5%; text-align: right;">97</td> <td style="width: 5%; text-align: center;">Bk Berkelium 97</td> <td style="width: 5%; text-align: right;">98</td> <td style="width: 5%; text-align: center;">Cf Californium 98</td> <td style="width: 5%; text-align: right;">99</td> <td style="width: 5%; text-align: center;">Es Einsteinium 99</td> <td style="width: 5%; text-align: right;">100</td> <td style="width: 5%; text-align: center;">Fm Fermium 100</td> <td style="width: 5%; text-align: right;">101</td> <td style="width: 5%; text-align: center;">Md Mendelevium 101</td> <td style="width: 5%; text-align: right;">102</td> <td style="width: 5%; text-align: center;">No Nobelium 102</td> <td style="width: 5%; text-align: right;">103</td> <td style="width: 5%; text-align: center;">Lr Lawrencium 103</td> </tr> </table>										140	Ce Cerium 58	141	Pr Praseodymium 59	144	Nd Neodymium 60	150	Sm Samarium 62	152	Eu Europium 63	157	Gd Gadolinium 64	162	Dy Dysprosium 66	165	Ho Holmium 67	167	Er Erbium 68	169	Tm Thulium 69	173	Yb Ytterbium 70	175	Lu Lutetium 71	232	Th Thorium 90	238	U Uranium 92	91	Pa Protactinium 91	93	Np Neptunium 93	94	Pu Plutonium 94	95	Am Americium 95	96	Cm Curium 96	97	Bk Berkelium 97	98	Cf Californium 98	99	Es Einsteinium 99	100	Fm Fermium 100	101	Md Mendelevium 101	102	No Nobelium 102	103	Lr Lawrencium 103
140	Ce Cerium 58	141	Pr Praseodymium 59	144	Nd Neodymium 60	150	Sm Samarium 62	152	Eu Europium 63	157	Gd Gadolinium 64	162	Dy Dysprosium 66	165	Ho Holmium 67	167	Er Erbium 68	169	Tm Thulium 69	173	Yb Ytterbium 70	175	Lu Lutetium 71																																								
232	Th Thorium 90	238	U Uranium 92	91	Pa Protactinium 91	93	Np Neptunium 93	94	Pu Plutonium 94	95	Am Americium 95	96	Cm Curium 96	97	Bk Berkelium 97	98	Cf Californium 98	99	Es Einsteinium 99	100	Fm Fermium 100	101	Md Mendelevium 101	102	No Nobelium 102	103	Lr Lawrencium 103																																				

Key

a	X	a = relative atomic mass
b	X	X = atomic symbol
b	X	b = proton (atomic) number

The volume of one mole of any gas is 24 dm³ at room temperature and pressure (r.t.p.).

Permission to reproduce items where third-party owned material protected by copyright is included has been sought and cleared where possible. Every reasonable effort has been made by the publisher (UCLES) to trace copyright holders, but if any items requiring clearance have unwittingly been included, the publisher will be pleased to make amends at the earliest possible opportunity.

Cambridge International Examinations is part of the Cambridge Assessment Group. Cambridge Assessment is the brand name of University of Cambridge Local Examinations Syndicate (UCLES), which is itself a department of the University of Cambridge.