

CANDIDATE
NAME

| |
|--|
| |
|--|

CENTRE
NUMBER

| | | | | |
|--|--|--|--|--|
| | | | | |
|--|--|--|--|--|

CANDIDATE
NUMBER

| | | | |
|--|--|--|--|
| | | | |
|--|--|--|--|



DEVELOPMENT STUDIES

0453/02

Paper 2

October/November 2018

2 hours

Candidates answer on the Question Paper.

No Additional Materials are required.

READ THESE INSTRUCTIONS FIRST

Write your Centre number, candidate number and name on all the work you hand in.

Write in dark blue or black pen.

You may use an HB pencil for any diagrams, graphs or rough working.

Do not use staples, paper clips, glue or correction fluid.

DO NOT WRITE IN ANY BARCODES.

Answer **all** the questions.

You may not need all the answer lines for your answer.

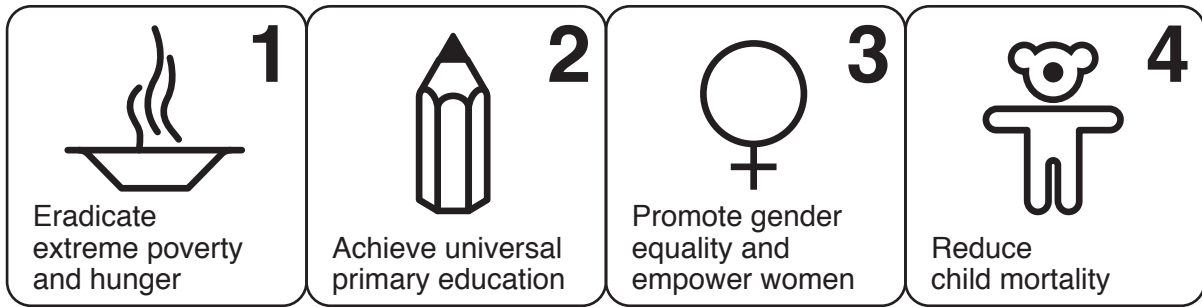
You should read and study the sources **before** answering the questions.

At the end of the examination, fasten all your work securely together.

The number of marks is given in brackets [] at the end of each question or part question.

This document consists of **19** printed pages and **1** blank page.

1 (a) Study Fig. 1.1, which shows the Millennium Development Goals.



Millennium Development Goals



Fig. 1.1

(i) Explain what is meant by the following terms:

gender equality

.....
.....

universal primary education.

.....
.....[2]

(ii) Goal 1 was to 'eradicate extreme poverty and hunger'.

State **two** indicators which could be used to measure poverty and hunger.

1
.....

2
.....[2]

(iii) Goal 6 was to ‘combat HIV/AIDS, malaria and other diseases’.

Explain why it is important to reduce the amount of people suffering from diseases in developing countries.

.....

.....

.....

.....

.....

.....

.....

..... [3]

(b) Study Fig. 1.2, which shows the results of a survey on the success of the Millennium Development Goals.

700 people from different parts of the world were asked the following question:
'How successful do you think the Millennium Development Goals have been?'

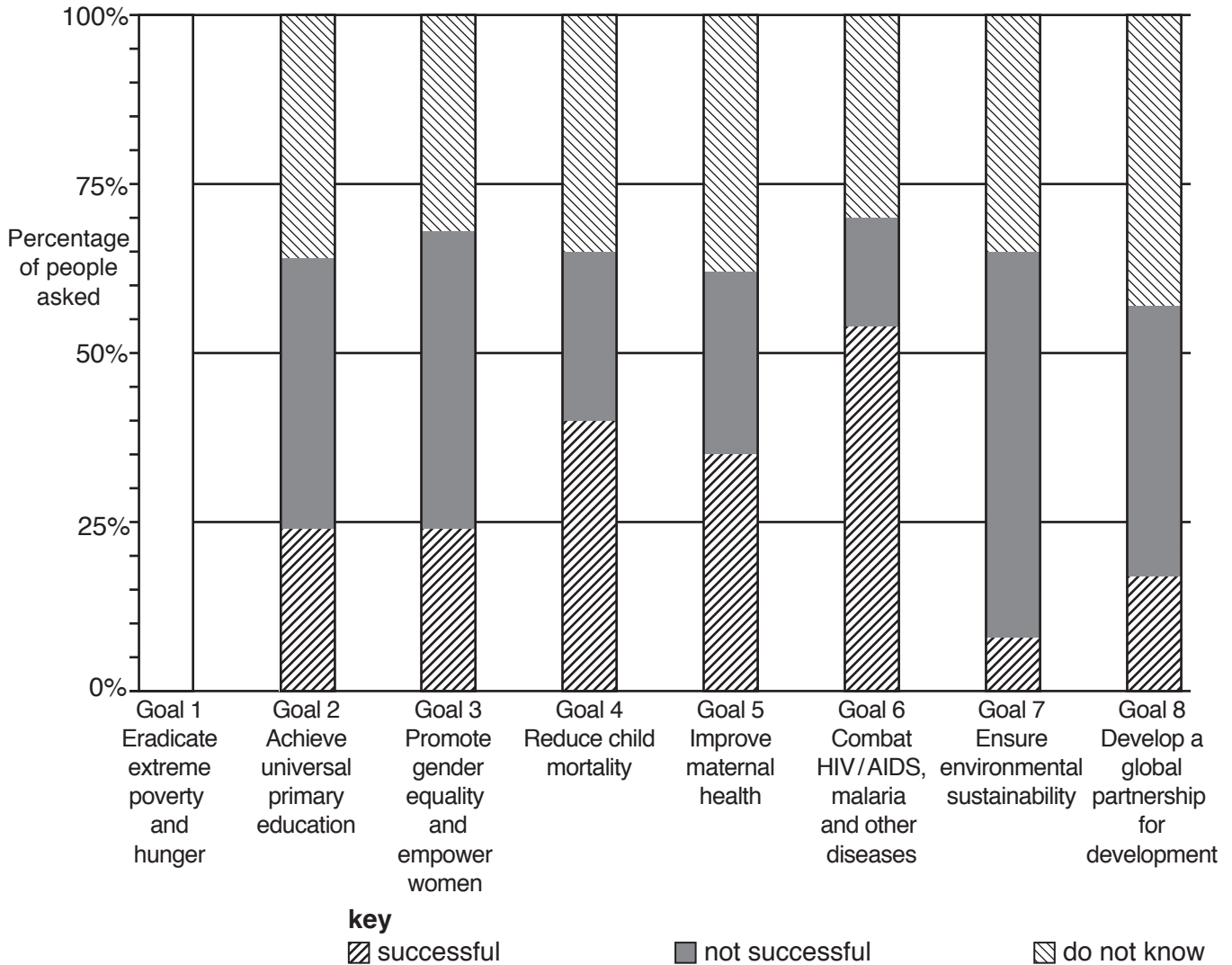


Fig. 1.2

(i) Complete the bar for Millennium Development Goal 1 by plotting the following information:

| | |
|----------------|-----|
| Successful | 18% |
| Not successful | 52% |
| Do not know | 30% |

[3]

- (ii) Using Fig. 1.2, put the following goals in rank order according to how successful people think they have been. You should rank the goals from most successful to least successful.

Ensure environmental sustainability

Improve maternal health

Reduce child mortality

| | |
|---|-------------------------|
| Most successful ↑ ↓ Least successful | |
|---|-------------------------|

[1]

- (iii) Using Fig. 1.2, compare the opinions of the people interviewed about the success of Millennium Development Goals 3 and 6.

You should use statistics in your answer.

.....
.....
.....
.....
.....
.....
.....[3]

- (iv) Suggest **two** reasons for the difference in opinions of the people surveyed about the success of the Millennium Development Goals.

For each reason you should explain your answer.

1
.....
.....
.....
.....
.....
.....
.....
.....
.....
.....[4]

- (c) Study Table 1.3, which shows how successful the Millennium Development Goals have been in different parts of Asia.

Table 1.3

| | Eastern Asia | South-Eastern Asia | Southern Asia | Western Asia |
|--|--------------|--------------------|---------------|--------------|
| Goal 1 Eradicate extreme poverty and hunger | ✓ | □ | □ | ✗ |
| Goal 2 Achieve universal primary education | ✓ | □ | □ | □ |
| Goal 3 Promote gender equality and empower women | □ | ✗ | □ | ✗ |
| Goal 4 Reduce child mortality | ✓ | □ | □ | □ |
| Goal 5 Improve maternal health | □ | □ | □ | ✗ |
| Goal 6 Combat HIV/AIDS, malaria and other diseases | ✗ | □ | □ | ✗ |
| Goal 7 Ensure environmental sustainability | □ | □ | ✗ | ✗ |
| Goal 8 Develop a global partnership for development | ✓ | ✓ | ✗ | ✓ |

key ✓ = successful □ = partly successful ✗ = unsuccessful

- (i) Identify the following:

a Millennium Development Goal which has been partly successful in three parts of Asia;

.....

a Millennium Development Goal which has been unsuccessful in two parts of Asia.

.....[2]

- 2 (a) Study Fig. 2.1, which shows information about changes in the under-five mortality rate in different parts of the world.

**Under-five mortality rate, 1990 and 2015
(deaths per 1000 live births)**

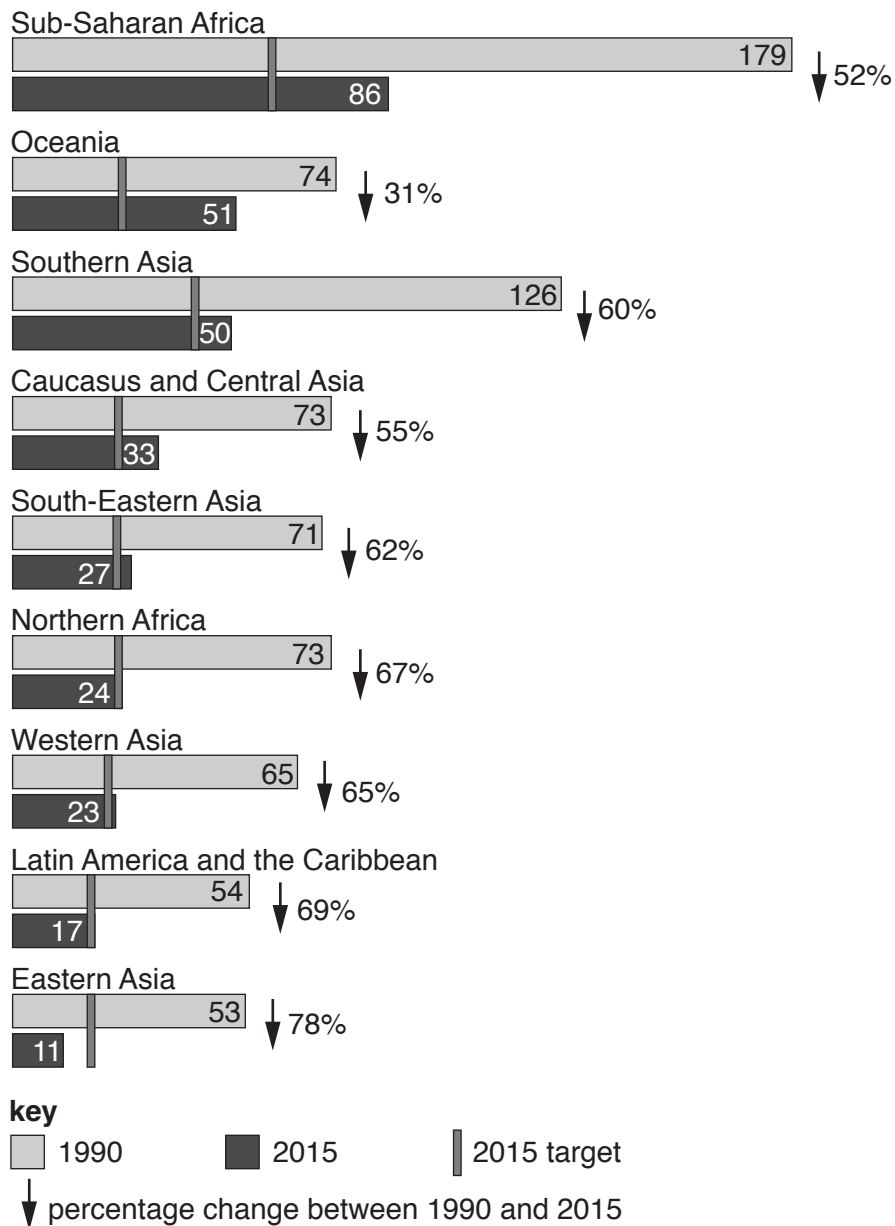


Fig. 2.1

- (i) Millennium Development Goal 4 was to 'reduce child mortality'.

Explain what is meant by the term 'child mortality'.

.....
[1]

(ii) Identify the part of the world which had:

the highest level of child mortality in both 1990 and 2015;

.....

a decrease in child mortality of 49 per 1000 live births, from 1990 to 2015.

..... [2]

(iii) The target was to reduce child mortality by two thirds between 1990 and 2015.

Identify **two** parts of the world which met the 2015 target.

1

2 [2]

Question 3 begins on the next page.

- 3 (a) Study Fig. 3.1, which shows information about a research investigation conducted in Ondo State, Nigeria, a developing country in Sub-Saharan Africa.

The researchers wanted to find out why infant mortality was high in the area. A questionnaire was written and it was given to 20 mothers in a pilot study, who were asked to return it to the researchers when they had completed it.

In the main study a sample of 210 mothers of babies who were less than one year old was used. The researchers decided that they would complete the questionnaire face-to-face with the mothers, rather than leaving it for them to complete as they had done in the pilot study.

Fig. 3.1

- (i) What was the aim of the research described in Fig. 3.1?

.....
.....[1]

- (ii) Suggest **two** reasons why these researchers conducted a pilot study.

1
.....
2
.....[2]

- (iii) Suggest reasons why the researchers decided to complete the questionnaire face-to-face with the mothers, rather than leaving it for them to complete and return.

.....
.....
.....
.....
.....
.....
.....
.....
.....
.....[4]

- (iv) The 210 people who were selected to complete the questionnaire could have been selected using a random sample, a systematic sample or a stratified sample.

Which type of sample do you think would have been best? Justify your choice.

Type of sample

Justification

.....

.....

.....[2]

- (v) State **one** other source of primary data and **one** source of secondary data which the researchers could have used in this study.

Primary

.....

Secondary

.....[2]

- (vi) Give **two** reasons why secondary data is **not** always reliable.

1

.....

2

.....[2]

(b) Study Fig. 3.2, which is a question taken from the survey conducted in Ondo State, Nigeria.

For each of the following do you think this is a cause of babies dying in their first year?

| Cause of babies dying in their first year | Agree | Disagree | Do not know |
|---|-------|----------|-------------|
| • frequent pregnancy | | | |
| • age of the mother | | | |
| • poor nutrition | | | |
| • poverty | | | |
| • lack of medical care | | | |

Fig. 3.2

Fig. 3.3 shows the results of the answers from the 210 mothers.

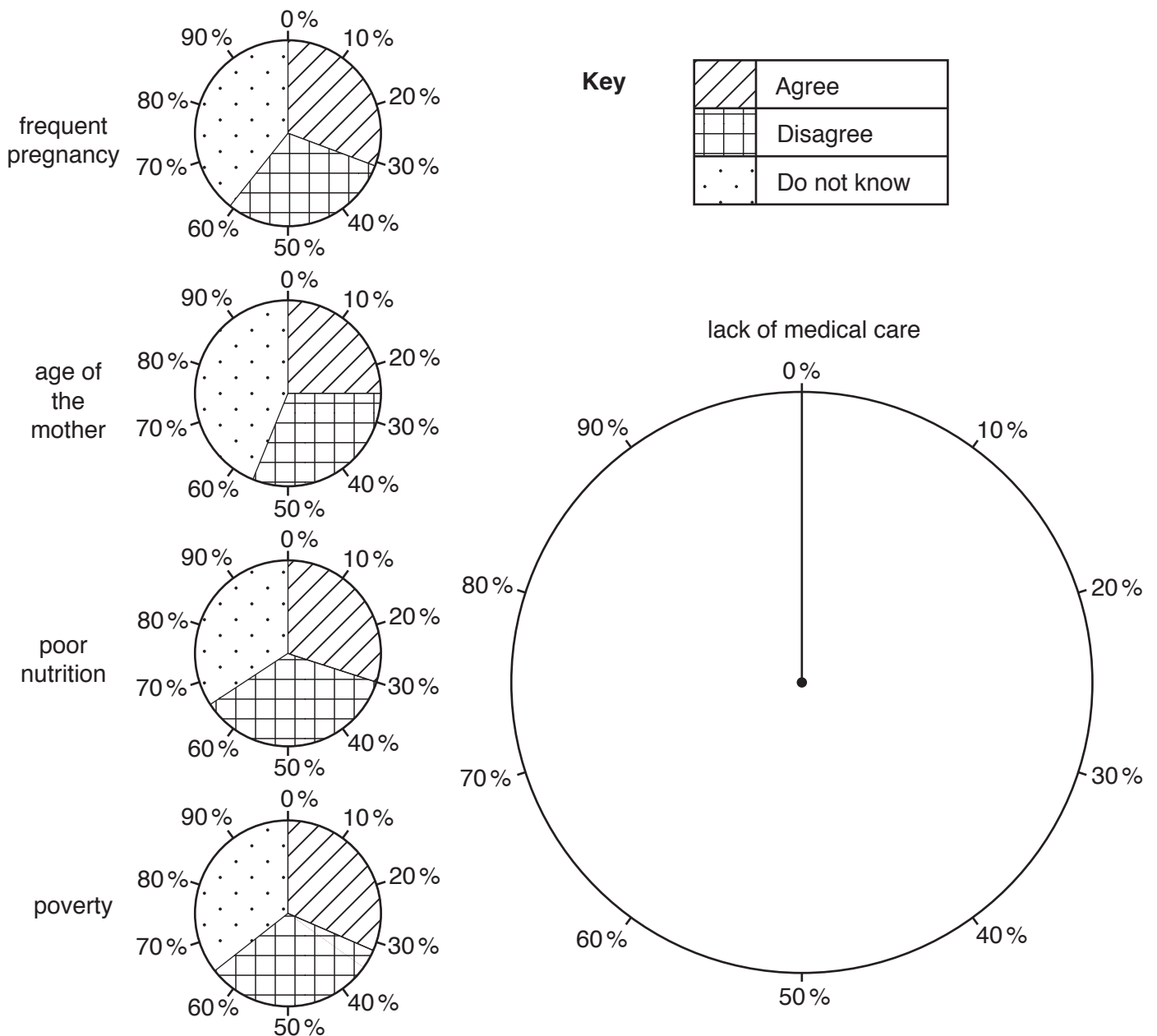


Fig. 3.3

- 4 (a) Study Fig. 4.1, which shows some of the Sustainable Development Goals. These replaced the Millennium Development Goals in 2015.



Sustainable Development Goals



Fig. 4.1

- (i) What is meant by the term ‘sustainable development’?

.....
[1]

- (ii) Identify the Sustainable Development Goal for which infant mortality and child mortality rates would be the **best** indicators.

Tick **one** goal in Table 4.2 below.

Table 4.2

| Sustainable Development Goal | Tick (✓) |
|--|----------|
| Achieve gender equality and empower all women and girls | |
| Conserve and sustainably use the oceans, seas and marine resources for sustainable development | |
| Ensure healthy lives and promote wellbeing for all at all ages | |
| Reduce inequality within and among communities | |

[1]

