

Surname _____

Other Names _____

Centre Number _____

Candidate Number _____

Candidate Signature _____

**A-level
BIOLOGY**

Paper 1

7402/1

Thursday 7 June 2018 Morning

Time allowed: 2 hours

At the top of the page, write your surname and other names, your centre number, your candidate number and add your signature.

[Turn over]

For this paper you must have:

- **a ruler with millimetre measurements**
- **a scientific calculator.**

INSTRUCTIONS

- **Use black ink or black ball-point pen.**
- **Answer ALL questions.**
- **You must answer the questions in the space provided. Do not write on blank pages.**
- **Show all your working.**
- **Do all rough work in this book. Cross through any work you do not want to be marked.**



INFORMATION

- **The marks for the questions are shown in brackets.**
- **The maximum mark for this paper is 91.**

**DO NOT TURN OVER UNTIL TOLD TO
DO SO**



Answer ALL questions in the spaces provided.

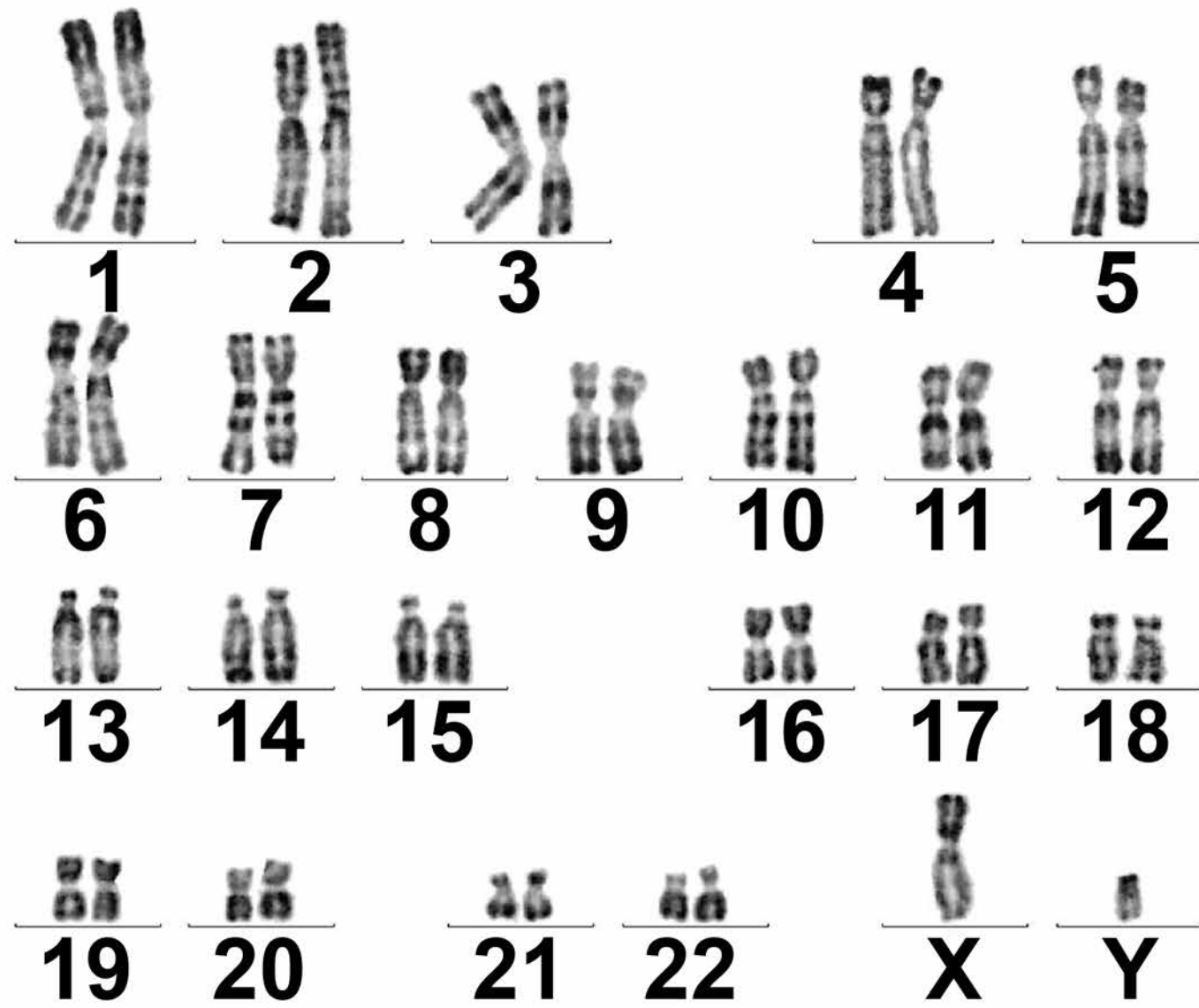
0 1

FIGURE 1 below, shows all the chromosomes present in one human cell during mitosis. A scientist stained and photographed the chromosomes. In FIGURE 2, on page 5, the scientist has arranged the images of these chromosomes in homologous pairs.

FIGURE 1



FIGURE 2



[Turn over]

BLANK PAGE



01.1

Give TWO pieces of evidence from FIGURE 1, on page 4, that this cell was undergoing mitosis. Explain your answers. [2 marks]

1. _____

2. _____

[Turn over]



0 1 . 2 Tick (✓) ONE box that gives the name of the stage of mitosis shown in FIGURE 1 on page 4. [1 mark]

Anaphase

Interphase

Prophase

Telophase

0 1 . 3 When preparing the cells for observation the scientist placed them in a solution that had a slightly higher (less negative) water potential than the cytoplasm. This did not cause the cells to burst but moved the chromosomes further apart in order to reduce the overlapping of the chromosomes when observed with an optical microscope.



BLANK PAGE



0 1 . 4 The dark stain used on the chromosomes binds more to some areas of the chromosomes than others, giving the chromosomes a striped appearance.

Suggest ONE way the structure of the chromosome could differ along its length to result in the stain binding more in some areas. [1 mark]

[Turn over]



0 1 . 5 In FIGURE 2, on page 5, the chromosomes are arranged in homologous pairs. What is a homologous pair of chromosomes? [1 mark]

01.6

**Give TWO ways in which the arrangement of prokaryotic DNA is different from the arrangement of the human DNA in FIGURE 1 on page 4.
[2 marks]**

1. _____

2. _____

[Turn over]

9



A student investigated the effect of surface area on osmosis in cubes of potato.

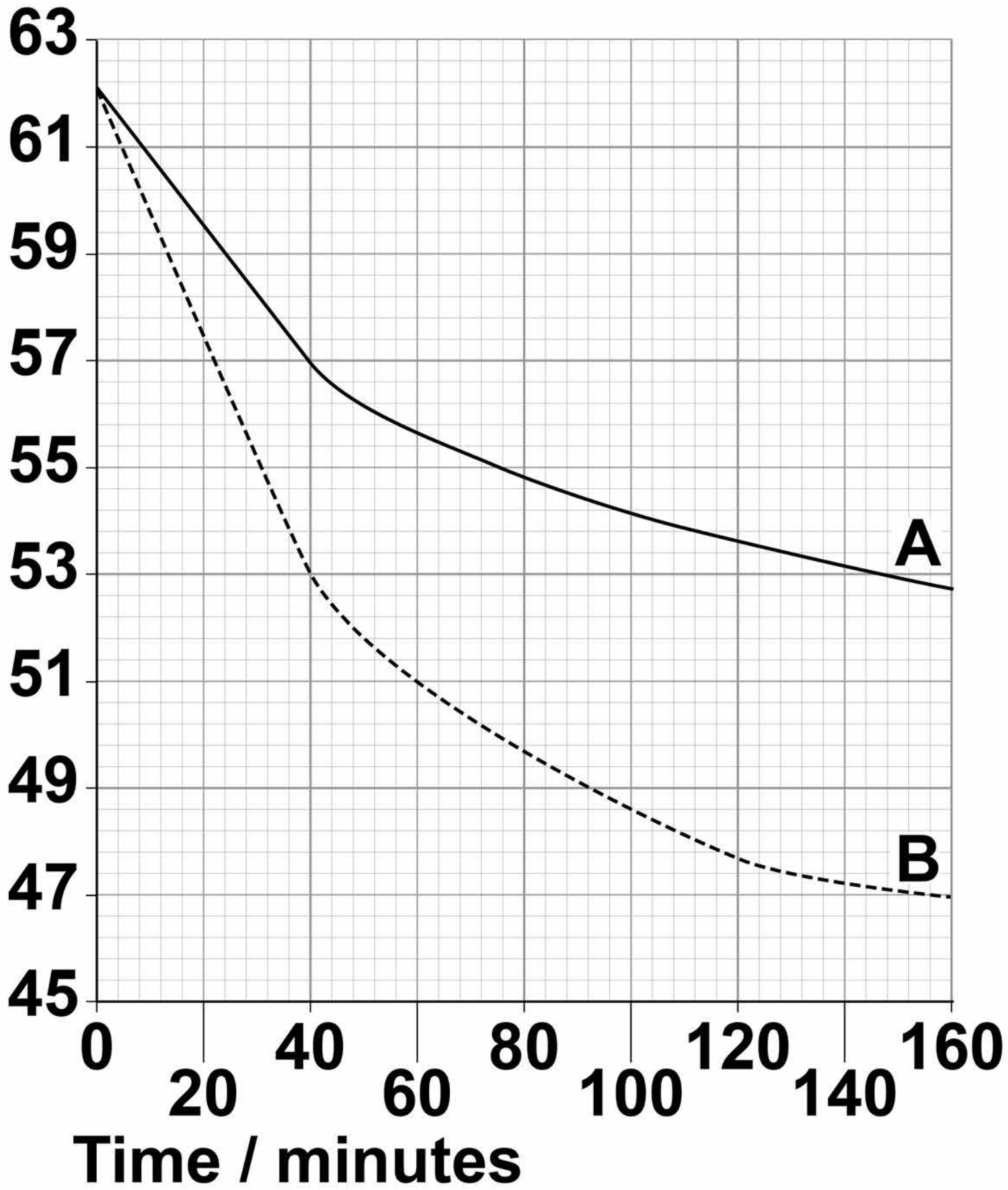
- **He cut two cubes of potato tissue, each with sides of 35 mm in length.**
- **He put one cube into a concentrated sucrose solution.**
- **He cut the other cube into eight equal-sized smaller cubes and put them into a sucrose solution of the same concentration as the solution used for the large cube.**
- **He recorded the masses of the cubes at intervals.**

His results are shown in FIGURE 3 on page 15.



FIGURE 3

Total
mass / g



KEY

— 1 large cube - - - - 8 small cubes

[Turn over]



0 2 . 2

The loss in mass shown in FIGURE 3, on page 15, is due to osmosis. The rate of osmosis between 0 and 40 minutes is faster in B (the eight small cubes) than in A (single large cube).

Is the rate of osmosis per mm² per minute different between A and B during this time?

Use appropriate calculations to support your answer. [3 marks]

0	3
---	---

Bees are flying insects that feed on nectar made in flowers. There are many different species of bee.

Scientists investigated how biodiversity of bees varied in three different habitats during a year. They collected bees from eight sites of each habitat four times per year for three years.

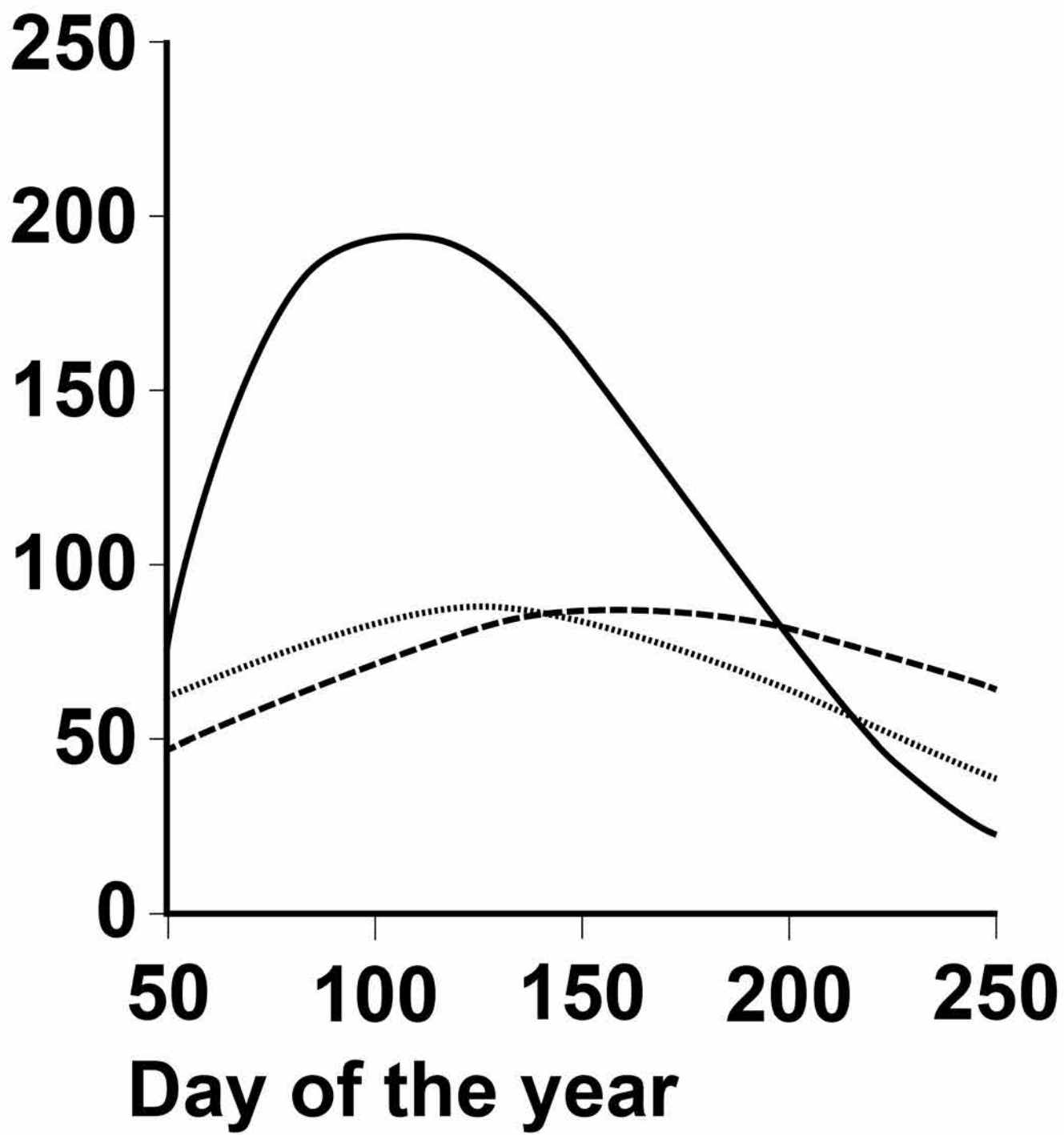
The scientists' results are shown in FIGURE 4 on pages 22 and 23, in the form they presented them.



BLANK PAGE

[Turn over]

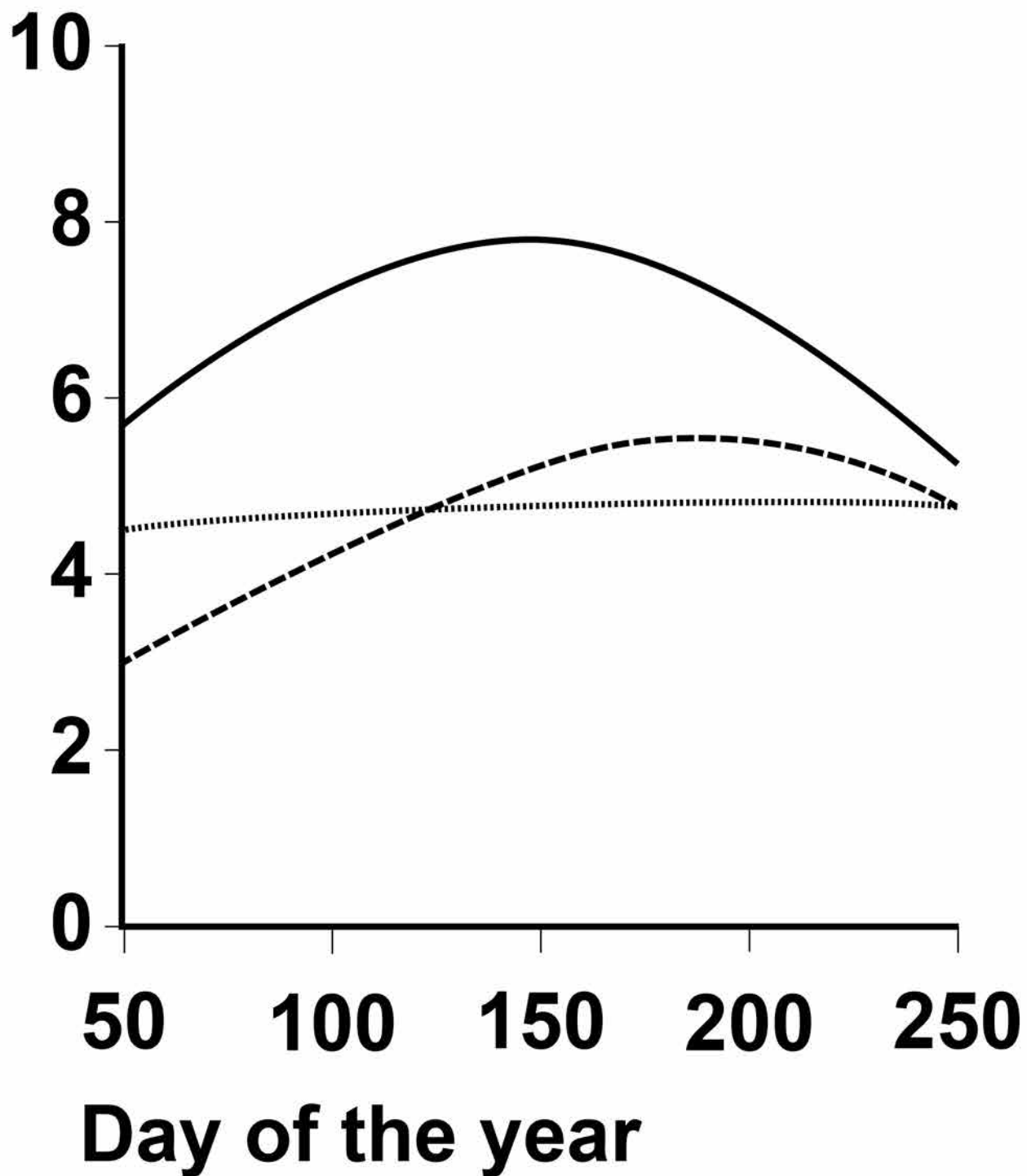


FIGURE 4**Mean number
of bees collected****KEY TO HABITATS**

- Natural
- Town
- - - Farmland



Mean bee species richness



KEY TO HABITATS

- Natural
- Town
- - - - Farmland

[Turn over]



BLANK PAGE



03.2 From the data in FIGURE 4, a student made the following conclusions.

- 1. The natural habitat is most favourable for bees.**
- 2. The town is the least favourable for bees.**

Do the data in FIGURE 4, on pages 22 and 23, support these conclusions? Explain your answer. [4 marks]

- 1. The natural habitat is most favourable for bees.**

2. The town is the least favourable for bees.



[Turn over]

03.3

The scientists collected bees using a method that was ethical and allowed them to identify accurately the species to which each belonged.

In each case, suggest ONE consideration the scientists had taken into account to make sure their method [2 marks]

1. was ethical. _____
- _____
- _____
- _____
- _____
- _____
- _____
- _____
- _____
- _____
- _____

0 3 . 4 Suggest and explain TWO ways in which the scientists could have improved the method used for data collection in this investigation. [2 marks]

1. _____

03.5 Three of the bee species collected in the farmland areas were *Peponapis pruinosa*, *Andrena chlorogaster* and *Andrena piperi*.

What do these names suggest about the evolutionary relationships between these bee species? Explain your answer. [2 marks]

BLANK PAGE

[Turn over]



04.2 A scientist measured the rate of removal of amino acids from a polypeptide with and without an enzyme present. With the enzyme present, 578 amino acids were released per second. Without the enzyme, 3.0×10^{-9} amino acids were released per second.

37

Calculate by how many times the rate of reaction is greater with the enzyme present. Give your answer in standard form. [2 marks]

Answer =

_____ times faster

[Turn over]



Another scientist investigated an enzyme that catalyses the following reaction.



The scientists set up two experiments, C and L.

Experiment C used

- **the enzyme**
- **different concentrations of ATP.**

Experiment L used

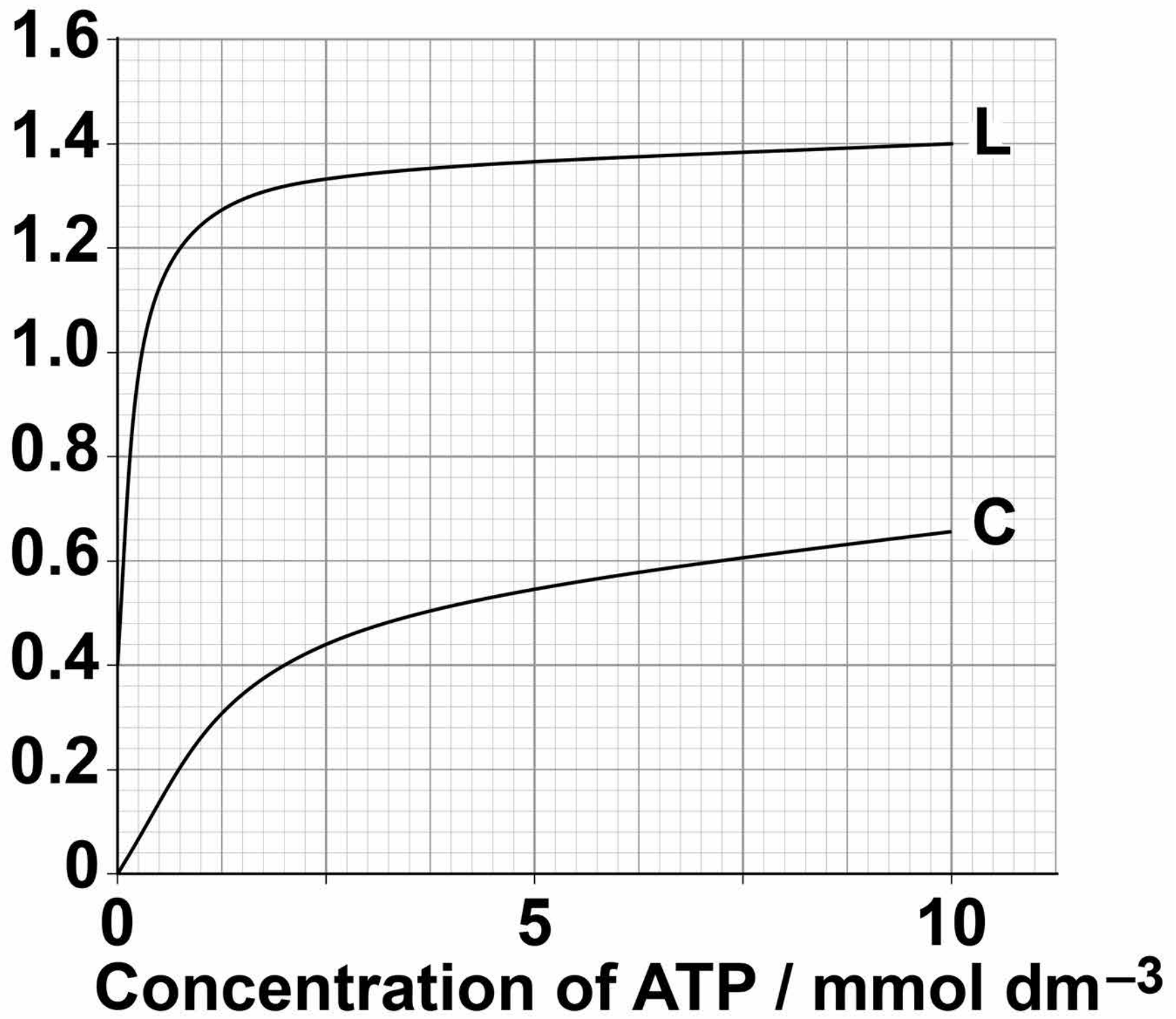
- **the enzyme**
- **different concentrations of ATP**
- **a sugar called lyxose.**

The scientists measured the rate of reaction in each experiment. Their results are shown in FIGURE 5 on page 39.



FIGURE 5

Rate of reaction /
units of $\text{P}_i \text{ min}^{-1}$



[Turn over]



BLANK PAGE



0 4 . 3 Calculate the rate of reaction of the enzyme activity with no lyxose at 2.5 mmol dm^{-3} of ATP as a percentage of the maximum rate shown with lyxose. [2 marks]

Answer = _____ %

[Turn over]



BLANK PAGE



0 5 . 1 Draw the general structure of an amino acid. [1 mark]

[Turn over]



TABLE 1

1st base	2nd base				3rd base
	U	C	A	G	
U	Phe	Ser	Tyr	Cys	U
					C
	Leu		Stop	Stop	A
				Trp	G
C	Leu	Pro	His	Arg	U
			C		
			Gln		A
					G
A	Ile	Thr	Asn	Ser	U
					C
	Met		Lys	Arg	A
					G
G	Val	Ala	Asp	Gly	U
			C		
			Glu		A
					G



KEY to the properties of the R group of each amino acid

 **No overall charge**

 **Positively charged**

 **Negatively charged
(Asp and Glu only)**

TABLE 1 shows mRNA codons and the amino acids coded for by each codon. It also shows some properties of the R group of each amino acid.

[Turn over]



BLANK PAGE



A scientist investigated changes in the amino acid sequence of a human enzyme resulting from mutations. All these amino acid changes result from single base substitution mutations. This enzyme is a polypeptide 465 amino acids long.

TABLE 2 shows the result of three of the base substitutions.

TABLE 2

Amino acid number	Correct amino acid	Amino acid inserted as a result of mutation
203	Val	Ala
279	Glu	Lys
300	Glu	Lys

0 5 . 3 What is the minimum number of bases in the gene coding for this polypeptide? [1 mark]

Answer = _____

[Turn over]



BLANK PAGE



0 5 . 4 Use information from TABLE 1, on page 46, to tick (✓) ONE box that shows a single base substitution mutation in DNA that would result in a change from VAL to ALA at amino acid number 203 [1 mark]

CAA → CGA

GUU → GCA

GUU → GUC

CAC → CGG

[Turn over]



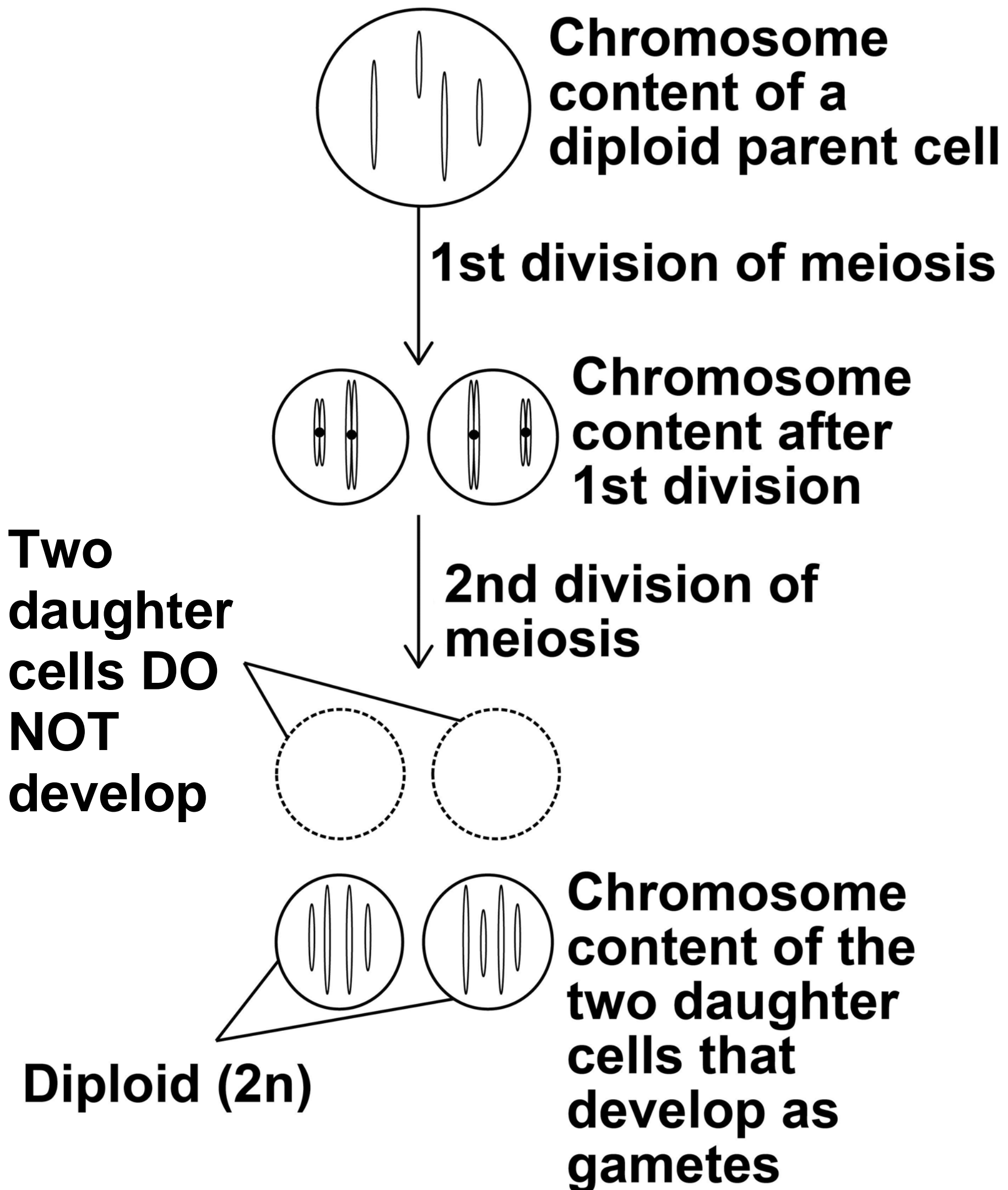
0 5 . 5 A change from Glu to Lys at amino acid 300 had no effect on the rate of reaction catalysed by the enzyme. The same change at amino acid 279 significantly reduced the rate of reaction catalysed by the enzyme.

**Use all the information and your knowledge of protein structure to suggest reasons for the differences between the effects of these two changes.
[3 marks]**

06

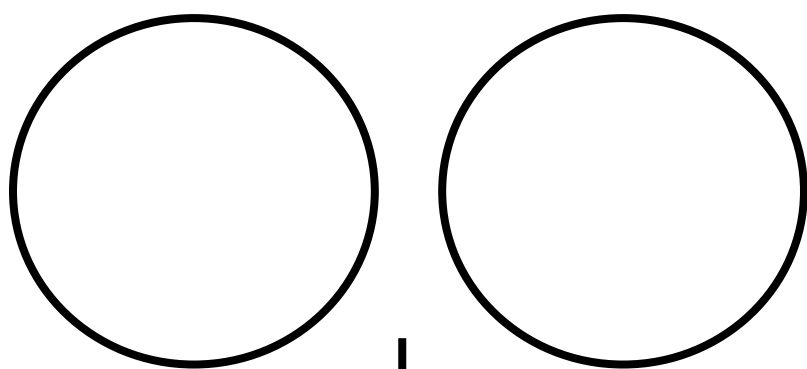
FIGURE 6 shows a faulty form of meiosis that can occur in some plants.

FIGURE 6



06.1 Complete FIGURE 7 to show the chromosome content of the cells that would result from a normal meiotic division of the diploid parent cell shown in FIGURE 6, on page 56.
[2 marks]

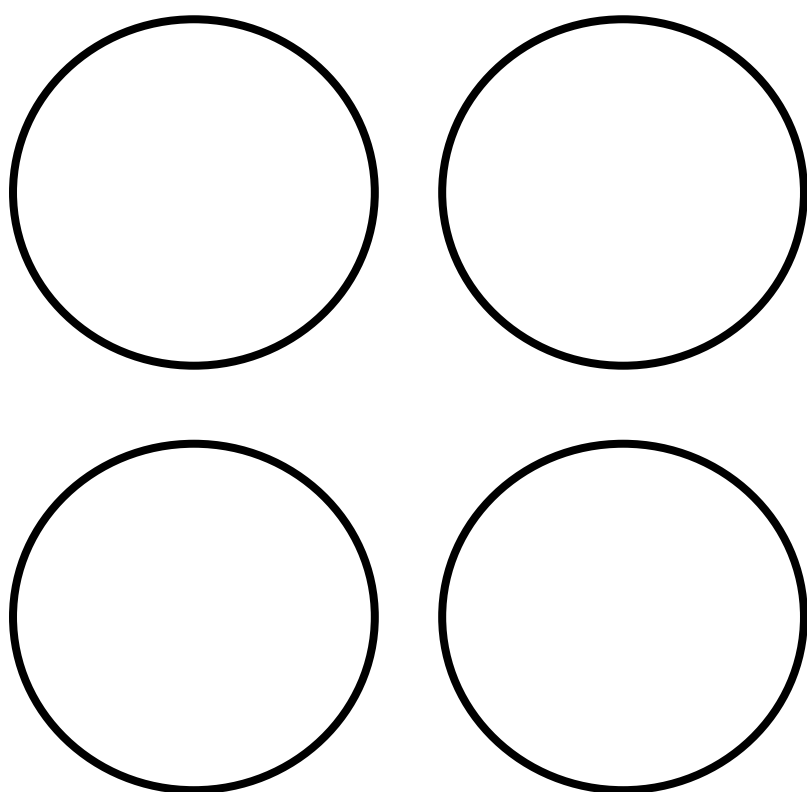
FIGURE 7



**Chromosome
content after 1st
division of meiosis**



2nd division of meiosis



**Chromosome
content of the four
daughter cells**

[Turn over]



06.2 If two diploid ($2n$) gametes fuse at fertilisation, it can result in the growth of a tetraploid plant which has 4 copies of each chromosome.

Red clover is a plant grown to produce cattle feed. Tetraploid red clover plants produce a higher yield than diploid red clover plants.

Whether a red clover plant produces $2n$ gametes is genetically controlled.

Scientists investigated the possibility of breeding red clover plants that only produced $2n$ gametes.

- In breeding cycle 0, they grew red clover plants and identified plants that produced $2n$ gametes.
- In breeding cycle 1, they used the plants producing $2n$ gametes to produce offspring.
- In breeding cycles 2 and 3, they identified plants producing $2n$ gametes and used these to produce offspring.

[Turn over]

Their results are shown in TABLE 3.

TABLE 3

	OBSERVED		EXPECTED	
Breeding cycle	Number of plants that DID NOT produce 2n gametes	Number of plants that DID produce 2n gametes	Number of plants that DID NOT produce 2n gametes	Number of plants that DID produce 2n gametes
0	50	4	50	4
1	14	42	_____	_____
2	2	44		
3	0	56		



The scientists used the following null hypothesis.

‘The proportion of plants that produce $2n$ gametes will not change from one breeding cycle to the next.’

Complete TABLE 3 to show the EXPECTED NUMBER of plants that DID NOT produce $2n$ gametes and the expected number of plants that DID produce $2n$ gametes after 1 cycle.

Give each answer to the nearest whole number. [2 marks]

91

[Turn over]



06.3

The scientists tested their null hypothesis using the chi-squared statistical test.

After 1 cycle their calculated chi-squared value was 350

The critical value at $P=0.05$ is 3.841

**What does this result suggest about the difference between the observed and expected results and what can the scientists therefore conclude?
[2 marks]**

[Turn over]

06.4

Use your knowledge of directional selection to explain the results shown in TABLE 3 on page 60. [3 marks]

[Turn over]

9

07.1

When a person is bitten by a venomous snake, the snake injects a toxin into the person. Antivenom is injected as treatment. Antivenom contains antibodies against the snake toxin. This treatment is an example of passive immunity.

Explain how the treatment with antivenom works and why it is essential to use passive immunity, rather than active immunity. [2 marks]

FIGURE 8 shows a procedure used to produce antivenom.

FIGURE 8

Capture of snakes of one species



Collection of venom



Preparation of venom mixtures



Preparation of venoms for use as vaccine

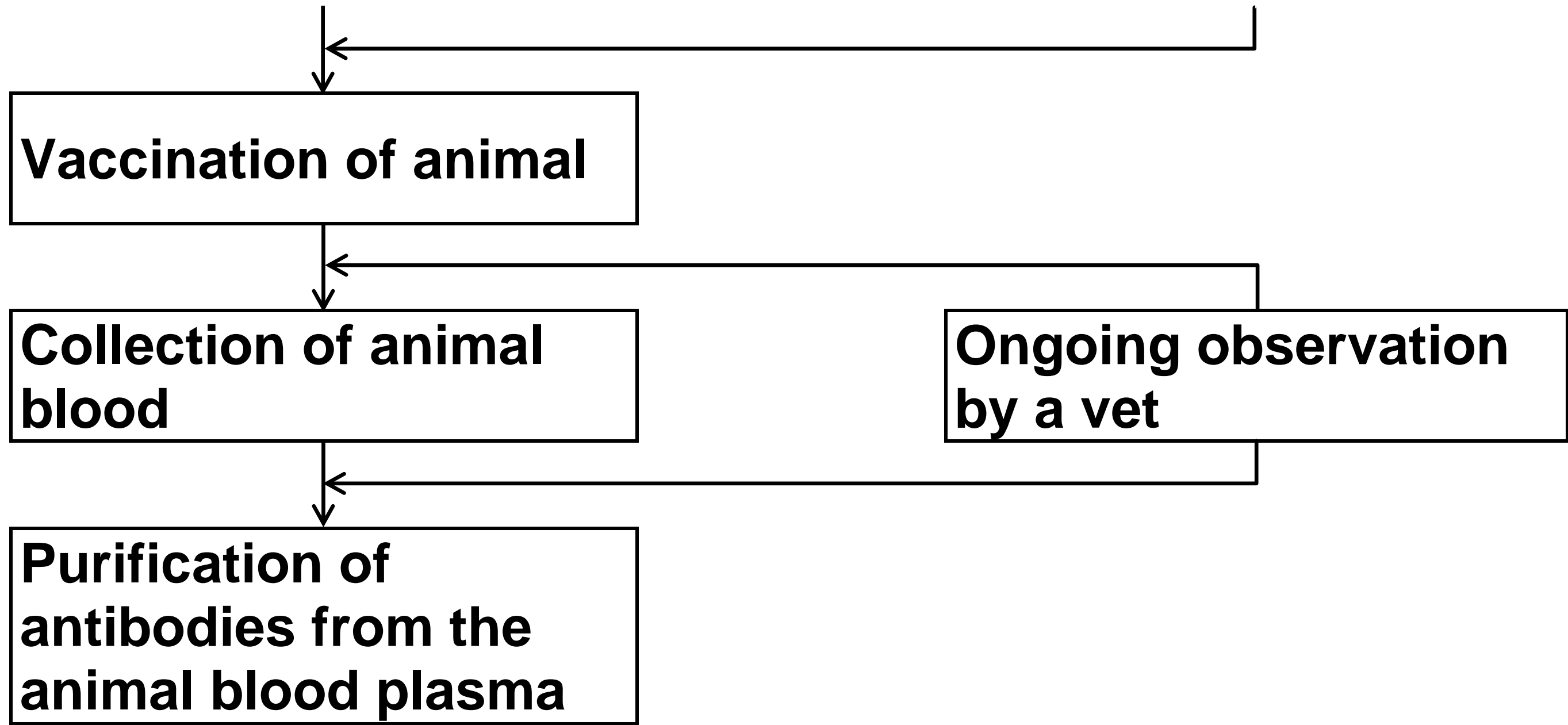


Selection of animals



Quarantine and observation by a vet





[Turn over]



BLANK PAGE



07.3

Horses or rabbits can be used to produce antivenoms.

When taking blood to extract antibody, 13 cm³ of blood is collected per kg of the animal's body mass.

The mean mass of the horses used is 350 kg and the mean mass of the rabbits used is 2 kg

Using only this information, suggest which animal would be better for the production of antivenoms.

Use a calculation to support your answer. [2 marks]

[Turn over]

BLANK PAGE

[Turn over]



Scientists investigated the effect of a heat treatment on mass transport in barley plants.

- **They applied steam to one short section of a leaf of the heat-treated plants. This area is shown by the arrows in FIGURE 9 on page 80.**
- **They did not apply steam to the leaves of control plants.**
- **They then supplied carbon dioxide containing radioactively-labelled carbon to each plant in the area shown by the rectangular boxes in FIGURE 9 on pages 80 and 81.**
- **After 4 hours, they:**
 - **found the position of the radioactively-labelled carbon in each plant. These results are shown in FIGURE 9 on pages 80 and 81.**

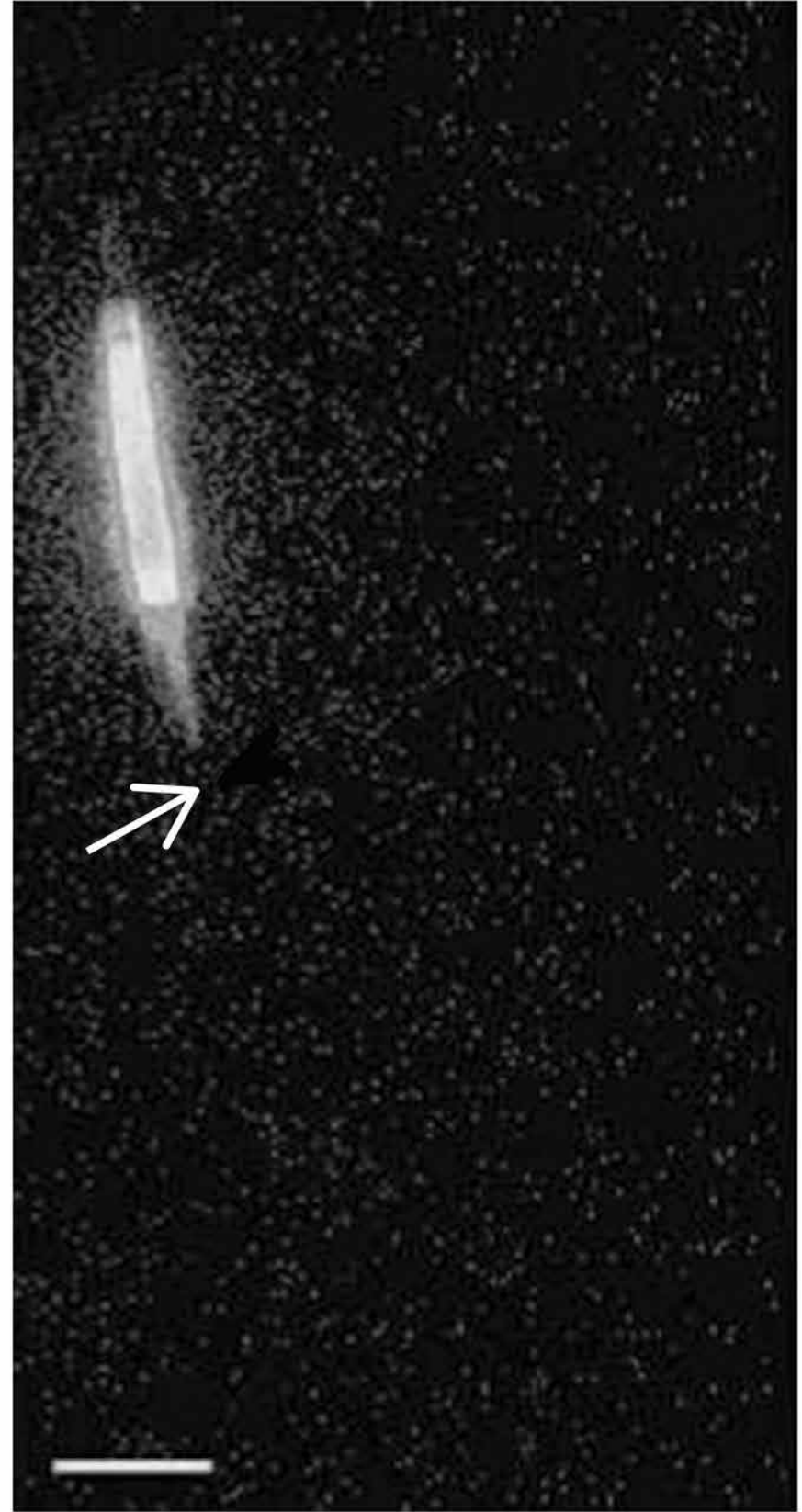
- recorded the water content of the parts of the leaf that were supplied with radioactively-labelled carbon dioxide. These results are shown in **TABLE 4** below.

TABLE 4

Plant from which the leaf was taken	Water content of leaf / % of maximum (\pm 2 standard deviations)
Heat-treated Plant A	84.6 (\pm11.3)
Control Plant, not heat treated B	92.8 (\pm8.6)

[Turn over]

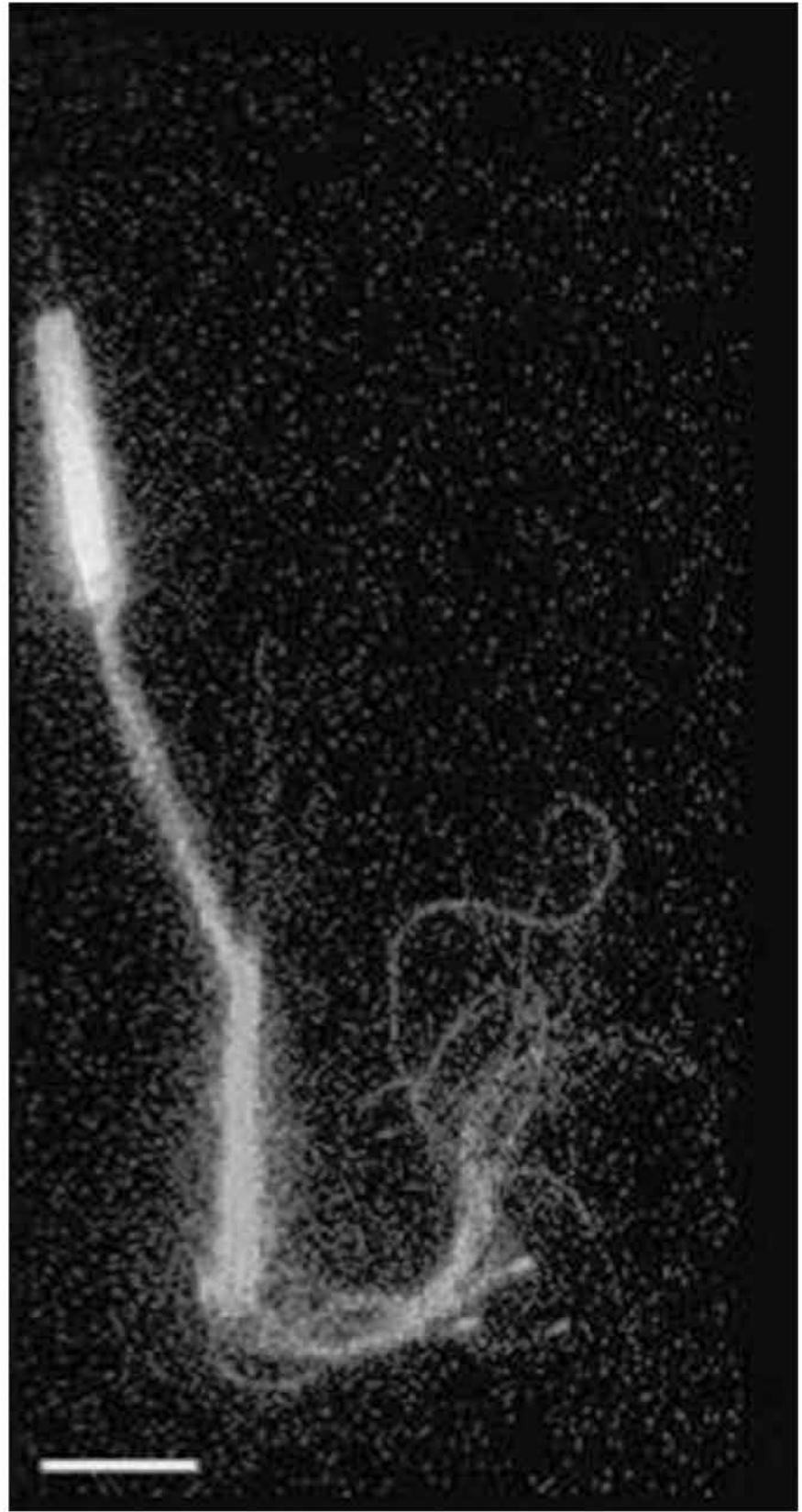


FIGURE 9**A – Heat-treated Plant****0 hours****4 hours**

B – Control Plant, not heat treated



0 hours



4 hours

[Turn over]

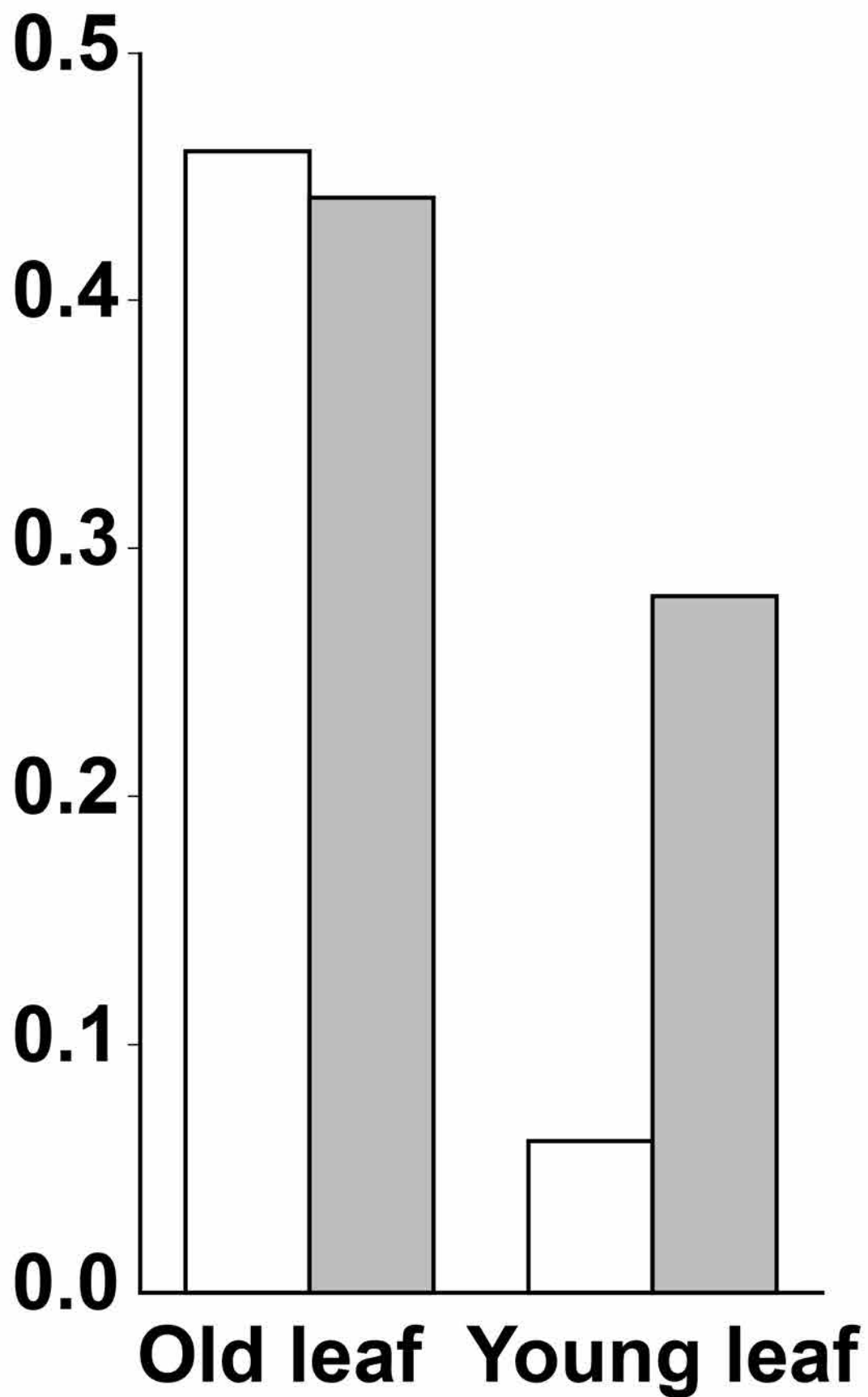
08.3 The scientists then investigated the movement of iron ions (Fe^{3+}) from the soil to old and young leaves of heat-treated barley plants and to leaves of plants that were not heat treated. Heat treatment was applied half way up the leaves. The scientists determined the concentration of Fe^{3+} in the top and lower halves of the leaves of each plant.

Their results are shown in **FIGURE 10**, on page 85.



FIGURE 10

Ratio of Fe^{3+} concentration in top half of leaf to concentration in lower half of leaf

**KEY**

 Heat treatment half way up the leaf

 Untreated

[Turn over]



BLANK PAGE



[Turn over]

8



0 9 . 1 Describe the role of **TWO** named enzymes in the process of semi-conservative replication of DNA. [3 marks]



[Turn over]



09.2

Scientists investigated the function of a eukaryotic cell protein called cyclin A. This protein is thought to be involved with the binding of one of the enzymes required at the start of DNA replication.

The scientists treated cultures of cells in the following ways.

C – Control cells, untreated

D – Added antibody that binds specifically to cyclin A

E – Added RNA that prevents translation of cyclin A

F – Added RNA that prevents translation of cyclin A AND added cyclin A protein

They then determined the percentage of cells in each culture in which DNA was replicating.



Their results are shown in TABLE 5.

TABLE 5

Cell treatment	Percentage of cells where DNA was replicating
C Control	91
D Antibody that binds specifically to cyclin A	11
E RNA that prevents translation of cyclin A	10
F RNA that prevents translation of cyclin A AND added cyclin A protein	92

[Turn over]



BLANK PAGE



Suggest explanations for the results in TABLE 5. [3 marks]

[Turn over]



100



END OF QUESTIONS

15

There are no questions printed on this page



There are no questions printed on this page

For Examiner's Use	
Question	Mark
1	
2	
3	
4	
5	
6	
7	
8	
9	
10	
TOTAL	

Copyright information

For confidentiality purposes, from the November 2015 examination series, acknowledgements of third party copyright material will be published in a separate booklet rather than including them on the examination paper or support materials. This booklet is published after each examination series and is available for free download from www.aqa.org.uk after the live examination series.

Permission to reproduce all copyright material has been applied for. In some cases, efforts to contact copyright-holders may have been unsuccessful and AQA will be happy to rectify any omissions of acknowledgements. If you have any queries please contact the Copyright Team, AQA, Stag Hill House, Guildford, GU2 7XJ.

Copyright © 2018 AQA and its licensors. All rights reserved.

IB/M/Jun18/AMAS/7402/1/E5

