

Please write clearly in block capitals.

Centre number

Candidate number

Surname _____

Forename(s) _____

Candidate signature _____

A-level BIOLOGY

Paper 2

Monday 11 June 2018

Afternoon

Time allowed: 2 hours

Materials

For this paper you must have:

- a ruler with millimetre measurements
- a scientific calculator.

Instructions

- Use black ink or black ball-point pen.
- Fill in the boxes at the top of this page.
- Answer **all** questions.
- You must answer the questions in the space provided. Do not write outside the box around each page or on blank pages.
- Show all your working.
- Do all rough work in this book. Cross through any work you do not want to be marked.

Information

- The marks for the questions are shown in brackets.
- The maximum mark for this paper is 91.

For Examiner's Use	
Question	Mark
1	
2	
3	
4	
5	
6	
7	
8	
9	
10	
TOTAL	



Answer **all** questions in the spaces provided.

0 1

Heat stress is a condition that often occurs in plants exposed to high temperatures for a prolonged period of time. Heat stress is a major factor in limiting the rate of photosynthesis.

0 1 . 1

Heat stress decreases the light-dependent reaction of photosynthesis.

Explain why this leads to a decrease in the **light-independent reaction**.

[2 marks]

0 1 . 2

Another effect of heat stress is a decrease in the activity of the enzyme rubisco. A decrease in the activity of an enzyme means that the rate of the reaction it catalyses becomes slower.

A decrease in the activity of the enzyme rubisco would limit the rate of photosynthesis.

Explain why.

[2 marks]

0 1 . 3

Where precisely is rubisco found in a cell?

[1 mark]



0 2 . 3 A type of malignant tumour cell divides every 8 hours.

Starting with one of these cells, how many tumour cells will be present after 4 weeks?
Assume none of these cells will die.

Give your answer in standard form.

[2 marks]

Answer = _____

6

Turn over for the next question

Turn over ►



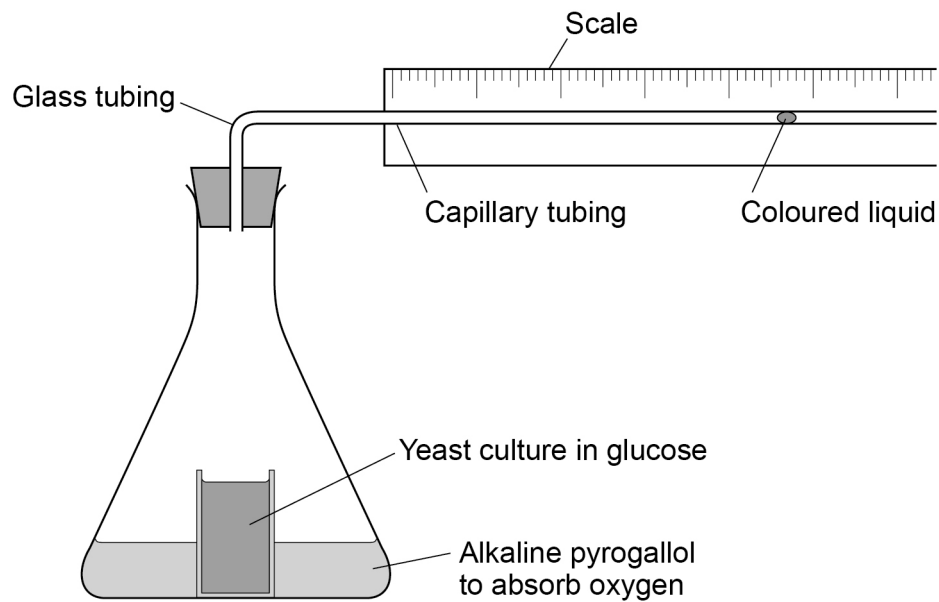
0 3

Yeast cells can respire aerobically or anaerobically. A student used the apparatus shown in **Figure 3** to measure the rate of respiration in yeast.

She:

- positioned the flask in a water bath so that the yeast culture reached a constant temperature
- then left the apparatus for one hour before starting her investigation.

Figure 3



0 3 . 1

Suggest **one** reason why it was important that the student left the apparatus for one hour after the yeast culture reached a constant temperature.

[1 mark]



0 3 . 2 During her investigation, the coloured liquid moved to the right.

Explain why it moved to the right.

[2 marks]

0 3 . 3 The student found that the coloured liquid moved 1.5 cm in 24 hours. The diameter of the lumen (hole) of the capillary tubing was 1 mm.

The volume of a capillary tubing is given by $\pi r^2 l$, where π is 3.14 and l = length.

Calculate the volume of gas produced in $\text{cm}^3 \text{ hour}^{-1}$.
Show your working.

[2 marks]

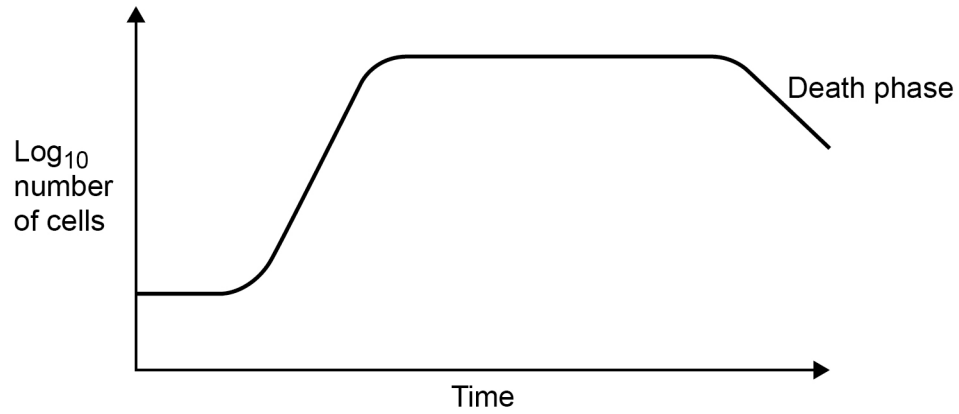
Answer = _____ $\text{cm}^3 \text{ hour}^{-1}$

Turn over ►



Figure 4 shows a typical population growth curve for yeast under laboratory conditions.

Figure 4



0 3 . 4 Explain why a log scale is used to record the number of cells.

[1 mark]

0 3 . 5 Many yeast cells die during the death phase.

Suggest **one** reason why.

[1 mark]



0 3 . 6

The following equation can be used to make predictions of the growth in the population of yeast cells under ideal laboratory conditions.

$$X_t = X_0 e^{rt}$$

X_t = the population after a certain time

X_0 = the population at the start

$e = 2.72$ (base of natural logarithm)

r = growth rate

t = time period in hours over which r applies

A population of 2000 yeast cells was left for 10 hours.

The value for the growth rate was 0.5

Assuming no yeast cells died, calculate the predicted size of the population after 10 hours. Show your working.

[2 marks]

Answer = _____

9

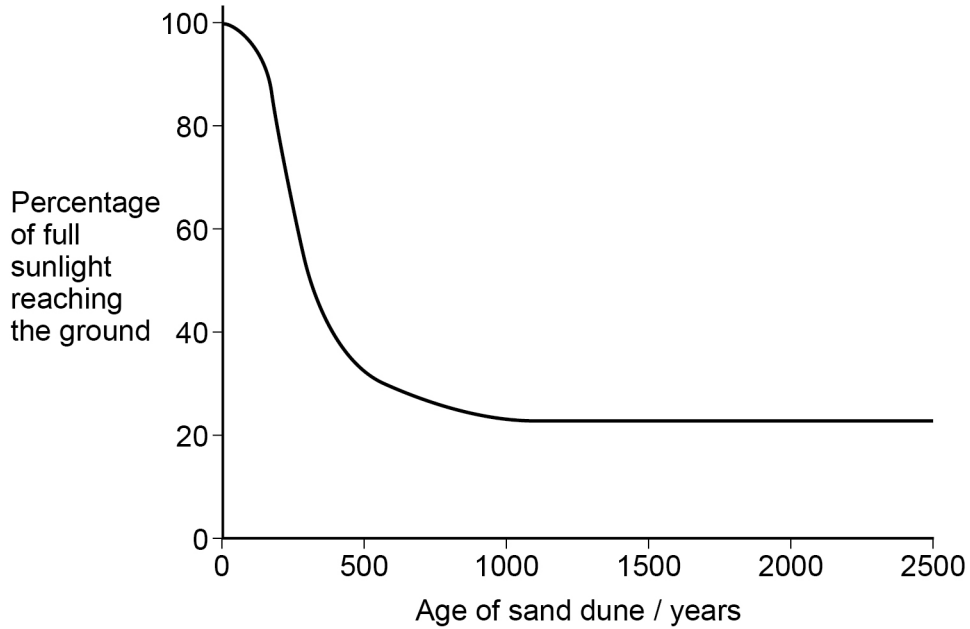
Turn over for the next question

Turn over ►



The scientists also investigated how the proportion of sunlight reaching the ground changed during succession. Some of the results the scientists obtained are shown in **Figure 6**.

Figure 6



0 4 . 3 Use **Figure 5** to explain the results in **Figure 6**.

[1 mark]

0 4 . 4 Using evidence from **Figure 6**, what can you conclude about the net primary productivity (NPP) in the sand dunes that are older than 1000 years?

Explain your answer.

[2 marks]



There are no questions printed on this page

Turn over for the next question

*Do not write
outside the
box*

**DO NOT WRITE ON THIS PAGE
ANSWER IN THE SPACES PROVIDED**

Turn over ►



0 5

Furosemide and CVT are drugs used to remove excess fluid from the body. Scientists investigated the effect of these drugs on the volume of urine produced by human volunteers. The scientists used the following method.

- They divided volunteers into three groups, **A**, **B** and **C** at random.
- They gave all the volunteers the same food for 3 days.
- After 3 days, they gave the volunteers in group **A** a tablet containing furosemide, the volunteers in group **B** a tablet containing CVT and the volunteers in group **C** a placebo (a tablet that did **not** contain either drug).
- They then found the mean volume of urine produced by each group in the 4 hours after taking the tablets.

Some of the results the scientists obtained are shown in **Table 1**.
A value of ± 2 standard deviations from the mean includes over 95% of the data.

Table 1

Group	Mean volume of urine produced in 4 hours / cm ³ (± 2 standard deviations)
A (furosemide)	1980 (± 152)
B (CVT)	1201 (± 119)
C (placebo)	312 (± 57)

0 5 . 1

All the volunteers were given the same food for 3 days.

Suggest and explain **one** reason why they were given the same food.

[2 marks]



0 5 . 2

Using **Table 1**, what can you conclude about the effectiveness of furosemide and CVT in the removal of excess fluid from the body?

[2 marks]

0 5 . 3

Furosemide is sometimes used to treat high blood pressure.

Suggest how furosemide would cause a decrease in blood pressure.

[1 mark]

0 5 . 4

Furosemide inhibits the absorption of sodium and chloride ions from the filtrate produced in the nephrons.

Explain how furosemide causes an increase in the volume of urine produced.

[3 marks]

Turn over ►



The scientists also measured the mean rate of flow of blood plasma into the kidneys.

The results the scientists obtained are shown in **Table 2**.

Table 2

Group	Mean rate of flow of blood plasma into the kidneys / cm³ min⁻¹
A (furosemide)	380
B (CVT)	342
C (placebo)	295

0 5 . 5

The mean rate of flow of blood plasma is 60% of the mean rate of blood flow into the kidneys.

How much greater is the flow of blood into the kidneys with furosemide than with group **C** (placebo) over the 4 hours of the investigation? Give your answer in cm³.

[1 mark]

Answer = _____ cm³

9



There are no questions printed on this page

Turn over for the next question

*Do not write
outside the
box*

**DO NOT WRITE ON THIS PAGE
ANSWER IN THE SPACES PROVIDED**

Turn over ►



0 6 . 1

In genetic crosses, the observed phenotypic ratios obtained in the offspring are often **not** the same as the expected ratios.

Suggest **two** reasons why.

[2 marks]

- 1 _____
- _____
- 2 _____
- _____

In tomato plants, the genes for height and for the type of leaf are on the same homologous pair of chromosomes. The allele **T**, for a tall plant, is dominant to the allele **t**, for a dwarf plant. The allele **M**, for normal leaves, is dominant to the allele **m**, for mottled leaves.

A biologist carried out crosses between parent plants heterozygous for both genes and examined the offspring produced. The position of the two alleles for both genes was the same in each parent plant as shown in **Figure 7**. The phenotypes and number of offspring produced are shown in **Table 3**.

Figure 7

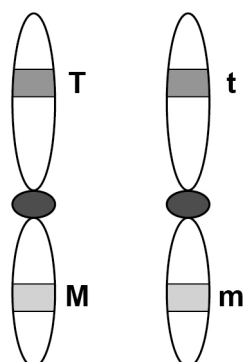


Table 3

Phenotype of offspring	Number of offspring
Tall plants and normal leaves	1860
Tall plants and mottled leaves	68
Dwarf plants and normal leaves	57
Dwarf plants and mottled leaves	580

0 6 . 2

What would be the genotype of the offspring with dwarf plants and mottled leaves?

[1 mark]



Do not write
outside the
box

0 6 . 3

Use the information provided to explain the results in **Table 3**.

[3 marks]

0 6 . 4

Complete **Table 4** to show the expected ratio of phenotypes if the same cross had been carried out but the genes for height of plant and for the type of leaf were on different homologous pairs of chromosomes.

[2 marks]

Table 4

Phenotype of offspring	Ratio of offspring

8

Turn over ►



0 7 . 1

Dopamine is a neurotransmitter released in some synapses in the brain. The transmission of dopamine is similar to that of acetylcholine.

Dopamine stimulates the production of nerve impulses in postsynaptic neurones.

Describe how.

Do **not** include in your answer the events leading to the release of dopamine and the events following production of nerve impulses at postsynaptic neurones.

[3 marks]

0 7 . 2

Dopamine has a role in numerous processes in the brain including pain relief. The release of dopamine can be stimulated by chemicals called endorphins produced in the brain. Endorphins attach to opioid receptors on presynaptic neurones that release dopamine.

Morphine is a drug that has a similar structure to endorphins and can provide pain relief.

Explain how.

[2 marks]

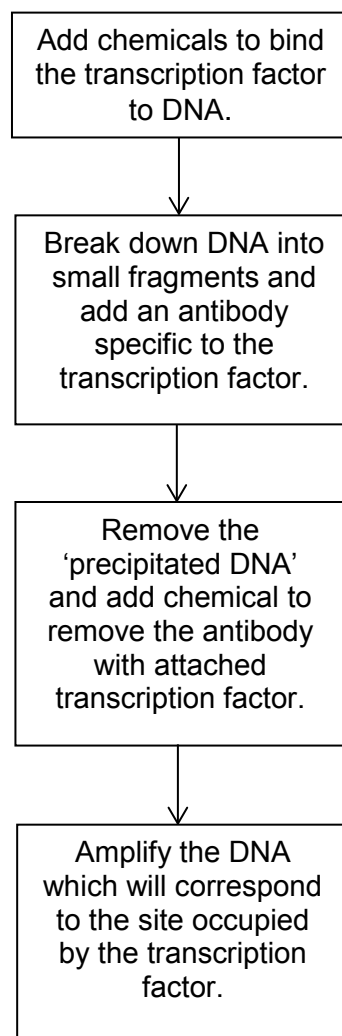


0 8 . 1 What is meant by a genome?

[1 mark]

Chromatin immunoprecipitation is one method to determine where a transcription factor binds to DNA. The principle behind this procedure is shown in **Figure 8**.

Figure 8



0 8 . 2

Explain why the antibody binds to the transcription factor.

[2 marks]

0 8 . 3

Use **Figure 8** to explain what 'precipitated DNA' consists of.**[1 mark]**

Soybeans are used in a number of processed foods. However, soybeans contain a protein known as P34 that causes an allergic response in some people. Scientists have created transgenic soybeans that produce single-stranded cDNA, which prevents transcription of the *P34* gene. They used recombinant plasmids as vectors to transform soybean cells. After they had screened these cells for production of the P34 protein, they cultured the transformed cells to form soybean plants.

0 8 . 4

Suggest how single-stranded cDNA could prevent transcription of the *P34* gene.**[1 mark]**

Question 8 continues on the next page**Turn over ►**

08.5

Describe the roles of **two** named types of enzymes used to insert DNA fragments into plasmids.

[2 marks]

Type of enzyme _____

Role _____

Type of enzyme _____

Role _____

08.6

The soybean cells were screened for the presence of the P34 protein. This process involved the use of gel electrophoresis to separate proteins extracted from soybean cells.

Suggest **two** features of the structure of different proteins that enable them to be separated by gel electrophoresis.

[2 marks]

1 _____

2 _____

9



There are no questions printed on this page

Turn over for the next question

*Do not write
outside the
box*

**DO NOT WRITE ON THIS PAGE
ANSWER IN THE SPACES PROVIDED**

Turn over ►



09.3

Lactase persistence is caused by a mutation in DNA. This mutation does **not** occur in the gene coding for lactase.

Suggest and explain how this mutation causes LP.

[2 marks]

8

Turn over for the next question

Turn over ►



1 0

Read the following passage.

Complete achromatopsia is a form of complete colour blindness. It is caused by having only rods and no functional cone cells. People with complete achromatopsia have difficulty in seeing detail. Complete achromatopsia is caused by an autosomal recessive allele and is usually very rare in populations with only one in 40 000 being affected. However on the Pacific island of Pingelap ten percent of the population are affected.

5

One form of red-green colour blindness is caused by a sex-linked recessive allele which affects more men than women. People with this red-green colour blindness are unable to distinguish between red and green, and also between other colours. They have green-sensitive cones but the photoreceptive pigment they contain does not function.

10

Scientists investigated the use of gene therapy to correct red-green colour blindness in monkeys. They injected viruses containing the gene for the green-sensitive pigment directly into the eyes of the monkeys. Although the monkeys maintained two years of colour vision, there is debate on whether this form of gene therapy is worthwhile. No clinical trials of this procedure have been carried out on humans. Current research into the treatment of red-green colour blindness involves the use of induced pluripotent stem cells (iPS cells). The use of iPS cells could have advantages over the use of gene therapy.

15

20

Use the information in the passage and your own knowledge to answer the following questions.

1 0 . 1

People with complete achromatopsia have difficulty in seeing detail (lines 2–3).

Explain why.

[3 marks]



1 0 . 2

Ten percent of the population on the Pacific island of Pingelap are affected by complete achromatopsia (lines 3–6).

Use the Hardy-Weinberg equation to calculate the percentage of this population who are heterozygous for this disorder.

Show your working.

[2 marks]

Answer = _____ %

1 0 . 3

Red-green colour blindness affects more men than women (lines 7–8).

Explain why.

[2 marks]

Question 10 continues on the next page

Turn over ►

1 0 . 4

People with red-green colour blindness are unable to distinguish between red and green, and also between other colours (lines 8–10).

Explain why.

[3 marks]

1 0 . 5

Current research into the treatment of red-green colour blindness involves the use of induced pluripotent stem cells (iPS cells) (lines 17–19).

Suggest how iPS cells could correct red-green colour blindness.

[2 marks]



There are no questions printed on this page

*Do not write
outside the
box*

**DO NOT WRITE ON THIS PAGE
ANSWER IN THE SPACES PROVIDED**

Copyright information

For confidentiality purposes, from the November 2015 examination series, acknowledgements of third party copyright material will be published in a separate booklet rather than including them on the examination paper or support materials. This booklet is published after each examination series and is available for free download from www.aqa.org.uk after the live examination series.

Permission to reproduce all copyright material has been applied for. In some cases, efforts to contact copyright-holders may have been unsuccessful and AQA will be happy to rectify any omissions of acknowledgements. If you have any queries please contact the Copyright Team, AQA, Stag Hill House, Guildford, GU2 7XJ.

Copyright © 2018 AQA and its licensors. All rights reserved.

