



**Surname** \_\_\_\_\_

**Other Names** \_\_\_\_\_

**Centre Number** \_\_\_\_\_

**Candidate Number** \_\_\_\_\_

**Candidate Signature** \_\_\_\_\_

**A-level**

**CHEMISTRY**

**Paper 2 Organic and Physical Chemistry**

**7405/2**

**Tuesday 12 June 2018**

**Afternoon**

**Time allowed: 2 hours**

**At the top of the page, write your surname and other names, your centre number, your candidate number and add your signature.**

**[Turn over]**



JUN187405201

**For this paper you must have:**

- **the Periodic Table/Data Booklet, provided as an insert (enclosed)**
- **a ruler with millimetre measurements**
- **a scientific calculator, which you are expected to use where appropriate.**

## **INSTRUCTIONS**

- **Use black ink or black ball-point pen.**
- **Answer ALL questions.**
- **You must answer the questions in the spaces provided. Do NOT write on the blank pages.**
- **Do all rough work in this book. Cross through any work you do not want to be marked.**



## **INFORMATION**

- **The marks for questions are shown in brackets.**
- **The maximum mark for this paper is 105.**

**DO NOT TURN OVER UNTIL TOLD  
TO DO SO**



**Answer ALL questions in the spaces provided.**

**0 1**

**This question is about the reactions of alkanes.**

**0 1**

**. 1 Alkanes can be used as fuels.**

**Give an equation for the combustion of heptane (C<sub>7</sub>H<sub>16</sub>) in an excess of oxygen. [1 mark]**

---

---

**BLANK PAGE**

**[Turn over]**



**0 1 . 2** Heptane can be obtained from the catalytic cracking of hexadecane ( $C_{16}H_{34}$ ) at a high temperature.

**Identify a suitable catalyst for this process.**

**Give ONE condition other than high temperature.**

**Give an equation for the catalytic cracking of one molecule of hexadecane to produce one molecule of heptane, one molecule of cyclohexane and one other product. [3 marks]**

**Catalyst** \_\_\_\_\_

**Condition** \_\_\_\_\_

**Equation** \_\_\_\_\_

**0 1 . 3** Alkanes can be used in free-radical substitution reactions to produce halogenoalkanes.

**Give equations for the propagation steps in the reaction of butane to form 2-chlorobutane. [2 marks]**

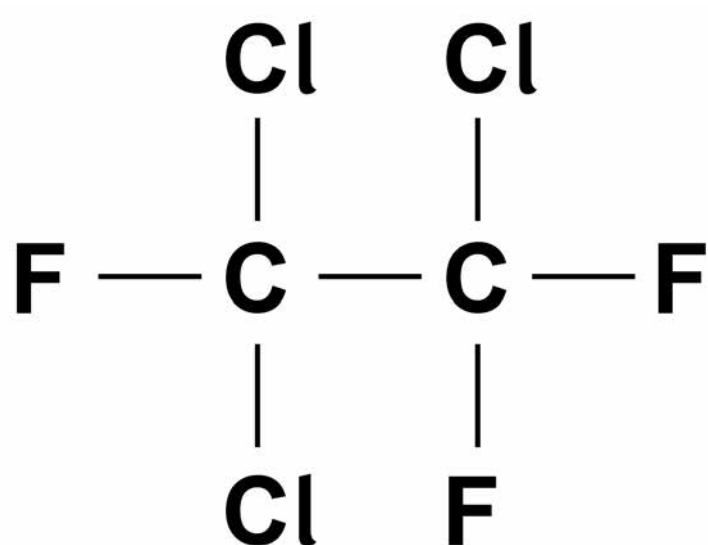
---

---

**[Turn over]**

**01.4** Chlorofluorocarbons (CFCs) are a group of halogenoalkanes currently banned in many countries. They cannot be used as solvents or refrigerants because of their effect on the environment.

The structure of a CFC is shown.



Identify the radical produced from this CFC that is responsible for the depletion of ozone in the atmosphere.





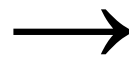
**0 2**

**Halogenoalkanes are useful compounds in synthesis. A reaction pathway is shown.**

**Reaction 1**



**10**



**Reaction 2**

**Reaction 3**

**Compound Z**



**Compound Y**



**02.1** Give the IUPAC name for  $\text{CH}_2(\text{OH})\text{CH}(\text{CH}_3)\text{CH}_2\text{Br}$   
[1 mark]

---

---

**11**

**[Turn over]**



**02.2**

**Reaction 1 occurs via a nucleophilic substitution mechanism.**

**Explain why the halogenoalkane is attacked by the nucleophile in this reaction. [3 marks]**

---

---

---

---

---

---

---

---

---

---

**12**



---

---

---

---

---

---

**[Turn over]**



**0 2 . 3** The infrared spectrum of Compound Y shows a significant absorption in the range  $1680\text{--}1750\text{ cm}^{-1}$

**Draw the displayed formula of Compound Y. [1 mark]**

**0 2 . 4** Compound Z has the empirical formula  $C_3H_4NO$

**Give the structure of Compound Z.**

**Suggest the reagent for Reaction 3. [2 marks]**

**Structure**

**Reagent for Reaction 3**

---

**[Turn over]**

**7**



**03**

The oxidation of propan-1-ol can form propanal and propanoic acid.

The boiling points of these compounds are shown in TABLE 1.

**TABLE 1**

<b>Compound</b>	<b>Boiling point / °C</b>
<b>propan-1-ol</b>	<b>97</b>
<b>propanal</b>	<b>49</b>
<b>propanoic acid</b>	<b>141</b>

In a preparation of propanal, propan-1-ol is added dropwise to the oxidising agent and the aldehyde is separated from the reaction mixture by distillation.





**BLANK PAGE**





**0 3 . 2** Give TWO ways of maximising the yield of propanal obtained by distillation of the reaction mixture. [2 marks]

1 \_\_\_\_\_

---

---

---

---

---

---

---

---

---

---

---



**0 3 . 3** Describe how you would carry out a simple test-tube reaction to confirm that the sample of propanal obtained by distillation does NOT contain any propanoic acid. [2 marks]

---

---

---

---

---

---

---

---

---

---

**BLANK PAGE**

**[Turn over]**



**03.4**

**A student carried out an experiment to determine the enthalpy of combustion of ethanol.**

**Combustion of 457 mg of ethanol increased the temperature of 150 g of water from 25.1 °C to 40.2 °C**

**Calculate a value, in  $\text{kJ mol}^{-1}$ , for the enthalpy of combustion of ethanol in this experiment. Give your answer to the appropriate number of significant figures.**

**(The specific heat capacity of water is  $4.18 \text{ J K}^{-1} \text{ g}^{-1}$ ) [3 marks]**



**Enthalpy of combustion**

\_\_\_\_\_ **kJ mol<sup>-1</sup>**

**[Turn over]**



**03.5** A mixture of isomeric alkenes is produced when pentan-2-ol is dehydrated in the presence of hot concentrated sulfuric acid. Pent-1-ene is one of the isomers produced.

**Name and outline a mechanism for the reaction producing pent-1-ene. [4 marks]**

**Name of mechanism**

---

---

# Mechanism

**[Turn over]**



**03.6** A pair of stereoisomers is also formed in the reaction in Question 03.5.

**Name the less polar stereoisomer formed. Explain how this type of stereoisomerism arises. [2 marks]**

**Name** \_\_\_\_\_

**Explanation** \_\_\_\_\_

---

---

---

---

---

---

---

---

---

---

**BLANK PAGE**

**[Turn over]**

**0 4**

**Compounds A and B react together to form an equilibrium mixture containing compounds C and D according to the equation**

**0 4****. 1**

**A beaker contained 40 cm<sup>3</sup> of a 0.16 mol dm<sup>-3</sup> aqueous solution of A.**

**9.5 × 10<sup>-3</sup> mol of B and**

**2.8 × 10<sup>-2</sup> mol of C were added to the beaker and the mixture was left to reach equilibrium.**

**The equilibrium mixture formed contained 3.9 × 10<sup>-3</sup> mol of A.**

**Calculate the amounts, in moles, of B, C and D in the equilibrium mixture. [5 marks]**

**Amount of B** \_\_\_\_\_ **mol**  
**Amount of C** \_\_\_\_\_ **mol**  
**Amount of D** \_\_\_\_\_ **mol**

**[Turn over]**



**BLANK PAGE**





**0 4 . 2** Give the expression for the equilibrium constant ( $K_c$ ) for this equilibrium AND its units.  
[2 marks]

$K_c$

Units \_\_\_\_\_

[Turn over]

**04.3**

A different equilibrium mixture of these four compounds, at a different temperature, contained 0.21 mol of B, 1.05 mol of C and 0.076 mol of D in a total volume of  $5.00 \times 10^2 \text{ cm}^3$  of solution.

At this temperature the numerical value of  $K_c$  was 116

Calculate the concentration of A, in  $\text{mol dm}^{-3}$ , in this equilibrium mixture.

Give your answer to the appropriate number of significant figures. [3 marks]

Concentration of A \_\_\_\_\_ mol dm<sup>-3</sup>

[Turn over]



**BLANK PAGE**





**0 5** Bromate(V) ions and bromide ions react in acid conditions according to the equation



**0 5 . 1** A series of experiments was carried out at a given temperature. The results were used to deduce the rate equation for the reaction.

$$\text{rate} = k [\text{BrO}_3^-][\text{Br}^-][\text{H}^+]^2$$

**TABLE 2** shows an incomplete set of results.



**TABLE 2**

<b>Experiment</b>	<b>Initial [BrO<sub>3</sub><sup>-</sup>] / mol dm<sup>-3</sup></b>	<b>Initial [Br<sup>-</sup>] / mol dm<sup>-3</sup></b>	<b>Initial [H<sup>+</sup>] / mol dm<sup>-3</sup></b>	<b>Initial rate of reaction / mol dm<sup>-3</sup> s<sup>-1</sup></b>
<b>1</b>	<b>0.10</b>	<b>0.20</b>	<b>0.30</b>	<b>2.4 × 10<sup>-2</sup></b>
<b>2</b>		<b>0.20</b>	<b>0.30</b>	<b>3.6 × 10<sup>-2</sup></b>
<b>3</b>	<b>0.20</b>	<b>0.40</b>	<b>0.50</b>	
<b>4</b>	<b>0.10</b>	<b>0.10</b>		<b>2.7 × 10<sup>-2</sup></b>

**[Turn over]**

**Use the data from Experiment 1 to calculate a value for the rate constant,  $k$ , at this temperature and give its units.**

**Give your answer to an appropriate number of significant figures. [3 marks]**

**$k$**  \_\_\_\_\_

**Units** \_\_\_\_\_






**05.2 Complete TABLE 2. [3 marks]**

**Space for working**

**41**

**[Turn over]**



**05.3**

**A second series of experiments was carried out to investigate how the rate of the reaction varies with temperature.**

**The results were used to obtain a value for the activation energy of the reaction,  $E_a$**

**Identical amounts of reagents were mixed at different temperatures.**

**The time taken,  $t$ , for a fixed amount of bromine to be formed was measured at different temperatures.**

**The results are shown in TABLE 3.**

**TABLE 3**

<b>Temperature, <math>T</math> / K</b>	<b><math>\frac{1}{T}</math> / K<sup>-1</sup></b>	<b>Time, <math>t</math> / s</b>	<b><math>\frac{1}{t}</math> / s<sup>-1</sup></b>	<b><math>\ln \frac{1}{t}</math></b>
<b>286</b>	<b><math>3.50 \times 10^{-3}</math></b>	<b>54</b>	<b><math>1.85 \times 10^{-2}</math></b>	<b>-3.99</b>
<b>295</b>	<b><math>3.39 \times 10^{-3}</math></b>	<b>27</b>	<b><math>3.70 \times 10^{-2}</math></b>	
<b>302</b>		<b>15</b>	<b><math>6.67 \times 10^{-2}</math></b>	<b>-2.71</b>
<b>312</b>	<b><math>3.21 \times 10^{-3}</math></b>	<b>8</b>	<b><math>1.25 \times 10^{-1}</math></b>	<b>-2.08</b>

**43****Complete TABLE 3. [2 marks]****[Turn over]**

**05.4**

The Arrhenius equation can be written as

$$\ln k = -\frac{E_a}{R} \left( \frac{1}{T} \right) + C_1$$

In this experiment, the rate constant,  $k$ , is directly proportional to  $\frac{1}{t}$

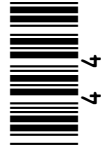
Therefore

$$\ln \frac{1}{t} = -\frac{E_a}{R} \left( \frac{1}{T} \right) + C_2$$

where  $C_1$  and  $C_2$  are constants.

Use values from TABLE 3, on page 43, to plot a

graph of  $\ln \frac{1}{t}$  (y axis) against  $\frac{1}{T}$  on the grid, on page 46.



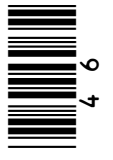
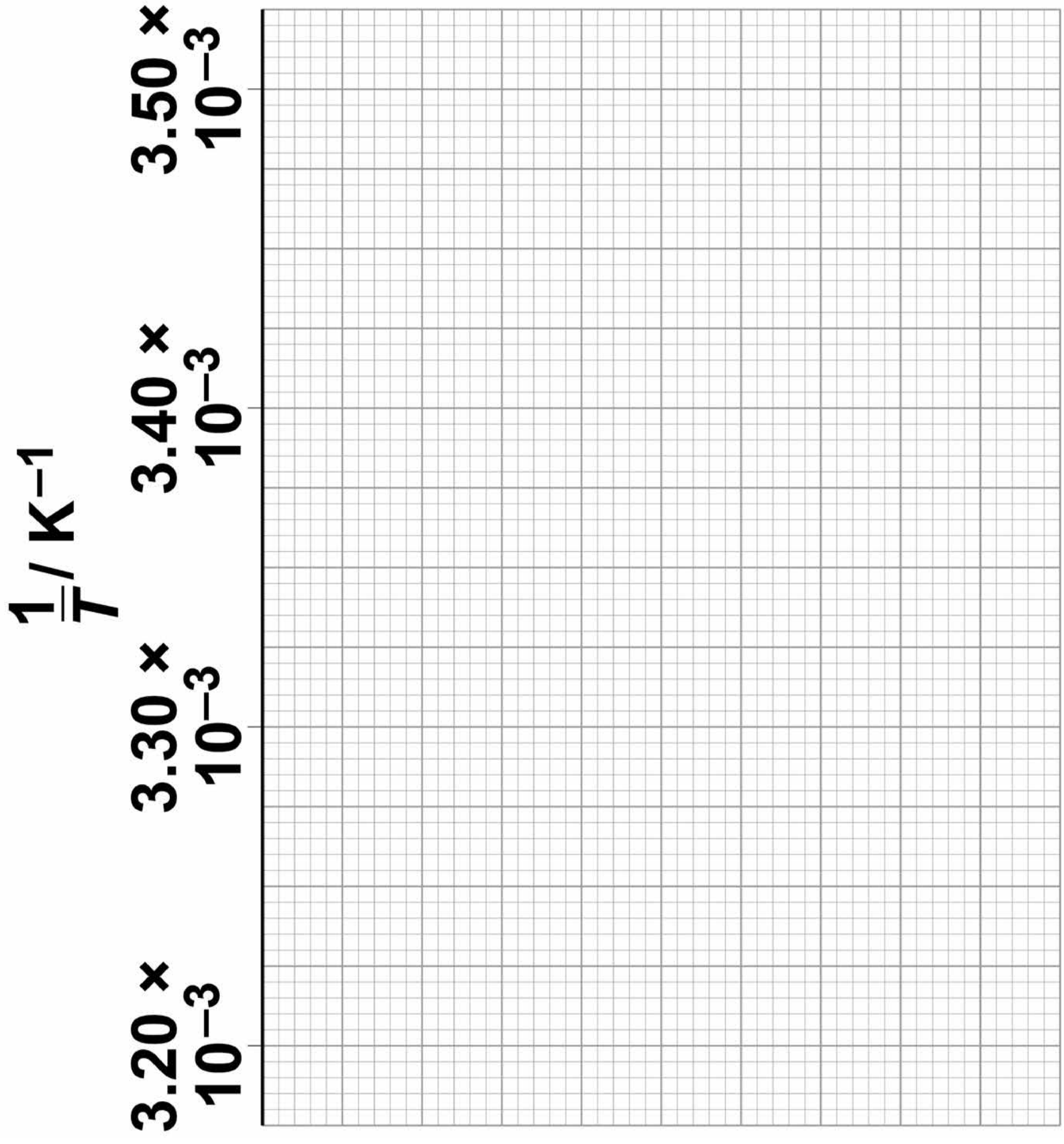
**Use your graph to calculate a value for the activation energy, in  $\text{kJ mol}^{-1}$ , for this reaction.**

**The value of the gas constant,  $R = 8.31 \text{ J K}^{-1} \text{ mol}^{-1}$   
[6 marks]**

**[Turn over]**

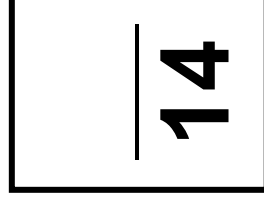
**45**





Activation energy \_\_\_\_\_  $\text{kJ mol}^{-1}$

[Turn over]



**0 6**

Data about the hydrogenation of cyclohexene and of benzene are given.

**0 6 . 1**

Explain the bonding in and the shape of a benzene molecule. Compare the stability of benzene with that of the hypothetical cyclohexa-1,3,5-triene molecule. Use the data in your answer. [6 marks]

---

---

---

---













**07**

**Acyl chlorides are useful reagents in synthesis. They react with aromatic compounds and also with alcohols.**

**07****.1**

**CH<sub>3</sub>CH<sub>2</sub>COCl reacts with benzene in the presence of AlCl<sub>3</sub> in an electrophilic substitution reaction.**

**Give an equation for the reaction of CH<sub>3</sub>CH<sub>2</sub>COCl with AlCl<sub>3</sub> to form the electrophile.**

**Outline a mechanism for the reaction of this electrophile with benzene. [4 marks]**

**Equation** \_\_\_\_\_

**Mechanism**

**[Turn over]**

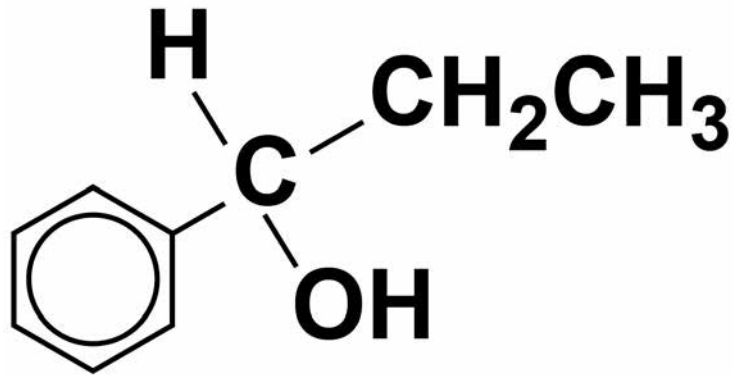


**BLANK PAGE**





**07.2** The organic product in Question 07.1 can be converted into the alcohol shown.



**Give the IUPAC name of the alcohol.**

**Give the reagent needed for this reaction and name the mechanism. [3 marks]**

**IUPAC name** \_\_\_\_\_

**Reagent** \_\_\_\_\_

**Name of mechanism** \_\_\_\_\_

**[Turn over]**

**07.3** The alcohol shown in Question 07.2 reacts with ethanoyl chloride to form an ester.

**Describe what would be observed when the alcohol reacts with ethanoyl chloride. Name the mechanism for the reaction to form the ester.**

**Draw the structure of the ester.  
[3 marks]**

**Observation** \_\_\_\_\_  
\_\_\_\_\_  
\_\_\_\_\_

**Name of mechanism** \_\_\_\_\_  
\_\_\_\_\_

# Structure of ester

**[Turn over]**

<hr/>
<b>10</b>

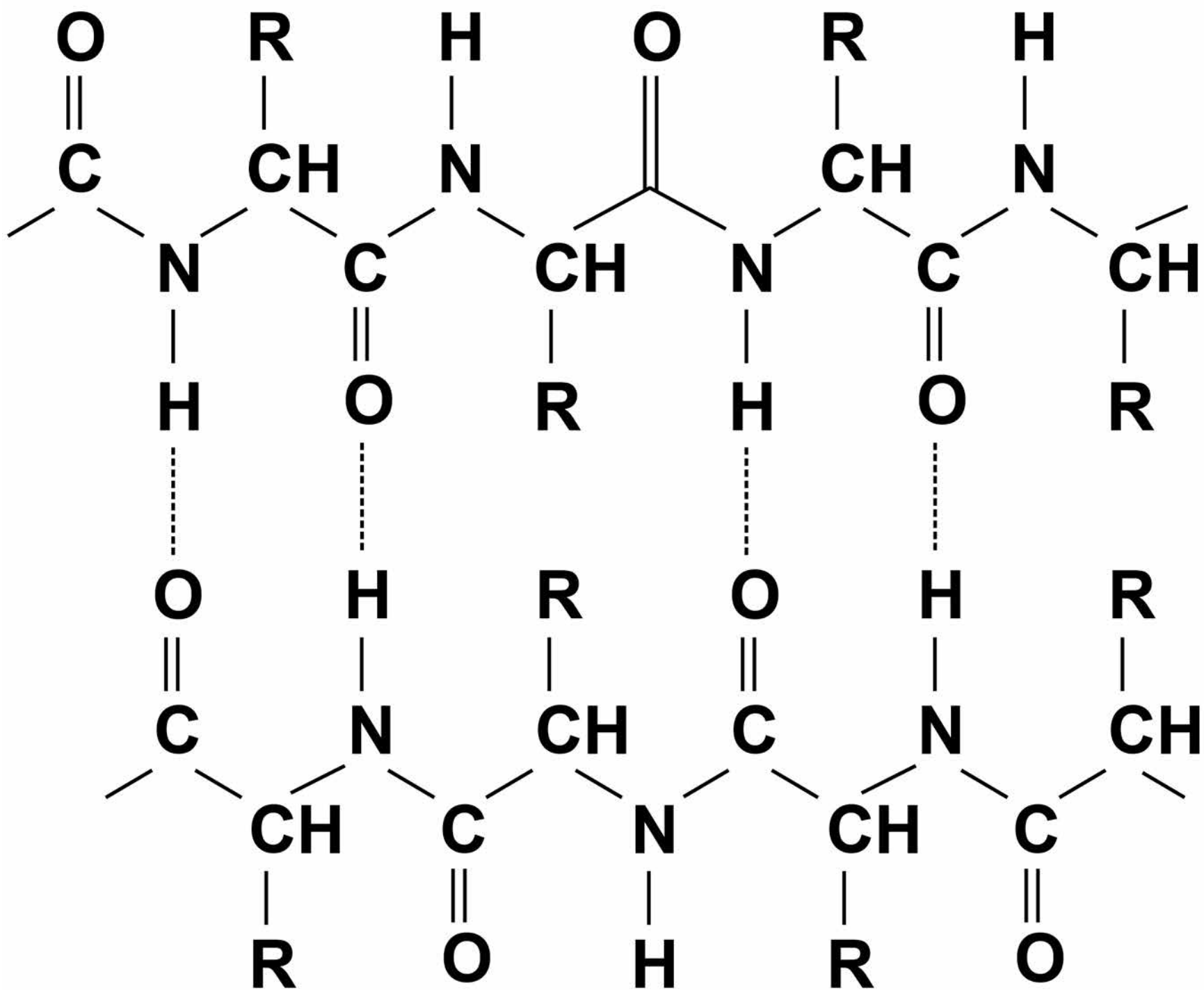


08

Use the Data Booklet to help you answer this question about amino acids.

FIGURE 1 shows parts of two polypeptide chains in a beta-pleated sheet of a protein.

FIGURE 1



**0 8 . 1** The polypeptide chains are held together by hydrogen bonding as shown in FIGURE 1.

**Explain how these hydrogen bonds form. [2 marks]**

---

---

---

---

---

---

---

---

---

---

---

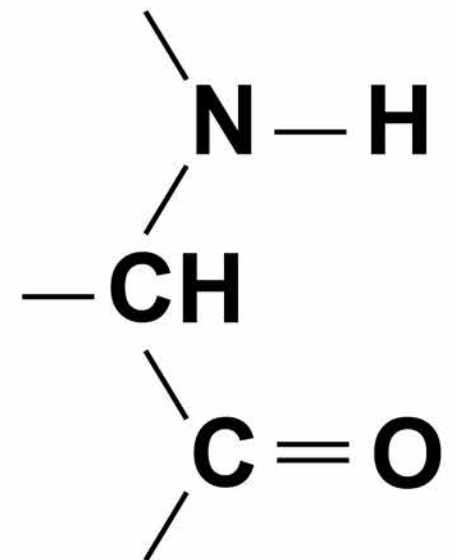
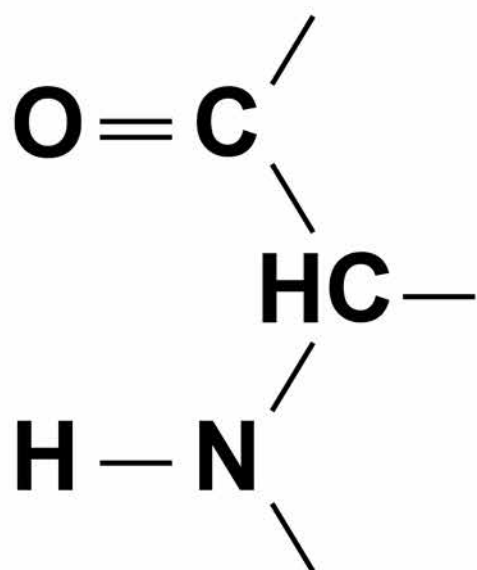
---

**[Turn over]**



**08.2** A different type of bond can form between two polypeptide chains when the chains each contain the amino acid cysteine.

Complete the structure to show the bond that forms between the side chains of two cysteine molecules. [1 mark]



**08.3** The type of bond in Question 08.2 between two polypeptide chains influences the three-dimensional structure of the protein.

**Name this type of protein structure. [1 mark]**

---

---

**[Turn over]**

**BLANK PAGE**





**08.4** Draw the structure of the zwitterion of a dipeptide formed by alanine and serine. [2 marks]

**[Turn over]**

**6**



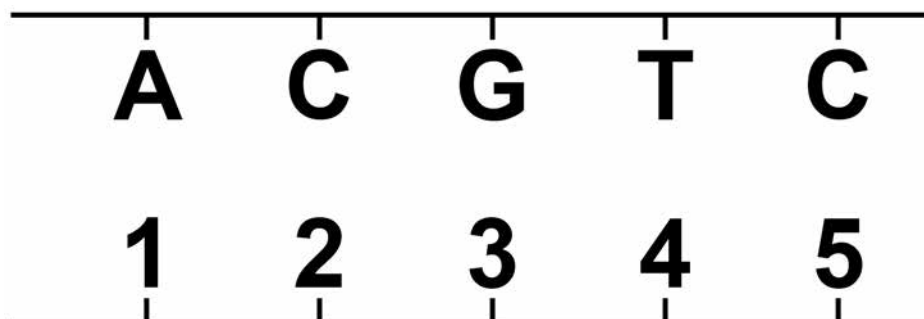
**09**

Use the Data Booklet to help you answer this question about DNA. **FIGURE 2** shows a fragment of a DNA double helix.

The letters **A, C, G** and **T** represent the four bases in one strand.

The numbers **1, 2, 3, 4** and **5** represent the bases in the complementary strand.

**FIGURE 2**



09.1

**Complete TABLE 4 to show the correct sequence of bases in the complementary strand represented by the numbers 1 to 5**

**[1 mark]**

**TABLE 4**

1	2	3	4	5

09.2

**Deduce the total number of hydrogen bonds formed between the five bases in each strand.**

**Tick (✓) ONE box. [1 mark]**

10
<input type="checkbox"/>

12
<input type="checkbox"/>

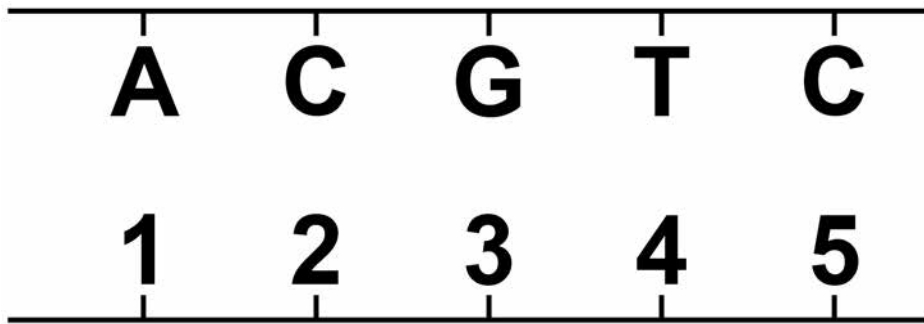
13
<input type="checkbox"/>

15
<input type="checkbox"/>

**[Turn over]**



## Repeat of FIGURE 2

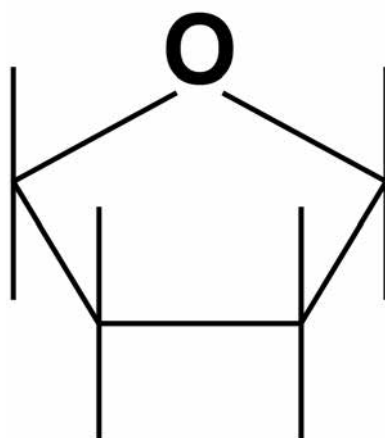


**09.3** Base A is part of a nucleotide in the DNA strand shown in **FIGURE 2**.

A nucleotide contains a 2-deoxyribose molecule. An incomplete 2-deoxyribose molecule is shown.

Complete the structure to show the nucleotide that contains base A.

You should represent base A by the letter A. [2 marks]



**[Turn over]**

**4**



**1 0** This question is about amines.

**1 0 . 1** The infrared spectra A, B and C are those of a primary amine, a tertiary amine and a nitrile, but not necessarily in that order.

**A**

**Transmittance**

**/%**

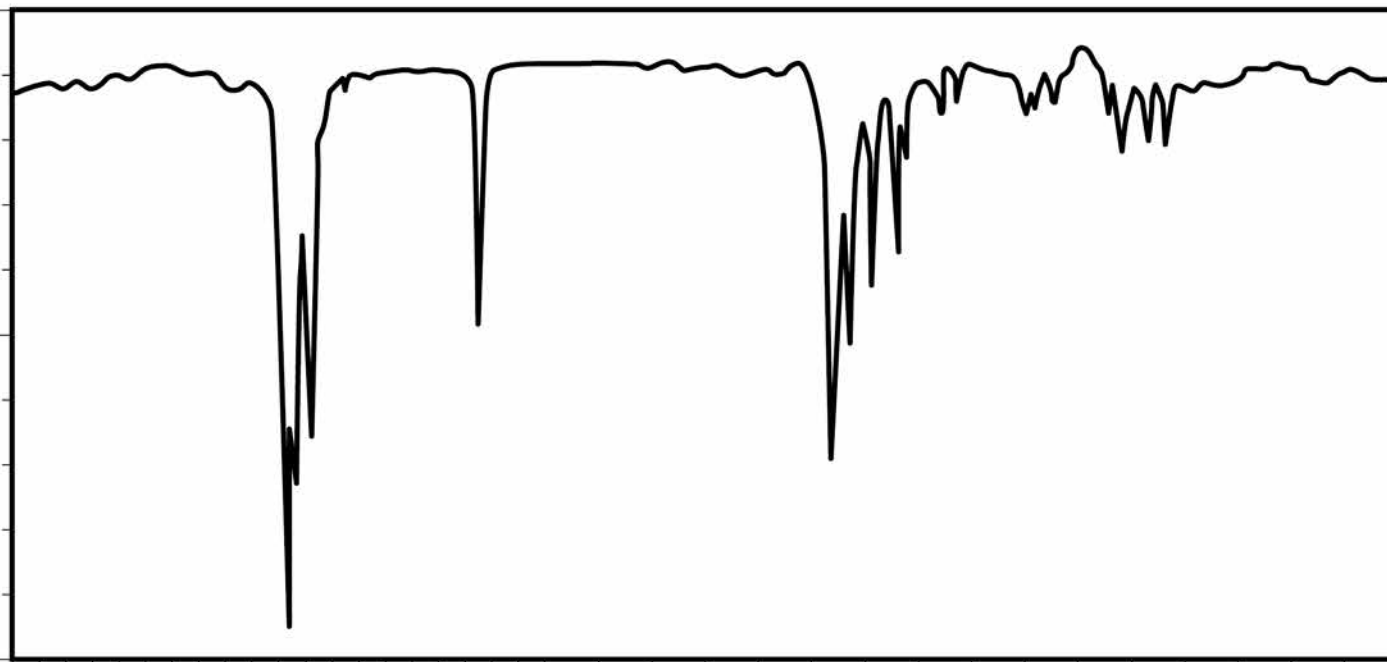
**100**

**50**

**0**

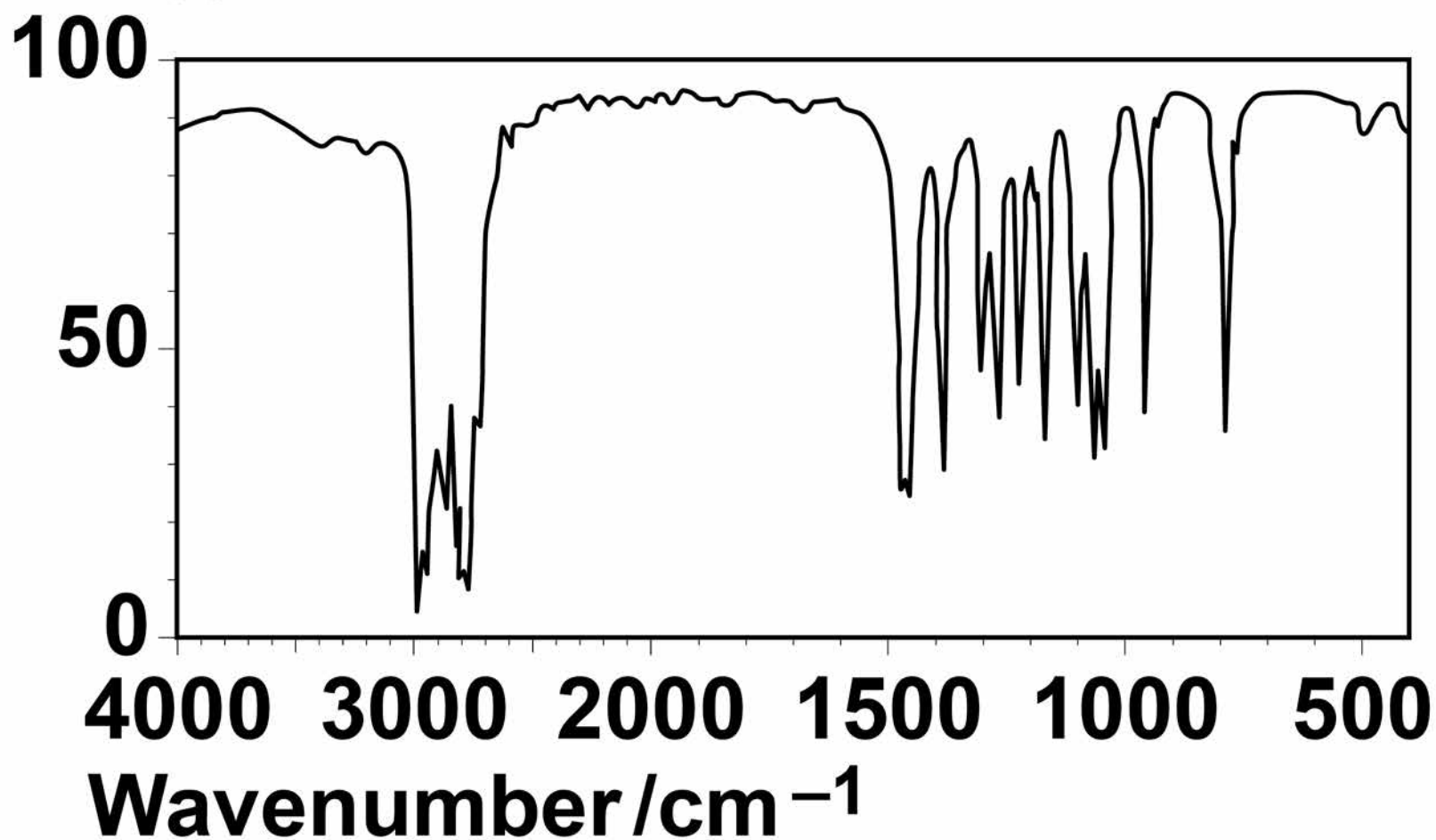
**4000 3000 2000 1500 1000 500**

**Wavenumber/cm<sup>-1</sup>**

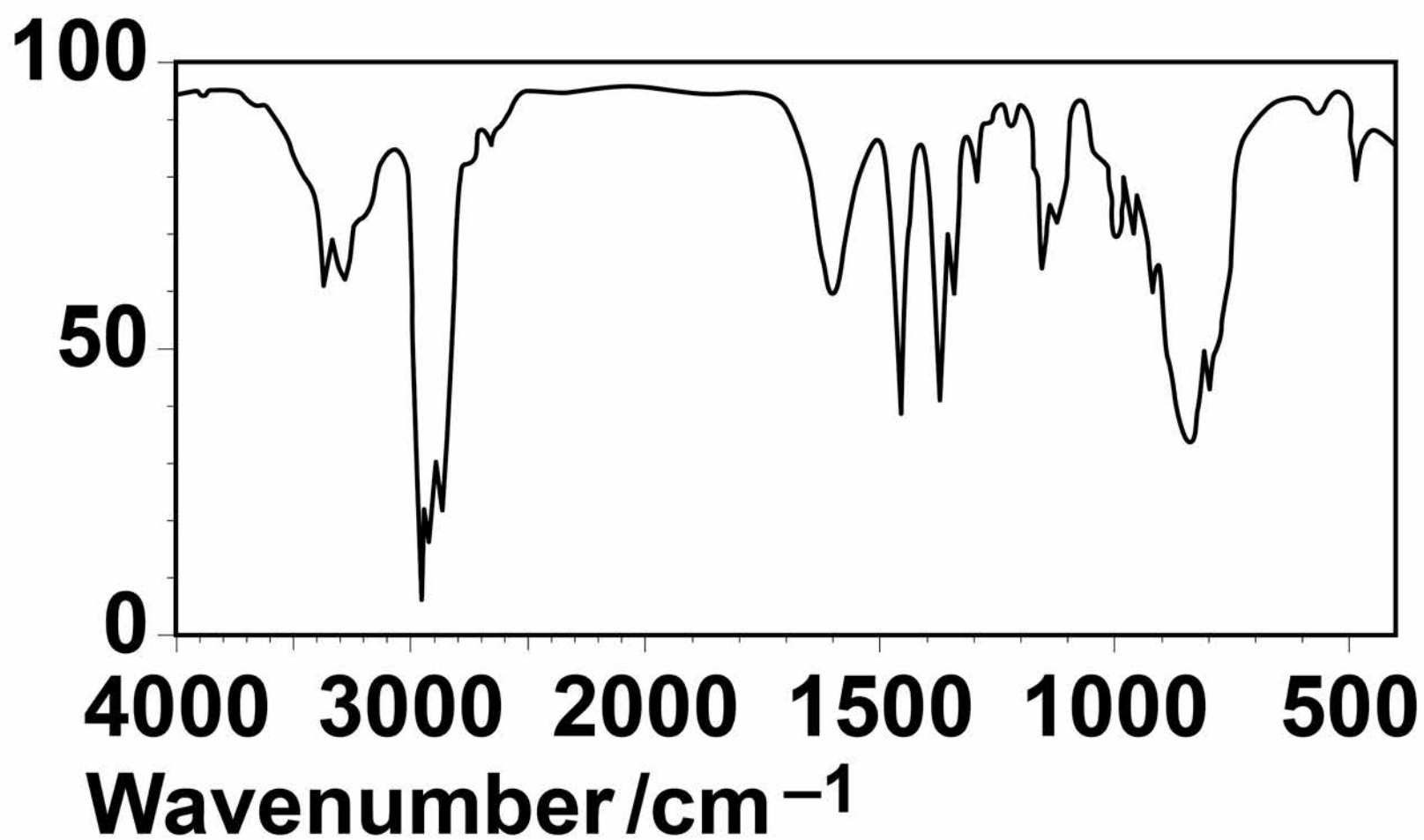


**B****Transmittance**

/ %

**C****Transmittance**

/ %

**[Turn over]**

**BLANK PAGE**





**Give the letter of each compound in the correct box. [1 mark]**

<b>primary amine</b>	
<b>tertiary amine</b>	
<b>nitrile</b>	

**[Turn over]**

**10.2** There are **THREE** secondary amines that contain four carbon atoms per molecule.

**Draw the skeletal formulas of these THREE secondary amines. [2 marks]**

**1 0 . 3** Primary amines can be prepared by the reaction of halogenoalkanes with ammonia or by the reduction of nitriles.

**Justify the statement that it is better to prepare primary amines from nitriles rather than from halogenoalkanes. [2 marks]**

---

---

---

---

---

---

---

---

---

---

---

**[Turn over]**

**10.4** Draw the structure of a primary amine with four carbon atoms that **CANNOT** be formed from a nitrile. [1 mark]

**10.5** A student dissolves a few drops of propylamine in 1 cm<sup>3</sup> of water in a test tube.

**Give an equation for the reaction that occurs.**

**Describe what is observed when Universal Indicator is added to this solution. [2 marks]**

**Equation** \_\_\_\_\_

**Observation** \_\_\_\_\_

---

---

---

---

---

---

---

---

---

---

**[Turn over]**



**BLANK PAGE**



**10.6** Phenylamine can be prepared by a process involving the reduction of nitrobenzene using tin and an excess of hydrochloric acid.

**Give an equation for the reduction of nitrobenzene to form phenylamine. Use [H] to represent the reducing agent. Explain why an aqueous solution is obtained in this reduction even though phenylamine is insoluble in water. [2 marks]**

**Equation** \_\_\_\_\_

**Explanation** \_\_\_\_\_

---

---

---

---

**[Turn over]**

**10**

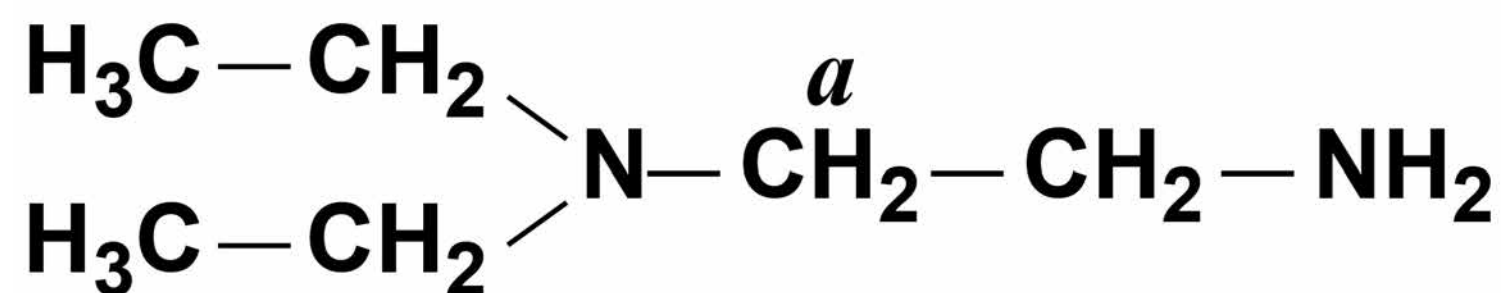


1	1
---	---

There are several isomers with the molecular formula  $C_6H_{16}N_2$

1	1	.	1
---	---	---	---

One isomer is shown.



Give the number of peaks in the  $^{13}C$  NMR spectrum of this isomer.

State and explain the splitting pattern of the peak for the hydrogens labelled *a* in its  $^1H$  NMR spectrum. [3 marks]



Number of  $^{13}\text{C}$  peaks \_\_\_\_\_

Splitting pattern \_\_\_\_\_

\_\_\_\_\_

**Explanation**

\_\_\_\_\_

\_\_\_\_\_

\_\_\_\_\_

\_\_\_\_\_

\_\_\_\_\_

\_\_\_\_\_

\_\_\_\_\_

\_\_\_\_\_

**[Turn over]**



**1 1 . 2** Draw the structure of the isomer of  $C_6H_{16}N_2$  used to make nylon 6,6 [1 mark]



**1 1 . 3** Draw the structure of the isomer of  $C_6H_{16}N_2$  that contains two **PRIMARY** amine groups and has only two peaks in its  $^{13}C$  NMR spectrum. [1 mark]

**[Turn over]**



**1 1 . 4** Draw the structure of the isomer of  $C_6H_{16}N_2$  that contains two TERTIARY amine groups and has only two peaks in its  $^{13}C$  NMR spectrum. [1 mark]

**END OF QUESTIONS**

**6**



**There are no questions printed on this page**



**There are no questions printed on this page**

For Examiner's Use	
Question	Mark
1	
2	
3	
4	
5	
6	
7	
8	
9	
10	
11	
<b>TOTAL</b>	

### Copyright information

For confidentiality purposes, from the November 2015 examination series, acknowledgements of third party copyright material will be published in a separate booklet rather than including them on the examination paper or support materials. This booklet is published after each examination series and is available for free download from [www.aqa.org.uk](http://www.aqa.org.uk) after the live examination series.

Permission to reproduce all copyright material has been applied for. In some cases, efforts to contact copyright-holders may have been unsuccessful and AQA will be happy to rectify any omissions of acknowledgements. If you have any queries please contact the Copyright Team, AQA, Stag Hill House, Guildford, GU2 7XJ.

Copyright © 2018 AQA and its licensors. All rights reserved.

**IB/M/Jun18/JD/7405/2/E3**

